

• SAMPLE TEST PAPER •

Resonance National Entrance Test (ResoNET)

For Pre-foundation Career Care Programmes (PCCP)

FOR CLASS X/ WINNER/ SMART



Practice, Persistence and Performance





CG Tower Campus, Kota



VISION

Excellence in Career Education



MISSION

Practice, Persistence and Performance



VALUES

- Leadership with humane touch at various levels
- Integrity, transparency and openness in all our actions
- Innovation and pursuit of excellence in career education
- Address the needs of students through career oriented initiatives
- Strive to continuously improve our processes and quality of deliverables

R.K. Verma (RKV Sir)
 B.Tech. (IIT-Madras, 1994)
 Founder | Managing Director
 Head (Academics) | Sr. Faculty (Physics)

About Resonance:
 Established on: 11th April, 2001
 Head Quarter: Kota (Rajasthan)
 PAN India Network: 70+ Cities

S.No.	Academic Division	Classes	Target Examinations
1.	Pre-Engineering Division: JEE (Advanced)	IX, X, XI, XII & XII+	JEE (Advanced) JEE (Main) Olympiads
2.	Pre-Engineering Division: JEE (Main)	IX, X, XI, XII & XII+	JEE (Main) Other Engineering Entrance Exams
3.	Pre-Medical Division	IX, X, XI, XII & XII+	NEET (UG) Olympiads
4.	Pre-foundation Career Care Programme Division (PCCP)	V, VI, VII, VIII, IX & X	School & Board Exams NTSE Olympiads STSE
5.	Distance Learning Programme Division (DLPD)	V to XII & XII+	JEE (Main) JEE (Advanced) NEET (UG) OLYMPIADS PRE-FOUNDATION OTHERS
6.	EdTech Division	V to XII & XII+	JEE (Main) JEE (Advanced) NEET (UG) PRE-FOUNDATION
7.	Resonance International Studies Division (Reso-ISD)	VI to XII & XII+	JEE (Main) JEE (Advanced) NEET (UG) OLYMPIADS PRE-FOUNDATION Upcoming: SAT IELTS GRE PTE

CLASS X	<h2 style="margin: 0;">SAMPLE TEST PAPER (STP)</h2> <p style="margin: 0;">(For Class-IX Passed Students)</p> <p style="margin: 0;">CLASS-X (FOR CLASS IX TO X/WINNER/SMART MOVING STUDENT)</p> <hr/> <p style="margin: 0;">TARGET: SCHOOL / OLYMPIAD</p>
---	--

S.No.	Particulars	Page Number		Total Pages
		From	To	
1	Guidelines and Instructions for Entrance Test	2	2	1
2	ResoNET Question Paper Structure & Syllabus	3	3	1
3	Sample Test Paper (STP): For Class IX passed students (For the students applying for course Class IX to X moving Student).	4	10	7
4	Sample Test Paper: Answer Key (AK)	11	11	1
5	Sample ORS Answer Sheet for Resonance National Entrance Test (ResoNET)	12	12	1
	Total Pages			11

The sample test papers are only for reference and guidance. The sample papers given in the booklet are actually the papers of previous year's ResoNET conducted by Resonance for its various courses.

Note : Resonance reserves the right to change the pattern of Resonance National Entrance Test (ResoNET). Previous year papers do not guarantee that the papers for this year selection test will be on the same pattern. However, the syllabus of the test paper will be equivalent to the syllabus of qualifying school/board examination and as given on page nos. 1 to 12.

© Copyright reserved.
 All rights reserved. Any photocopying, publishing or reproduction of full or any part of this study material is strictly prohibited. This material belongs to enrolled student of RESONANCE only. Any sale/resale of this material is punishable under law, subject to Kota Jurisdiction only.

GUIDELINES AND INSTRUCTIONS FOR ENTRANCE TEST

FOR ONLINE EXAMINATION

In Online Examination system; Test will be conducted in fully computerized, user friendly mode with advanced security features making it fair, transparent and standardized.

Information & Instructions:

1. The examination does not require using any paper, pen, pencil and calculator.
2. Every student will take the examination on a Laptop/Desktop/Smart Phone.
3. If you are using your personal laptop/Desktop, please make sure that you **have installed the necessary software and programs** & having proper internet connection before the examination day. It is important that your laptop/desktop/Smartphone-Mobile **fulfils the system requirements** of the programme.
4. You must bring your own power supply for use during the examination.
5. If failure to comply with these recommendations results in technical problems that cause a delay in your examination, you cannot expect to be granted extended time.
6. Kindly remember your Resonance Application Form No. as a Roll No.
7. You are not permitted to leave the Venue/any movement from Laptop/Desktop/Mobile screen during examination.
8. The students just need to click on the Right Choice / Correct option from the multiple choices /options given with each question. For Multiple Choice Questions, each question has four options, and the candidate has to click the appropriate option.

FOR OFFLINE EXAMINATION

1. This booklet is your Question Paper.
2. The **Question Paper Code** is printed on the top right corner of this sheet.
3. Blank papers, clip boards, log tables, slide rule, calculators, mobile or any other electronic gadgets in any form are not allowed to be used.
4. Write your **Name & Application Form Number** in the space provided in the bottom of this booklet.
5. Before answering the paper, fill up the required details in the blank space provided in the Objective Response Sheet.
6. Do not forget to mention your paper code and **Application Form Number** neatly and clearly in the blank space provided in the Objective Response Sheet (ORS) / Answer Sheet.
7. No rough sheets will be provided by the invigilators. All the rough work is to be done in the blank space provided in the question paper.
8. No query related to question paper of any type is to be put to the invigilator.

RESONET QUESTION PAPER STRUCTURE

For Class IX to X Moving Student							
S.No.	Part	Subject	Type of Question	No. of Ques.	Marking Scheme		
					Full Marks per Qs.	Negative Marking	Total
1 to 25	I	Mathematics	Single Choice Questions (Only One Correct Option) (MCQ)	25	3	0	75
26 to 35	II	Physics	Single Choice Questions (Only One Correct Option) (MCQ)	10	3	0	30
36 to 45	III	Chemistry	Single Choice Questions (Only One Correct Option) (MCQ)	10	3	0	30
46 to 55	IV	Biology	Single Choice Questions (Only One Correct Option) (MCQ)	10	3	0	30
56 to 70	V	Mental Ability	Single Choice Questions (Only One Correct Option) (MCQ)	15	3	0	45
Total				70			210

RESONET SYLLABUS FOR CBSE & OLYMPIAD (PREVIOUS YEAR)

FOR CLASS IX TO X MOVING STUDENT		
SUBJECT	SYLLABUS FROM CLASS	TOPIC
MATHEMATICS	IX	Number System, Polynomials, Coordinate Geometry, Lines and Angles, Congruent Triangles, Heron's Formula, Linear Equation in two variables, Quadrilaterals, Area of Parallelograms, Triangles, Circles, Surface Area and Volume, Statistics, Probability.
PHYSICS	IX	Motion, Force and Newton's Laws, Gravitation, Fluid, Work, Energy and Power, Wave Motion And Sound.
CHEMISTRY	IX	Matter in our Surroundings, Is Matter Around us Pure, Atoms and Molecules, Structure of Atom.
BIOLOGY	IX	Fundamental unit of life, Tissue, Improvement in food resources, Diversity of living organism, Why do we fall ill, Naturalresources.
MENTAL ABILITY	IX	Number-Series, Alphabet-Series, Missing Term in Figures, Coding-Decoding, Direction, Sense Test, Seating Arrangement, Puzzle Test, Syllogism, Day, Date and Time, Dice Test, Cube Test, Non-Verbal Series, Non-Verbal Analogy, Non-Verbal Classification.

CLASS
X
SAMPLE TEST PAPER (STP)

(For Class-IX Passed Students)

CLASS-X (FOR CLASS IX TO X/WINNER/SMART MOVING STUDENT)
TARGET: SCHOOL / OLYMPIAD
For Class IX to X Moving Student

S.No.	Part	Subject	Type of Question	No. of Ques.	Marking Scheme		
					Full Marks per Qs.	Negative Marking	Total
1 to 25	I	Mathematics	Single Choice Questions (Only One Correct Option) (MCQ)	25	3	0	75
26 to 35	II	Physics	Single Choice Questions (Only One Correct Option) (MCQ)	10	3	0	30
36 to 45	III	Chemistry	Single Choice Questions (Only One Correct Option) (MCQ)	10	3	0	30
46 to 55	IV	Biology	Single Choice Questions (Only One Correct Option) (MCQ)	10	3	0	30
56 to 70	V	Mental Ability	Single Choice Questions (Only One Correct Option) (MCQ)	15	3	0	45
Total				70			210

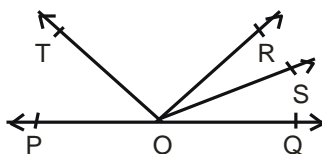
PART-I : MATHEMATICS

This section contains 25 questions. Each question has 4 choices (A), (B), (C) and (D) for its answer, out of which **ONLY ONE** is correct.

1. There are four prime numbers written in ascending order. The product of the first three is 385 and that of the last three is 1001. The last number is :
 (A) 11 (B) 13 (C) 17 (D) 19

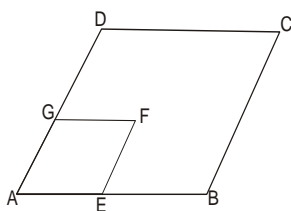
2. Which of the following is a polynomial :-
 (A) $x^2 + \sqrt{2}x + \sqrt{3}$ (B) $x^2 + \sqrt{2x} + \sqrt{3}$ (C) $x^2 + \frac{2}{x} + \sqrt{3}$ (D) $x^{3/2} + \sqrt{2}x + \sqrt{3}$

3. If OT and OS are the bisectors of $\angle POR$ and $\angle QOR$, then $\angle TOS$ is equal to :

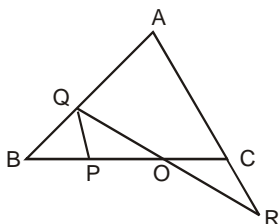


- (A) 60° (B) 85° (C) 90° (D) 100° .

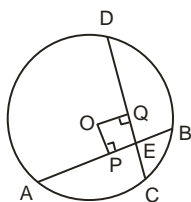
4. If D is any point on the side BC of a $\triangle ABC$, then :
 (A) $AB + BC + CA > 2AD$ (B) $AB + BC + CA < 2AD$
 (C) $AB + BC + CA > 3AD$ (D) None
5. The distance of the point (12, -5) from origin is :
 (A) 7 (B) 12 (C) 17 (D) 13
6. Area of triangle ABC whose sides are 24 m. 40 m. and 32 m. is :
 (A) 96 m^2 (B) 384 m^2 (C) 43 m^2 (D) 192 m^2
7. The values of a for which the lines $x = 1$, $y = 2$ and $a^2x + 2y - 20 = 0$ are concurrent are
 (A) 1 (B) ± 4 (C) -1 (D) -2
8. In the adjoining figure, ABCD and AEFG are each a parallelogram. If $\angle C = 55^\circ$, what is the measure of $\angle F$?



- (A) 60° (B) 55° (C) 45° (D) 35°
9. Find the area of the figure formed by joining the mid-points of the adjacent sides of a rhombus with diagonals 12 cm and 16 cm.
 (A) 32 cm^2 (B) 42 cm^2 (C) 48 cm^2 (D) 44 cm^2
10. In figure, $\triangle ABC$ is an equilateral triangle $PQ \parallel AC$ and AC is produced to R such that $CR = PQ$.



- (A) $PO > OC$ (B) $PO = OC$ (C) $\angle POQ = \angle CRO$ (D) $AQ = AR$
11. In the diagram O is the centre of a circle. $AE + EB = CE + ED$. $OP \perp AB$ and $OQ \perp CD$ then true relation between OP and OQ is -



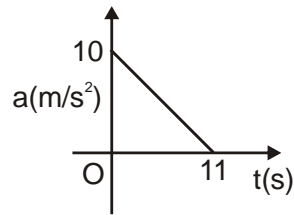
- (A) $OP > OQ$ (B) $OP < OQ$ (C) $OP = \frac{1}{2} OQ$ (D) $OP = OQ$

24. The side BC of the triangle ABC is produced to a point D. If the bisectors of $\angle ABC$ and $\angle ACD$ meet at point P, then :
 (A) $\angle A = \angle P$ (B) $\angle A = \frac{1}{2}\angle P$ (C) $\angle A = 3\angle P$ (D) $\angle A = 2\angle P$
25. The probability of three coins falling all heads up when tossed simultaneously is :
 (A) $\frac{1}{2}$ (B) $\frac{1}{6}$ (C) $\frac{1}{8}$ (D) $\frac{1}{4}$

PART-II :PHYSICS

This section contains 10 questions. Each question has 4 choices (A), (B), (C) and (D) for its answer, out of which **ONLY ONE** is correct.

26. A body starts from rest at time $t = 0$, the acceleration time graph is shown in figure. The maximum velocity attained by the body will be:
 (A) 110 m/s
 (B) 55 m/s
 (C) 650 m/s
 (D) 550 m/s



27. A body of mass M strikes against wall with a velocity v and rebounds with the same velocity. Its change in momentum is :
 (A) zero (B) Mv (C) $-Mv$ (D) $-2Mv$
28. If two bodies of mass M_1 and M_2 are placed a distance r apart they have a force of gravitation F between them. If both of the masses are reduced to half then force of gravitation would be :
 (A) $\frac{F}{2}$ (B) $2F$ (C) $\frac{F}{4}$ (D) F
29. The balloon stops rising up beyond a particular height when the density of gas inside the balloon :
 (A) exceeds the density of air outside (B) equals the density of air
 (C) becomes less than the density of air (D) none of the above
30. To lift a 5 kg mass to a certain height, amount of energy spent is 245 J. The mass was raised to a height of :
 (A) 15 m (B) 10 m (C) 7.5 m (D) 5 m
31. Ultrasonic frequency range is :
 (A) Below 20 Hz (B) 20 Hz to 20 kHz (C) Above 20 kHz (D) No limit
32. A body covers half the distance with a speed of 20m/s and the other half with 30m/s. The average speed of the body during the whole journey is :
 (A) Zero (B) 24m/s (C) 25 m/s (D) None of the above
33. Two thin circular discs of radii 3 cm and 4 cm respectively are placed separately at the bottom of a vessel containing water. The ratio of thrusts acting on them will be :
 (A) 3 : 4 (B) 4 : 3 (C) 5 : 2 (D) 9 : 16

34. When time taken to complete a given amount of work increases, then
 (A) Power increases (B) power decreases (C) energy increases (D) energy decreases
35. A sonar echo takes 4.4s to return from a submarine. If the speed of sound in water is 1500 ms^{-1} , then the distance of submarine from the sonar is :
 (A) 1500 m (B) 3000 m (C) 3300 m (D) 3600 m

PART-III : CHEMISTRY

This section contains 10 questions. Each question has 4 choices (A), (B), (C) and (D) for its answer, out of which **ONLY ONE** is correct.

36. The following which has definite shape and volume is
 (A) Water (B) Ice (C) Oxygen (D) Steam
37. Which of the following is an example of homogeneous mixture?
 (A) Brass (B) Muddy water (C) Soil (D) All
38. The molecular mass of the oxygen molecule (O_2) is
 (A) 16u (B) 32u (C) 34u (D) 33u
39. One of the reasons for the inertness of noble gases is
 (A) Their outermost shells are not completely filled.
 (B) it is not possible to remove electrons from their outermost shells.
 (C) They have unstable configuration.
 (D) They loose their valence elctrons easily.
40. Which of the following is not matter?
 (A) Larva of volcanic eruption (B) pain
 (C) Wood (D) None of these
41. Which one of the following is not a compound?
 (A) Marble (B) Ozone (C) Alumina (D) Quicklime
42. The law which states that matter is neither created nor destroyed in a chemical reaction is
 (A) Law of multiple proportion. (B) law of conservation of mass
 (C) Law of constant proportion. (D) Law of reciprocal proportion
43. In an atom, M shell can occupy maximum of-
 (A) 2 electrons (B) 8 electrons (C) 18 electrons (D) 32 electrons
44. The formula of the chloride of a metal is MCl_3 . The formula of its sulphate is
 (A) MSO_4 (B) $\text{M}_2(\text{SO}_4)_3$ (C) $\text{M}_3(\text{SO}_4)_2$ (D) $\text{M}_4(\text{SO}_4)_3$
45. The number of electrons in Al^{+3} is -
 (A) 13 (B) 12 (C) 11 (D) 10

PART-IV: BIOLOGY

This section contains 10 questions. Each question has 4 choices (A), (B), (C) and (D) for its answer, out of which **ONLY ONE** is correct.

46. Organelle without a cell membrane is –
 (A) ribosomes (B) golgi body (C) mitochondria (D) chloroplast
47. Which of the following components of phloem is non-living
 (A) sieve tubes (B) companion cells (C) phloem fibres (D) phloem parenchyma
48. Vermicomposting involves –
 (A) leech (B) cockroach (C) earthworm (D) roundworm
49. Non flowering plants belongs to
 (A) cryptogamae (B) phanerogamae (C) dicot (D) monocot
50. Kala-azar (black fever) is caused by
 (A) Protozoan (B) fungus (C) helminth (D) bacterium
51. Corrosion of statues and monuments occurs due to –
 (A) Photochemical (B) Co (C) Acid rain (D) Methane

52. Protein containing plastid is
 (A) Elaioplast (B) Amyloplast (C) Aleuroplast (D) Rhodoplast
53. A permanent plant tissue made up of living cells having thickening at the corners is
 (A) Parenchyma (B) Collenchyma (C) Sclerenchyma (D) Phloem
54. Lichens indicate pollution by
 (A) O₃ (B) SO₂ (C) NO₂ (D) CO
55. Choanocytes are unique to –
 (A) Protozoa (B) Annelida (C) Porifera (D) Echinodermatas

PART-V : MENTAL ABILITY

Directions : (56) Which sequence of letters when placed at the blanks one after the other will complete the given letter series ?

56. abc _ d _ bc _ d _ b _ cda
 (A) bacdc (B) cdabc (C) dacab (D) dccbd
57. If **GOOD** is written **HQRH**, how will you write **DREAM**?
 (A) ESPBN (B) ETHER (C) ETHPQ (D) ESHDR

Directions : (58) Find the missing numbers.

58. 3, 1, 4, 5, 9, 14, 23, ?
 (A) 32 (B) 37 (C) 41 (D) 28
59. Correct the following equations by interchanging two signs.
 $16 - 21 \div 7 \times 6 + 3 = 31$
 (A) – and ÷ (B) + and × (C) ÷ and + (D) ÷ and ×
60. At my house I am facing West, then I turn left and go 10 m, then I turn 90° anti-clockwise and go 5 m, and then I go 5 m to the South and from there 5 m to the West. In which direction am I from my house ?
 (A) East (B) West (C) North (D) South

Directions : (61) Read the following information and answer the questions given below it.

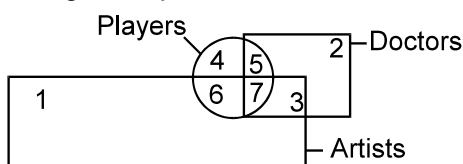
Five girls are standing in a circle facing the centre. Suman is between Lata and Asha. Mamta is to the right of Lata.

61. Who is to the left of Asha if Rajani is the fifth girl ?
 (A) Mamta (B) Suman (C) Lata (D) Rajani

Directions (62) : Read the following information carefully and answer the questions that follows.

- (i) Five friends P, Q, R, S and T travelled to five different cities of Chennai, Kolkata, Delhi, Bangalore and Hederabad by different modes of transport of Bus, Train, Aeroplane, Car and Boat from Mumbai.
 (ii) The person who travelled to Delhi did not travel by boat.
 (iii) R went to Bangalore by Car and Q went to Kolkata by Aeroplane.
 (iv) S travelled by Boat whereas T travelled by Train.
 (v) Mumbai is not connected by bus to Delhi and Chennai.

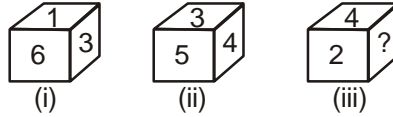
62. Which of the following combinations of person and mode is not correct ?
 (A) P – Bus (B) Q – Aeroplane (C) R – Car (D) T – Aeroplane
63. Which numbered space in the figure. represents doctors who are players as well as artists ?



- (A) 2 (B) 3 (C) 6 (D) 7

Directions : (64) In each question, statements are followed by the conclusions. You have to take the given statements to be true even if they appear to be at variance with commonly known facts, and then decide which of the conclusions logically follow(s) from the given statements. For each question, mark out an appropriate answer choice that you think is correct.

- 64. Statements :** 1. All lamps are books.
2. No book is coloured.
- Conclusions :** I. Some lamps are coloured.
II. No lamp is coloured.
- (A) Only conclusion I follows. (B) Only conclusion II follows
(C) Both I and II follow. (D) Neither I nor II follows.
- 65.** Find the day of the week on 15 August, 1947.
(A) Tuesday (B) Friday (C) Wednesday (D) Thursday
- 66.** Three positions of the same dice are given below. Observe the figures carefully and tell which number will come in place of '?'



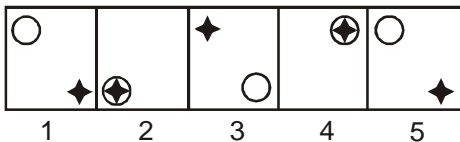
- (A) 1 (B) 6 (C) 3 (D) 5

Directions : (67) A cube is painted red on two adjacent surfaces and black on the surfaces opposite to red surfaces and green on the remaining faces. Now the cube is cut into sixty four smaller cubes of equal size.

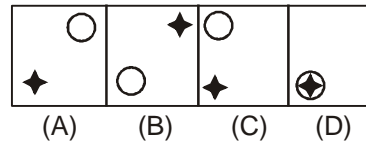
- 67.** How many smaller cubes have three surfaces painted ?
(A) 4 (B) 8 (C) 16 (D) 24

Directions : (68) Each of the following questions consists of five figures marked 1, 2, 3, 4 and 5. These figures form a series. Find out the one from the answer figures that will continue the series.

68. Problem Figures



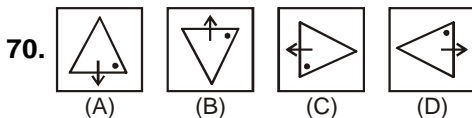
Answer Figures



Directions : (69) In each of the following questions, there is a certain relation between two given number on one side of :: and one number is given on another side of :: while another number is to be found from the given alternatives, having the same relation with this number as the numbers of the given pair bear. Choose the best alternative.

- 69.** 425 : 2 :: 613 : ?
(A) 1 (B) 2 (C) 3 (D) 4

Directions : (70) Out of the four figures (A), (B), (C) and (D), given in each problem, three are similar in a certain way. However, one figure is not like the other three. Choose the figure which is different from the rest.



Space for Rough Work / (कच्चे कार्य के लिए स्थान)

ANSWER KEY (AK)

PART-I: MATHEMATICS	Q.No.	1	2	3	4	5	6	7	8	9	10
	Ans.	B	A	C	A	D	B	B	B	C	B
	Q.No.	11	12	13	14	15	16	17	18	19	20
	Ans.	D	C	B	D	D	B	C	B	C	A
	Q.No.	21	22	23	24	25					
	Ans.	C	D	C	D	C					
PART-II: PHYSICS	Q.No.	26	27	28	29	30	31	32	33	34	35
	Ans.	B	D	C	B	D	C	B	D	B	C
PART-III: CHEMISTRY	Q.No.	36	37	38	39	40	41	42	43	44	45
	Ans.	B	A	B	B	B	B	B	D	B	D
PART-IV: BIOLOGY	Q.No.	46	47	48	49	50	51	52	53	54	55
	Ans.	A	C	C	A	A	C	C	B	B	C
PART-IV: MENTAL ABILITY	Q.No.	56	57	58	59	60	61	62	63	64	65
	Ans.	C	B	B	B	D	D	D	D	B	B
	Q.No.	66	67	68	69	70					
	Ans.	A	B	D	A	B					

SAMPLE TEST PAPER (STP)



PCCP ResoNET-2026

Objective Response Sheet (ORS)

2026-2027

COURSE NAME PCCP Course <input type="radio"/> WINNER <input type="radio"/> WISDOM <input type="radio"/>	Application Form No. <input style="width: 100px;" type="text"/> Student's Name <input style="width: 200px;" type="text"/> (Capital Letters Only) Test City / Venue _____ CLASS _____ Room No. _____ Test Date <input style="width: 100px;" type="text"/>
---	--

Darken the bubble completely Right (A) (B) (C) (D) Wrong (A) (B) (C) (D)

Note :Students are advised-do not disturb the five guide view marks (Dark Circles -- printed on corners of ORS). Other wise ORS will not be processed for result.

Application Form No.

0	0	0	0	0	0	0	0	0	0
1	1	1	1	1	1	1	1	1	1
2	2	2	2	2	2	2	2	2	2
3	3	3	3	3	3	3	3	3	3
4	4	4	4	4	4	4	4	4	4
5	5	5	5	5	5	5	5	5	5
6	6	6	6	6	6	6	6	6	6
7	7	7	7	7	7	7	7	7	7
8	8	8	8	8	8	8	8	8	8
9	9	9	9	9	9	9	9	9	9

CLASS

0	0
1	1
2	2
3	3
4	4
5	5
6	6
7	7
8	8
9	9

MEDIUM

English (E) (H) Hindi

CATEGORY

General
 OBC
 SC
 ST
 DS
 PH

- | | |
|---|--|
| 1 (A) (B) (C) (D)
2 (A) (B) (C) (D)
3 (A) (B) (C) (D)
4 (A) (B) (C) (D)
5 (A) (B) (C) (D)
6 (A) (B) (C) (D)
7 (A) (B) (C) (D)
8 (A) (B) (C) (D)
9 (A) (B) (C) (D)
10 (A) (B) (C) (D)
11 (A) (B) (C) (D)
12 (A) (B) (C) (D)
13 (A) (B) (C) (D)
14 (A) (B) (C) (D)
15 (A) (B) (C) (D)
16 (A) (B) (C) (D)
17 (A) (B) (C) (D)
18 (A) (B) (C) (D)
19 (A) (B) (C) (D)
20 (A) (B) (C) (D)
21 (A) (B) (C) (D)
22 (A) (B) (C) (D)
23 (A) (B) (C) (D)
24 (A) (B) (C) (D)
25 (A) (B) (C) (D)
26 (A) (B) (C) (D)
27 (A) (B) (C) (D)
28 (A) (B) (C) (D)
29 (A) (B) (C) (D)
30 (A) (B) (C) (D)
31 (A) (B) (C) (D)
32 (A) (B) (C) (D)
33 (A) (B) (C) (D)
34 (A) (B) (C) (D)
35 (A) (B) (C) (D)
36 (A) (B) (C) (D)
37 (A) (B) (C) (D)
38 (A) (B) (C) (D)
39 (A) (B) (C) (D)
40 (A) (B) (C) (D)
41 (A) (B) (C) (D)
42 (A) (B) (C) (D)
43 (A) (B) (C) (D)
44 (A) (B) (C) (D)
45 (A) (B) (C) (D) | 46 (A) (B) (C) (D)
47 (A) (B) (C) (D)
48 (A) (B) (C) (D)
49 (A) (B) (C) (D)
50 (A) (B) (C) (D)
51 (A) (B) (C) (D)
52 (A) (B) (C) (D)
53 (A) (B) (C) (D)
54 (A) (B) (C) (D)
55 (A) (B) (C) (D)
56 (A) (B) (C) (D)
57 (A) (B) (C) (D)
58 (A) (B) (C) (D)
59 (A) (B) (C) (D)
60 (A) (B) (C) (D)
61 (A) (B) (C) (D)
62 (A) (B) (C) (D)
63 (A) (B) (C) (D)
64 (A) (B) (C) (D)
65 (A) (B) (C) (D)
66 (A) (B) (C) (D)
67 (A) (B) (C) (D)
68 (A) (B) (C) (D)
69 (A) (B) (C) (D)
70 (A) (B) (C) (D)
71 (A) (B) (C) (D)
72 (A) (B) (C) (D)
73 (A) (B) (C) (D)
74 (A) (B) (C) (D)
75 (A) (B) (C) (D)
76 (A) (B) (C) (D)
77 (A) (B) (C) (D)
78 (A) (B) (C) (D)
79 (A) (B) (C) (D)
80 (A) (B) (C) (D)
81 (A) (B) (C) (D)
82 (A) (B) (C) (D)
83 (A) (B) (C) (D)
84 (A) (B) (C) (D)
85 (A) (B) (C) (D)
86 (A) (B) (C) (D)
87 (A) (B) (C) (D)
88 (A) (B) (C) (D)
89 (A) (B) (C) (D)
90 (A) (B) (C) (D) |
|---|--|

Please turn overleaf & fillup the required information



GET UPTO 100% SCHOLARSHIP



On the basis of
X/ XII Board Result



On the basis of
ResoNET Result



On the basis of JEE (M & A)/
NEET (UG) Result



On the basis of
Various Olympiads Result



30%

जवाहर नवोदय
विद्यालय (JNV) के
विद्यार्थियों के लिए



40%

हिन्दी माध्यम
के विद्यार्थियों
के लिए



40%

CHILDREN OF
DEFENCE &
PARAMILITARY STAFF



50%

WARDS OF
SINGLE PARENT
(Mother Only)



40%

CHILDREN
OF POLICE & CRPF
PERSONNEL



10%

Additional
WARDS OF TEACHERS
(GOVT. / PRIVATE)



10% in YCCP
25% in PCCP

SIBLINGS



10%

SIBLING OF
RESO YCCP ALUMNI



10%

CHILDREN OF
NCC PERSONNEL



40%

CHILDREN
OF RAILWAY
PERSONNEL

बेटियों के लिए विशेष

न्यूनतम 25% स्कॉलरशिप



Details of upto 100% Scholarship

On the Basis of Class X/ XII Board Examination Result				
S.No.	% in X/ XII Board Exam	YCCPs Only	X Board Science/Maths	XII Board PCM/B
1.	Top-3 in State Merit*	90%	—	—
2.	Rank 4-15 in State Merit*	75%	—	—
3.	Top-3 in District Merit*	50%	—	—
4.	≥ 95%	40%	30%	20%
5.	≥ 90% & <95%	30%	20%	20%
6.	≥ 80% & <90%	10%	10%	10%

On the Basis of International Olympiads Conducted by HBCSE		
S.No.	Scholarship Criteria	% S'ship
1.	Stage III Qualified for International Jr. Astronomy/Jr.Science Olympiad (Conducted-HBCSE) - NSEs	100%
2.	Stage II Qualified for International Jr. Astronomy/Jr.Science Olympiad (Conducted-HBCSE) - NSEs	90%
3.	Stage I Qualified for International Jr. Astronomy/Jr.Science Olympiad (Conducted-HBCSE) - NSEs	75%
4.	Stage III Qualified for International Sr. Astronomy/Phy/Chem/Math/Biology Olympiad (Conducted-HBCSE) - NSEs	100%
5.	Stage II Qualified for International Sr. Astronomy/Phy/Chem/Math/Biology Olympiad (Conducted-HBCSE) - NSEs	90%
6.	Stage I Qualified for International Sr. Astronomy/Phy/Chem/Math/Biology Olympiad (Conducted-HBCSE) - NSEs	75%
7.	Based on Pre-RMO	50%