

# • SAMPLE TEST PAPER •

Resonance National Entrance Test (ResoNET)

For Pre-foundation Career Care Programmes (PCCP)

**FOR CLASS VI**



**Practice, Persistence and Performance**





CG Tower Campus, Kota



## VISION

Excellence in Career Education



## MISSION

Practice, Persistence and Performance



## VALUES

- Leadership with humane touch at various levels
- Integrity, transparency and openness in all our actions
- Innovation and pursuit of excellence in career education
- Address the needs of students through career oriented initiatives
- Strive to continuously improve our processes and quality of deliverables

**R.K. Verma (RKV Sir)**  
 B.Tech. (IIT-Madras, 1994)  
 Founder | Managing Director  
 Head (Academics) | Sr. Faculty (Physics)

**About Resonance:**  
 Place : Kota (Rajasthan)  
 Established on: 11<sup>th</sup> April, 2001

S.No.	Academic Division	Classes	Target Examinations
1.	Pre-Engineering Division: JEE (Advanced)	IX, X, XI, XII & XII+	JEE (Advanced)   JEE (Main)   Olympiads
2.	Pre-Engineering Division: JEE (Main)	IX, X, XI, XII & XII+	JEE (Main)   Other Engineering Entrance Exams
3.	Pre-Medical Division	IX, X, XI, XII & XII+	NEET (UG)   Olympiads
4.	Pre-foundation Career Care Programme Division (PCCP)	V, VI, VII, VIII, IX & X	School & Board Exams   NTSE   Olympiads   STSE
5.	Commerce & Law Programme Division (CLPD)	XI, XII & XII+	CA   CS   CLAT   Board   CUET (UG)   UG & PG
6.	Pre-university & School Preparatory Division (PSPD)	XI, XII & XII+	Board Exams   CUET-UG   IPMAT   JIPMAT   BITSAT   STSE   UCEED   College Entrance Exam UG & Scholarship Exams
7.	Resonance Multiple Examination Division (ResoMEx)	XII+   UG & PG	SSC   BANKS   RAILWAYS   NDA   Other Govt. & Private Recruitment Exams
8.	Distance Learning Programme Division (DLPD)	V to XII & XII+	JEE (Main)   JEE (Advanced)   NEET (UG)   OLYMPIADS   PRE-FOUNDATION   OTHERS
9.	EdTech Division	V to XII & XII+	JEE (Main)   JEE (Advanced)   NEET (UG)   PRE-FOUNDATION
10.	Resonance International Studies Division (Reso-ISD)	VI to XII & XII+	JEE (Main)   JEE (Advanced)   NEET (UG)   OLYMPIADS   PRE-FOUNDATION Upcoming: SAT   IELTS   GRE   PTE

**CLASS**
**VI**
**SAMPLE TEST PAPER (STP)**

(For Class-V Passed Students)

**CLASS-VI (FOR CLASS V TO VI MOVING STUDENT)**
**TARGET: SCHOOL / OLYMPIAD**

S.No.	Particulars	Page Number		Total Pages
		From	To	
1	Guidelines and Instructions for Entrance Test	2	2	1
2	ResoNET Question Paper Structure & Syllabus	3	3	1
3	<b>Sample Test Paper (STP):</b> For Class V passed students (For the students applying for course Class V to VI moving Student).	4	10	7
4	Sample Test Paper: Answer Key (AK)	11	11	1
5	Sample ORS Answer Sheet for Resonance National Entrance Test (ResoNET)	12	12	1
	<b>Total Pages</b>			<b>11</b>

The sample test papers are only for reference and guidance. The sample papers given in the booklet are actually the papers of previous year's ResoNET conducted by Resonance for its various courses.

**Note :** Resonance reserves the right to change the pattern of Resonance National Entrance Test (ResoNET). Previous year papers do not guarantee that the papers for this year selection test will be on the same pattern. However, the syllabus of the test paper will be equivalent to the syllabus of qualifying school/board examination and as given on page nos. 1 to 12.

© Copyright reserved.

All rights reserved. Any photocopying, publishing or reproduction of full or any part of this study material is strictly prohibited. This material belongs to enrolled student of RESONANCE only. Any sale/resale of this material is punishable under law, subject to Kota Jurisdiction only.

## GUIDELINES AND INSTRUCTIONS FOR ENTRANCE TEST

### FOR ONLINE EXAMINATION

In Online Examination system; Test will be conducted in fully computerized, user friendly mode with advanced security features making it fair, transparent and standardized.

#### Information & Instructions:

1. The examination does not require using any paper, pen, pencil and calculator.
2. Every student will take the examination on a Laptop/Desktop/Smart Phone.
3. If you are using your personal laptop/Desktop, please make sure that you **have installed the necessary software and programs** & having proper internet connection before the examination day. It is important that your laptop/desktop/Smartphone-Mobile **fulfils the system requirements** of the programme.
4. You must bring your own power supply for use during the examination.
5. If failure to comply with these recommendations results in technical problems that cause a delay in your examination, you cannot expect to be granted extended time.
6. Kindly remember your Resonance Application Form No. as a Roll No.
7. You are not permitted to leave the Venue/any movement from Laptop/Desktop/Mobile screen during examination.
8. The students just need to click on the Right Choice / Correct option from the multiple choices /options given with each question. For Multiple Choice Questions, each question has four options, and the candidate has to click the appropriate option.

### FOR OFFLINE EXAMINATION

1. This booklet is your Question Paper.
2. The **Question Paper Code** is printed on the top right corner of this sheet.
3. Blank papers, clip boards, log tables, slide rule, calculators, mobile or any other electronic gadgets in any form are not allowed to be used.
4. Write your **Name & Application Form Number** in the space provided in the bottom of this booklet.
5. Before answering the paper, fill up the required details in the blank space provided in the Objective Response Sheet.
6. Do not forget to mention your paper code and **Application Form Number** neatly and clearly in the blank space provided in the Objective Response Sheet (ORS) / Answer Sheet.
7. No rough sheets will be provided by the invigilators. All the rough work is to be done in the blank space provided in the question paper.
8. No query related to question paper of any type is to be put to the invigilator.

**RESONET QUESTION PAPER STRUCTURE**

**For Class V to VI Moving Student**

S.No.	Part	Subject	Type of Question	No. of Ques.	Marking Scheme		
					Full Marks per Qs.	Negative Marking	Total
1 to 25	I	Mathematics	Single Choice Questions (Only One Correct Option) (MCQ)	25	3	0	75
26 to 35	II	Physics	Single Choice Questions (Only One Correct Option) (MCQ)	10	3	0	30
36 to 45	III	Chemistry	Single Choice Questions (Only One Correct Option) (MCQ)	10	3	0	30
46 to 55	IV	Biology	Single Choice Questions (Only One Correct Option) (MCQ)	10	3	0	30
56 to 70	V	Mental Ability	Single Choice Questions (Only One Correct Option) (MCQ)	15	3	0	45
<b>Total</b>				<b>70</b>			<b>210</b>

**RESONET SYLLABUS**

**FOR CLASS V TO VI MOVING STUDENT**

SUBJECT	SYLLABUS FROM CLASS	TOPIC
MATHEMATICS	V	Operation on Large Numbers, Factors and Multiples, Decimals, Measurement, Average, Percentage & Its Applications, Speed, Distance and Time, Temperature, Money and Credit, Basic Geometrical Ideas, Practical Geometry, Mensuration, Data handling and graphs.
PHYSICS	V	Motion & Measurement, Simple Machine, Universe, The Moon.
CHEMISTRY	V	States of Matter, Air Around Us, Water, Rocks & Minerals.
BIOLOGY	V	Life Style of Animals, Reproduction in Plant, Nervous System, Our Body-A Wonderful Machine, Food & Health, Safety & First AID.
MENTAL ABILITY	V	Alphabet Test, Number series, Alphabet Series, Missing Term in Figure, Mathematical Operations, Direction Sense, Analogy, Classification, Water Mirror Image, Figure Completion.

**CLASS**
**VI**
**SAMPLE TEST PAPER (STP)**

(For Class-IX Passed Students)

**CLASS-VI (FOR CLASS V TO VI MOVING STUDENT)**
**TARGET: SCHOOL / OLYMPIAD**
**For Class V to VI Moving Student**

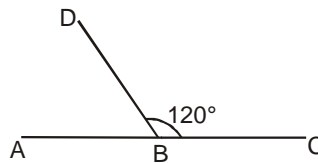
S.No.	Part	Subject	Type of Question	No. of Ques.	Marking Scheme		
					Full Marks per Qs.	Negative Marking	Total
1 to 25	I	Mathematics	Single Choice Questions (Only One Correct Option) (MCQ)	25	3	0	75
26 to 35	II	Physics	Single Choice Questions (Only One Correct Option) (MCQ)	10	3	0	30
36 to 45	III	Chemistry	Single Choice Questions (Only One Correct Option) (MCQ)	10	3	0	30
46 to 55	IV	Biology	Single Choice Questions (Only One Correct Option) (MCQ)	10	3	0	30
56 to 70	V	Mental Ability	Single Choice Questions (Only One Correct Option) (MCQ)	15	3	0	45
<b>Total</b>				<b>70</b>			<b>210</b>

**PART-I : MATHEMATICS**

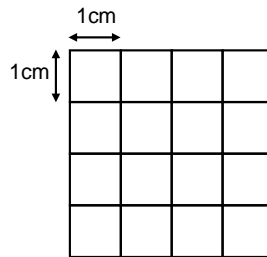
This section contains 25 questions. Each question has 4 choices (A), (B), (C) and (D) for its answer, out of which **ONLY ONE** is correct.

- $$\begin{array}{r} 632 \\ \times 720 \\ \hline \end{array}$$
 (A) 455004                      (B) 455000                      (C) 455400                      (D) 455040
- Two wires with lengths of 448 cm and 616 cm are to be cut into pieces of all the same length without remainder. Find the greatest possible length of the pieces.  
 (A) 60 cm                      (B) 58 cm                      (C) 56 cm                      (D) 54 cm
- What do we get when we subtract the difference of 15.13 and 9.7 from their sum?  
 (A) 15.43                      (B) 14.83                      (C) 19.40                      (D) 17.80
- Add 145 ℓ 126 ml, 12 ℓ 780 ml and 46 ℓ 220 ml.  
 (A) 204 ℓ 125 ml                      (B) 204 ℓ 126 ml                      (C) 203 ℓ 126 ml                      (D) 303 ℓ 126 ml
- Divide 12.75 by 10, we get  
 (A) 0.1275                      (B) 1.275                      (C) 12.75                      (D) 127.5

6. Find the average of factors of 6  
 (A) 2 (B) 3 (C) 6 (D) 5
7. 60 % of 120 mangoes were ripe . Find how many ripe mangoes were there?  
 (A) 75 (B) 50 (C) 60 (D) 72
8. Express 25 mps in kmph?  
 (A) 15 kmph (B) 99 kmph (C) 90 kmph (D) None of these
9. What is 273.15 K in °C  
 (A) 39.4°C (B) 100°C (C) 10°C (D) 0°C
10. Nancy bought five pens at a shop. If each pen cost Rs. 2.00 and she pays Rs. 20, how much change should she get back?  
 (A) Rs 10 (B) Rs 30 (C) Rs 15 (D) Rs 26
11. Find the angle supplementary to the angle \_\_\_\_\_



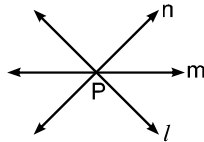
- (A) 50 (B) 70 (C) 60 (D) 120
12. To construct an angle of  $75^\circ$  , we construct the angle bisector of  
 (A)  $150^\circ$  (B)  $60^\circ$  (C)  $120^\circ$  (D)  $95^\circ$
13. Find the Perimeter (in cm)



- (A) 15 (B) 10 (C) 16 (D) 20
14. The final marks in mathematics of 30 students are as follows :  
 53, 61, 48, 60, 78, 68, 55, 100, 67, 90, 75, 88, 77, 37, 84, 58, 60, 48, 62, 56, 44, 58, 52, 64, 98, 59,  
 70, 39, 50, 60  
 The highest score is :  
 (A) 98 (B) 95 (C) 99 (D) None of these
15. Round 5792 to the nearest hundred  
 (A) 5700 (B) 5790 (C) 5730 (D) 5800
16. Janice and Jasmine were each given a piece of ribbon of equal length. Janice cuts her ribbon into equal lengths of 2 m, while Jasmine cuts her ribbons into equal lengths of 5 m. If there was no remainder in both cases, find the shortest possible length of ribbon given to them  
 (A) 8 m (B) 6 m (C) 5 m (D) 10 m
17. A cricket pitch is about 264cm wide . In metres it is equal to  
 (A) 26.4m (B) 2.64m (C) 0.264m (D) 0.0264m



18. Tina walks 1.5 km from her home, then takes a bus for 14.975 km before she travels by train 48.090 km to reach mumbai. How far is mumbai from her home?  
 (A) 57455m (B) 63 km (C) 64.565 km (D) 63565 m
19. 5206m - 2051m expressed as km is  
 (A) 31.55km (B) 3.155km (C) 0.3155km (D) 315.5km
20. Find average of 16kg, 18kg and 20kg  
 (A) 18kg (B) 20kg (C) 36kg (D) 19kg
21. 40 % of the children in class 5th are girls . If the total number of children in the class is 50 , Find the number of girls in the class ?  
 (A) 30 (B) 40 (C) 20 (D) 25
22. A man walked at a speed of 5 km/hr. Then how much distance will he cover in 2 hrs?  
 (A) 10 km (B) 13 km (C) 12 km (D) 5 km
23. A sick person having 104°F temperature took some medicine to control fever. After some time he realized the temperature dropped by 3°C. What is the temperature in °C?  
 (A) 39.4°C (B) 58°C (C) 37°C (D) 40°C
24. 30 paise in Rs is :  
 (A) Rs 0.030 (B) Rs 1.30 (C) Rs 0.30 (D) 0.030
25. In the given figure , lines  $l$  ,  $m$  and  $n$  have been drawn passing through P . Can we draw more lines through P . If yes, how many ?



- (A) None (B) One (C) Five (D) Infinite

### PART-II :PHYSICS

This section contains 10 questions. Each question has 4 choices (A), (B), (C) and (D) for its answer, out of which **ONLY ONE** is correct.

26. The blades of a moving fan exhibit:  
 (A) Vibratory motion. (B) Rotatory motion. (C) Oscillatory motion. (D) Rectilinear motion.
27. Mechanical advantage is equal to:  
 (A) Load arm ÷ Effortarm (B) Effortarm ÷ Load arm  
 (C) Load arm + Effort arm (D) Effort arm × Load arm
28. The sun is at the centre of:  
 (A) Universe (B) Solar system  
 (C) Akash Ganga galaxy (D) None of these
29. Which is NOT a moon phase?  
 (A) old moon (B) first quarter (C) waning gibbous (D) new moon





30. Measurement means the comparison of  
 (A) two known quantities.  
 (B) two unknown quantities.  
 (C) an unknown quantity with all known quantities of different kind.  
 (D) an unknown quantity with some known quantity of same kind
31. The proper care and maintenance of machines require:  
 (A) To make them good working (B) For preserving them for future  
 (C) For their efficient and longer use (D) None of these
32. Which of these planets have rings?  
 (A) Saturn (B) Neptune (C) Uranus (D) All of the above
33. The moon's gravity causes \_\_\_\_\_  
 (A) tides (B) phases (C) lunar eclipse (D) None of these
34. The motion of second's hand in a clock is  
 (A) slower than that of the hour's hand. (B) faster than that of the hour's hand.  
 (C) equal to that of the hour's hand. (D) opposite to that of the hour's hand.
35. A bread knife is an example of :  
 (A) A pulley (B) an inclined plane (C) a third order lever (D) a second lever

**PART-III : CHEMISTRY**

This section contains 10 questions. Each question has 4 choices (A), (B), (C) and (D) for its answer, out of which **ONLY ONE** is correct.

36. Solvent + solute: \_\_\_\_\_ : water + lemon : lemon water -  
 (A) sweet solution (B) solution (C) brine (D) Both (A) & (B)
37. Percentage of CO<sub>2</sub> (carbondioxide) in atmosphere is :  
 (A) 0.1% (B) 0.004% (C) 0.03% (D) 0.4%
38. Substance that make water unfit for drinking are called:  
 (A) impurities (B) purities (C) insoluble (D) soluble
39. Metamorphic rocks form deep inside Earth from other types of rocks. Which forces produce metamorphic rocks?  
 (A) rain and snow (B) extreme pressures and temperatures  
 (C) strong winds and earthquakes (D) low temperature and pressure
40. The components of air which are harmful to living beings are:  
 (A) nitrogen and carbon dioxide (B) dust and water vapour  
 (C) dust and smoke (D) smoke and water vapour
41. An air mass that moves across earth's surface due to differences in air pressure is called:  
 (A) drought (B) wind (C) air pressure (D) ozone
42. During the process of filtration, the clear water obtained is called.....  
 (A) filter (B) distillate (C) residue (D) filtrate
43. Which rock forms from melted rock - either from magma below Earth's crust or from lava above it?  
 (A) Sedimentary (B) Igneous (C) Metamorphic (D) Diamond



44. Marble and gneiss are examples of \_\_\_\_\_ rock.  
(A) Igneous (B) Metamorphic (C) Sedimentary (D) Mineral
45. In which process you can get germ free water?  
(A) Distillation (B) Filtration (C) Sedimentation (D) Evaporation

**PART-IV: BIOLOGY**

This section contains 10 questions. Each question has 4 choices (A), (B), (C) and (D) for its answer, out of which **ONLY ONE** is correct.

46. Snake moves with help of  
(A) Tail (B) Limbs (C) Muscular body (D) None
47. Mango seed is an example of  
(A) Dicot (B) Monocot (C) both A & B (D) Can't say
48. The nerves are made up of  
(A) medulla (B) Nerve cells (C) fibres (D) none of these
49. Which of the following parts of the human body has involuntary muscles?  
(A) Legs (B) Arms (C) Neck (D) Intestine
50. In humans, the deficiency of which of the following vitamins can cause night blindness  
(A) Vitamin C (B) Vitamin D (C) Vitamin A (D) Vitamin B
51. The first help given to an injured person before the latter is taken to hospital:  
(A) First Paid (B) First Aid (C) First Lead (D) None of these
52. Onion is an example of  
(A) Root (B) leaf (C) Stem (D) Flower
53. The brain is protected by the  
(A) hip girdle (B) rib-cage (C) skull (D) backbone
54. Diseases caused by the the lack of nutrients are:  
(A) deficiency diseases (B) infectious diseases  
(C) genetic diseases (D) communicable diseases
55. A crack in a bone:  
(A) Fracture (B) Feature (C) Figure (D) All of these

**PART-V : MENTAL ABILITY**

This section contains 15 questions. Each question has 4 choices (A), (B), (C) and (D) for its answer, out of which **ONLY ONE** is correct.

**Directions: (56)** Arrange the given words in alphabetical order and choose the one that comes first.

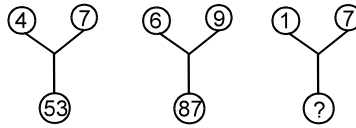
56. (A) hammer (B) hand (C) half (D) handle

**Directions: (57 to 59)** Find the missing terms:

57. 3, 6, 24, 30, 63, 72, ?, 132  
(A) 58 (B) 42 (C) 90 (D) 120

58. ZH, AI, BJ, CK, DL, ?  
 (A) FM (B) EL (C) EM (D) FL

59. Find the missing terms:



(A) 49 (B) 50 (C) 48 (D) 55

60. If **a** means 'plus', **b** means 'minus', **c** means 'multiplied by' and **d** means 'divided by' then  
 $16c\ 12\ b\ 6d\ 2a\ 17 = ?$   
 (A) 65 (B) 55 (C) 216 (D) 206

61. Vinay started walking towards South. After walking 15 metre, he turned to the left and walked 15 metre. He again turned to his left and walked 15 metre. How far is he from his original position and in which direction?  
 (A) 15 metre, North (B) 15 metre, South (C) 30 metre, East (D) 15 metre, East

62. "Treatment" is related to "Doctor" in the same way as "Training" is related to  
 (A) Coach (B) Game (C) Playground (D) Player

**Directions: (63)** In the following question, four words are given, out of which three are same in one way and the fourth one is different from others. Select the odd one

63. (A) Monkey (B) Rabbits (C) Whale (D) Sheep

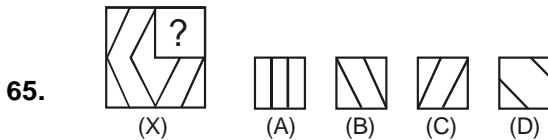
**Directions : (64)** In each of the following questions, choose the correct mirror image from alternatives A, B, C, and D of the Word / figure (X).

64. R4E3N2U

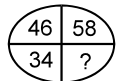


(A) R 4 E 3 N 2 U 3 (B) U 2 N 3 E 4 R (C) U 2 N 3 E 4 R (D) U 2 N 3 E 4 R

**Directions : (65)** Select a figure from the alternatives which when placed in the blank space of (x) would complete the pattern?



(A) 92 (B) 72 (C) 22 (D) 68



**Directions : (67)** Arrange the given words in alphabetical order and choose the one that comes first.

67. (A) habit (B) hair (C) habitat (D) half

**Directions :** (68 to 69) Find the missing terms :

68. 1, 4, 5, 8, 9, \_  
(A) 11 (B) 13 (C) 12 (D) 10

69. C, F, I, L, O, ?  
(A) P (B) Q (C) R (D) S

**Directions :** (70) Arrange the given words in alphabetical order and choose the one that comes first.

70. (A) sake (B) sail (C) sale (D) sad

**Space for Rough Work**



## ANSWER KEY (AK)

PART-I: MATHEMATICS	Q.No.	1	2	3	4	5	6	7	8	9	10
	Ans.	D	C	C	B	B	B	D	C	D	A
	Q.No.	11	12	13	14	15	16	17	18	19	20
	Ans.	C	A	C	D	D	D	B	C	B	A
	Q.No.	21	22	23	24	25					
	Ans.	C	A	C	C	D					
PART-II: PHYSICS	Q.No.	26	27	28	29	30	31	32	33	34	35
	Ans.	B	A	B	A	D	A	A	A	B	C
PART-III: CHEMISTRY	Q.No.	36	37	38	39	40	41	42	43	44	45
	Ans.	B	C	A	B	C	B	D	B	B	A
PART-IV: BIOLOGY	Q.No.	46	47	48	49	50	51	52	53	54	55
	Ans.	C	A	B	D	C	B	C	C	A	A
PART-IV: MENTAL ABILITY	Q.No.	56	57	58	59	60	61	62	63	64	65
	Ans.	C	D	C	B	D	D	A	C	C	B
	Q.No.	66	67	68	69	70					
	Ans.	C	A	C	C	D					

# SAMPLE TEST PAPER (STP)



PCCP ResoNET-2024

Objective Response Sheet (ORS)  
2024-2025

<b>COURSE NAME</b> PCCP Course <input type="radio"/>  WINNER <input type="radio"/>  WISDOM <input type="radio"/>	Application Form No. <input style="width: 100px;" type="text"/>  Student's Name <input style="width: 200px;" type="text"/> (Capital Letters Only) Test City / Venue _____ CLASS _____  Room No. _____ Test Date <input style="width: 100px;" type="text"/>
---	--

Darken the bubble completely    Right (A) (B) (C) (D)    Wrong (A) (B) (C) (D)

Note :Students are advised-do not disturb the five guide view marks (Dark Circles -- printed on corners of ORS). Other wise ORS will not be processed for result.

**Application Form No.**

0	0	0	0	0	0	0	0
1	1	1	1	1	1	1	1
2	2	2	2	2	2	2	2
3	3	3	3	3	3	3	3
4	4	4	4	4	4	4	4
5	5	5	5	5	5	5	5
6	6	6	6	6	6	6	6
7	7	7	7	7	7	7	7
8	8	8	8	8	8	8	8
9	9	9	9	9	9	9	9

- |  |  |   |
|--|--|---|
| 1    (A) (B) (C) (D)<br>2    (A) (B) (C) (D)<br>3    (A) (B) (C) (D)<br>4    (A) (B) (C) (D)<br>5    (A) (B) (C) (D)<br>6    (A) (B) (C) (D)<br>7    (A) (B) (C) (D)<br>8    (A) (B) (C) (D)<br>9    (A) (B) (C) (D)<br>10   (A) (B) (C) (D)<br>11   (A) (B) (C) (D)<br>12   (A) (B) (C) (D)<br>13   (A) (B) (C) (D)<br>14   (A) (B) (C) (D)<br>15   (A) (B) (C) (D)<br>16   (A) (B) (C) (D)<br>17   (A) (B) (C) (D)<br>18   (A) (B) (C) (D)<br>19   (A) (B) (C) (D)<br>20   (A) (B) (C) (D)<br>21   (A) (B) (C) (D)<br>22   (A) (B) (C) (D)<br>23   (A) (B) (C) (D)<br>24   (A) (B) (C) (D)<br>25   (A) (B) (C) (D)<br>26   (A) (B) (C) (D)<br>27   (A) (B) (C) (D)<br>28   (A) (B) (C) (D)<br>29   (A) (B) (C) (D)<br>30   (A) (B) (C) (D)<br>31   (A) (B) (C) (D)<br>32   (A) (B) (C) (D)<br>33   (A) (B) (C) (D)<br>34   (A) (B) (C) (D)<br>35   (A) (B) (C) (D)<br>36   (A) (B) (C) (D)<br>37   (A) (B) (C) (D)<br>38   (A) (B) (C) (D)<br>39   (A) (B) (C) (D)<br>40   (A) (B) (C) (D)<br>41   (A) (B) (C) (D)<br>42   (A) (B) (C) (D)<br>43   (A) (B) (C) (D)<br>44   (A) (B) (C) (D)<br>45   (A) (B) (C) (D) | 46   (A) (B) (C) (D)<br>47   (A) (B) (C) (D)<br>48   (A) (B) (C) (D)<br>49   (A) (B) (C) (D)<br>50   (A) (B) (C) (D)<br>51   (A) (B) (C) (D)<br>52   (A) (B) (C) (D)<br>53   (A) (B) (C) (D)<br>54   (A) (B) (C) (D)<br>55   (A) (B) (C) (D)<br>56   (A) (B) (C) (D)<br>57   (A) (B) (C) (D)<br>58   (A) (B) (C) (D)<br>59   (A) (B) (C) (D)<br>60   (A) (B) (C) (D)<br>61   (A) (B) (C) (D)<br>62   (A) (B) (C) (D)<br>63   (A) (B) (C) (D)<br>64   (A) (B) (C) (D)<br>65   (A) (B) (C) (D)<br>66   (A) (B) (C) (D)<br>67   (A) (B) (C) (D)<br>68   (A) (B) (C) (D)<br>69   (A) (B) (C) (D)<br>70   (A) (B) (C) (D)<br>71   (A) (B) (C) (D)<br>72   (A) (B) (C) (D)<br>73   (A) (B) (C) (D)<br>74   (A) (B) (C) (D)<br>75   (A) (B) (C) (D)<br>76   (A) (B) (C) (D)<br>77   (A) (B) (C) (D)<br>78   (A) (B) (C) (D)<br>79   (A) (B) (C) (D)<br>80   (A) (B) (C) (D)<br>81   (A) (B) (C) (D)<br>82   (A) (B) (C) (D)<br>83   (A) (B) (C) (D)<br>84   (A) (B) (C) (D)<br>85   (A) (B) (C) (D)<br>86   (A) (B) (C) (D)<br>87   (A) (B) (C) (D)<br>88   (A) (B) (C) (D)<br>89   (A) (B) (C) (D)<br>90   (A) (B) (C) (D) | <b>CLASS</b><br><input style="width: 20px; height: 20px;" type="text"/> <input style="width: 20px; height: 20px;" type="text"/><br><br>0 0<br>1 1<br>2 2<br>3 3<br>4 4<br>5 5<br>6 6<br>7 7<br>8 8<br>9 9 |
|--|--|---|

**MEDIUM**

English (E) (H) Hindi

**CATEGORY**

- General
- OBC
- SC
- ST
- DS
- PH

Please turn overleaf & fillup the required information



**Reg. & Corp. Office :** CG Tower, A-46 & 52, IPIA, Near City Mall, Jhalawar Road, Kota (Raj.)-324005

**Website :** www.resonance.ac.in | **E-mail :** contact@resonance.ac.in

**Toll Free :** 1800 258 5555 | **CIN:** U80302RJ2007PLC024029

**STPPH225\_CLASS-VI # 12**