



Resonance[®]
Educating for better tomorrow

JEE (MAIN) 2026

MEMORY BASED QUESTIONS & TEXT SOLUTION

SHIFT-2

DATE & DAY: 02nd April 2026 & Thursday

PAPER-1

Duration: 3 Hrs.

Time: 03:00 – 6:00 IST

SUBJECT: PHYSICS

Selections in JEE (Advanced)/
IIT-JEE Since 2002

52979

Classroom: 35901 | Distance: 17078

Selections in JEE (Main)/
AIEEE Since 2009

262693

Classroom: 194471 | Distance: 68222

Selections in NEET (UG)/
AIPMT/AIIMS Since 2012

22733

Classroom: 15409 | Distance: 7324

Admission Open for 2026-27

Target: JEE (Advanced) | JEE (Main) | NEET (UG) | PCCP (Class V to X)

100% Scholarship on the basis of Class 10th, 12th
& JEE (Main) 2026 %ile / AIR

☎ 0744-2777777 | 📞 73400 10345 | Follow Us: @ResonanceEdu | @Resonance_Edu

REGISTERED & CORPORATE OFFICE (CIN: U80302RJ2007PLC024029):

CG Tower, A-46 & 52, IPIA, Near City Mall, Jhalawar Road, Kota (Rajasthan) - 324005

☎ 0744-2777777 | 📞 73400 10345 | 📧 contact@resonance.ac.in | 🌐 www.resonance.ac.in | Follow Us: @ResonanceEdu | @Resonance_Edu

This Solution was download from Resonance JEE (Main) 2026 Solution Portal

PART : PHYSICS

1. A paper is placed in front of lens at a distance 30 cm, such that paper gets burn in minimum time. Radius of curvature of bi-convex lens is 60 cm. If refractive index of lens is $\mu = \frac{\alpha}{10}$ then value of α is

Ans. (20)

Sol. To burn in minimum time distance of paper must be at focus.

So $f = 30$ cm

$$\frac{1}{30} = (\mu - 1) \left(\frac{1}{60} - \frac{1}{-60} \right)$$

$$\frac{1}{30} = \frac{\mu - 1}{30}$$

$$\mu = 2$$

$$\alpha = 20$$

2. At any instant, if $\vec{B} = -2 \times 10^{-7} \hat{j}$ T and \vec{C} is along $+x$ axis then \vec{E} at this instant is:-

(1) 60 kV/m

(2) 45 kV/m

(3) 90 kV/m

(4) 30 kV/m

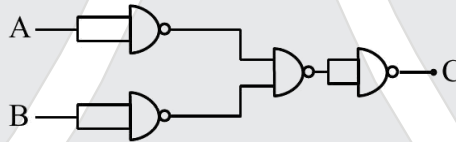
Ans. (1)

Sol. $\vec{E} = \vec{B} \times \vec{C}$

$$= -2 \times 10^{-7} \hat{j} \times 3 \times 10^8 \hat{i}$$

$$\vec{E} = 60 \text{ kV/m}$$

3. For given logic gate circuit an equivalent gate will be



(1) OR gate

(2) AND gate

(3) NAND gate

(4) NOR gate

Ans. (2)

Sol. $Y_1 = \overline{A \cdot A} = \overline{A}$

$$Y_2 = \overline{B \cdot B} = \overline{B}$$

$$Y_3 = \overline{\overline{A} \cdot \overline{B}} = A + B$$

$$C = \overline{(A + B) \cdot (A + B)} = \overline{A + B} = A \cdot B$$

4. Find speed of 1 kg object when it reaches close to earth's surface from long distance after it is released from rest as shown in diagram. [Given $R_e = 6400$ km, $g_s = 9.8 \text{ m/s}^2$]



(1) 12.5 km/s

(2) 11.2 km/s

(3) 9.8 km/s

(4) 2.4 km/s

Ans. (2)

Sol. M.E.C

Resonance Eduventures Ltd.

Reg. Office & Corp. Office : CG Tower, A-46 & 52, IPIA, Near City Mall, Jhalawar Road, Kota (Raj.) - 324005

Ph. No.: +91-744-2777777, 2777700 | FAX No. : +91-022-39167222

To Know more : sms RESO at 56677 | Website : www.resonance.ac.in | E-mail : contact@resonance.ac.in | CIN : U80302RJ2007PLC024029

Toll Free : 1800 258 5555 | 7340010333 | [facebook.com/ResonanceEdu](https://www.facebook.com/ResonanceEdu) | twitter.com/ResonanceEdu | www.youtube.com/resowatch | blog.resonance.ac.in

$$K_i + U_i = K_f + U_f$$

$$\Rightarrow 0 - \frac{GM_e m}{\infty} = \frac{1}{2}mv^2 - \frac{GMm}{R_e}$$

$$V = \sqrt{\frac{2GM}{R_e}} = \sqrt{2gR_e} = \sqrt{2 \times 9.8 \times 6400 \times 1000}$$

$$= 11.2 \text{ km/s}$$

5. Find $\left(\frac{BE}{A}\right)$ of ${}_{83}\text{Bi}^{209}$.

Given : $M_{\text{Bi}} = 208.9804 \text{ amu}$, $m_p = 1.007276 \text{ amu}$, $m_n = 1.008665 \text{ amu}$, $1 \text{ amu} = 931 \text{ MeV}$

(1) 5.8908729 MeV/A

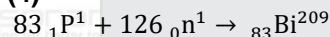
(2) 3.0008729 MeV/A

(3) 4.2506229 MeV/A

(4) 7.6408729 MeV/A

Ans. (4)

Sol.



$$\Delta m = 83 m_p + 126 m_n - M_{\text{Bi}}$$

$$= 83 \times 1.007276 + 126 \times 1.008665 - 208.9804$$

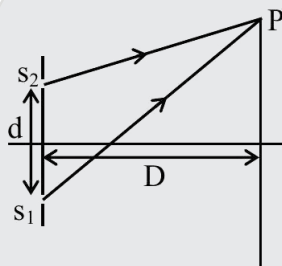
$$= 1.715298 \text{ amu}$$

$$BE = 1.715298 \times 931 \text{ MeV}$$

$$\frac{BE}{A} = \frac{1.715298 \times 931}{209} \text{ MeV}$$

$$\frac{BE}{A} = 7.6408729 \text{ MeV/A}$$

6. As shown in the figure in YDSE experiment if intensity is $\frac{3}{4}$ th of maximum intensity at point P, and path difference at point 'P' is $\Delta x = \frac{\lambda}{\alpha}$. Find the value of " α ". (where λ is wavelength of light)



(1) 4

(2) 6

(3) 5

(4) 2

Ans. (2)

Sol.

$$I = 4I_0 \cos^2 \frac{\Delta\phi}{2}$$

$$3I_0 = 4I_0 \cos^2 \frac{\Delta\phi}{2}$$

$$\cos \frac{\Delta\phi}{2} = \frac{\sqrt{3}}{2}$$

$$\frac{\Delta\phi}{2} = \frac{\pi}{6}$$

$$\frac{k\Delta x}{2} = \frac{\pi}{6}$$

$$\frac{2\pi}{\lambda} \times \frac{\Delta x}{2} = \frac{\pi}{6}$$

$$\Delta x = \frac{\lambda}{6} = \frac{\lambda}{\alpha}$$

$$\alpha = 6$$

Resonance Eduventures Ltd.

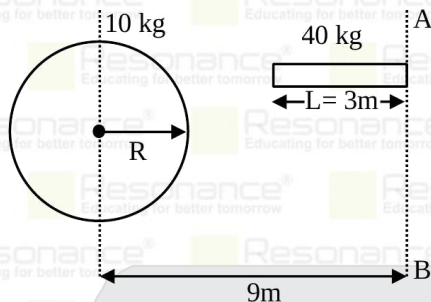
Reg. Office & Corp. Office : CG Tower, A-46 & 52, IPIA, Near City Mall, Jhalawar Road, Kota (Raj.) - 324005

Ph. No.: +91-744-2777777, 2777700 | FAX No. : +91-022-39167222

To Know more : sms RESO at 56677 | Website : www.resonance.ac.in | E-mail : contact@resonance.ac.in | CIN : U80302RJ2007PLC024029

Toll Free : 1800 258 5555 | 7340010333 | [facebook.com/ResonanceEdu](https://www.facebook.com/ResonanceEdu) | twitter.com/ResonanceEdu | www.youtube.com/resowatch | blog.resonance.ac.in

7.



If moment of inertia of rod about axis AB is equal to moment of inertia of solid sphere about an axis parallel to AB which is at 9m from AB axis as shown in the figure. If $R = \sqrt{\frac{\alpha}{2}}$ then find $\alpha = ?$

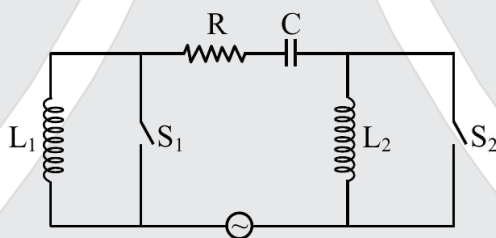
Ans. $\alpha = 60$

Sol. $\frac{2}{5} M_1 R^2 = \frac{M_2 L^2}{3}$
 $\frac{2}{5} \times 10 \times R^2 = \frac{40}{3} \times 9$

$$R = \sqrt{30} = \sqrt{\frac{\alpha}{2}}$$

$$\alpha = 60$$

8. If S_1 is closed and S_2 open, θ is 30° and if S_1 is open and S_2 closed then θ is 60° . Then find $3L_2 - L_1$ if $C = 100\mu\text{F}$.



(1) $\frac{2}{9}$

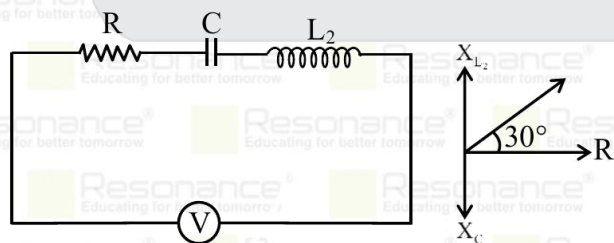
(2) $\frac{4}{9}$

(3) $\frac{9}{4}$

(4) $\frac{2}{7}$

Ans. (1)

Sol. For S_1 is closed and S_2 open



$$V = V_0 \sin(300t)$$

$$\frac{X_{L_2} - X_C}{R} = \tan(30^\circ) = \frac{1}{\sqrt{3}}$$

$$\sqrt{3}(X_{L_2} - X_C) = R \quad \dots (1)$$

Resonance Eduventures Ltd.

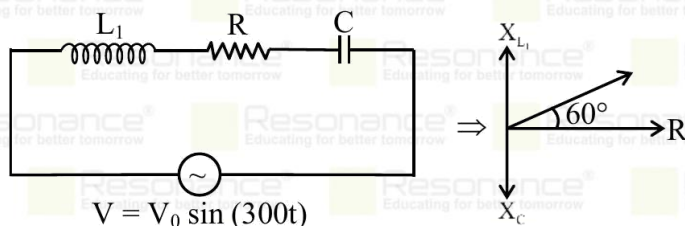
Reg. Office & Corp. Office : CG Tower, A-46 & 52, IPIA, Near City Mall, Jhalawar Road, Kota (Raj.) - 324005

Ph. No.: +91-744-2777777, 2777700 | FAX No. : +91-022-39167222

To Know more : sms RESO at 56677 | Website : www.resonance.ac.in | E-mail : contact@resonance.ac.in | CIN : U80302RJ2007PLC024029

Toll Free : 1800 258 5555 | 7340010333 | facebook.com/ResonanceEdu | twitter.com/ResonanceEdu | www.youtube.com/resowatch | blog.resonance.ac.in

For S_1 is open and S_2 is closed.



$$\frac{|X_{L_1} - X_C|}{R} = \tan 60^\circ = \sqrt{3}$$

$$\frac{|X_{L_1} - X_C|}{\sqrt{3}} = R \dots (2)$$

from Eq. (1) and (2)

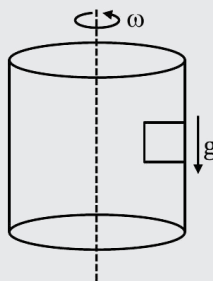
$$\sqrt{3}(X_{L_2} - X_C) = \frac{(X_{L_1} - X_C)}{\sqrt{3}}$$

$$3\left(\omega L_2 - \frac{1}{\omega C}\right) = \left[\omega L_1 - \frac{1}{\omega C}\right]$$

$$|3L_2 - L_1| = \frac{2}{\omega^2 C} = \frac{2}{9 \times 10^4 \times 100 \times 10^{-6}}$$

$$|3L_2 - L_1| = \frac{2}{9}$$

9. A hollow cylinder of radius 1 m is rotating with angular velocity $\omega = 10 \text{ rad/sec}$. Find minimum coefficient of friction μ so that block remains at rest w.r.t. cylinder.



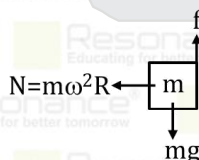
(1) 0.1

(2) 0.2

(3) 0.15

(4) 0.25

Ans. (1)
Sol.



$$f_{\max} = mg$$

$$\mu_{\min} N = mg$$

$$\mu_{\min} \times m\omega^2 R = mg$$

$$\mu_{\min} = \frac{g}{\omega^2 R} = \frac{10}{10^2 \times 1} = 0.1$$

10. Consider Bohr's model of a H-atom. If magnetic field at centre due to electron in 2nd orbit is B_1 and magnetic field due to electron in 4th orbit is B_2 . Find $\frac{B_1}{B_2}$

Resonance Eduventures Ltd.

Reg. Office & Corp. Office : CG Tower, A-46 & 52, IPIA, Near City Mall, Jhalawar Road, Kota (Raj.) - 324005

Ph. No.: +91-744-2777777, 2777700 | FAX No. : +91-022-39167222

To Know more : sms RESO at 56677 | Website : www.resonance.ac.in | E-mail : contact@resonance.ac.in | CIN : U80302RJ2007PLC024029

Toll Free : 1800 258 5555 | 7340010333 | facebook.com/ResonanceEdu | twitter.com/ResonanceEdu | www.youtube.com/resovatch | blog.resonance.ac.in

Ans. (64)

Sol. $B = \frac{\mu_0 I}{2\pi r}$
 $I = \frac{2\pi r V}{Z}$
 $B \propto \frac{r^2}{Z}$
 $V \propto \frac{n}{n^n}$
 $r \propto \frac{Z}{n}$
 $B \propto \left(\frac{Z}{n}\right)^2$
 $B \propto \frac{Z^3}{n^5}$
 $\frac{B_1}{B_2} = \frac{n_2^5}{n_1^5} = \frac{4^5}{2^5} = 64$

11. An air bubble of radius 1 mm is rising up with constant speed of 0.5 cm/s in a liquid of density $\rho_{\text{liq}} 2000 \text{ kg/m}^3$. Find coefficient of viscosity η in poise.

- (1) $\frac{70}{9}$ poise (2) 20 poise (3) $\frac{80}{9}$ poise (4) 50 poise

Ans. (3)

Sol.

$F_B = \rho_l \cdot \frac{4}{3}\pi R^3 g$



$F_v = 6\pi\eta Rv$

For constant speed

$F_B = F_v$

$\Rightarrow \rho_l \frac{4}{3}\pi R^3 g = 6\pi\eta Rv$

$\frac{2\rho_l R^2 g}{9v} = \eta$

$\Rightarrow \frac{2}{9} \times \frac{2000 \times 10^{-6} \times 10}{5 \times 10^{-3}} = \eta$

$\Rightarrow \eta = \frac{8}{9} \text{ Pa.s}$

$\Rightarrow \eta = \frac{80}{9} \text{ Poise}$

12. Position of a particle is given by $x = A \sin\left(50t + \frac{\pi}{3}\right)$. If speed and acceleration becomes '0' for the first time at t_1 and t_2 sec respectively, then find t_1 & t_2 (in sec) :-

- (1) $\frac{\pi}{300}, \frac{\pi}{75}$ (2) $\frac{\pi}{300}, \frac{\pi}{150}$ (3) $\frac{\pi}{150}, \frac{\pi}{75}$ (4) $\frac{\pi}{150}, \frac{\pi}{300}$

Ans. (1)

Sol. Phase of the motion of particle is as follows :

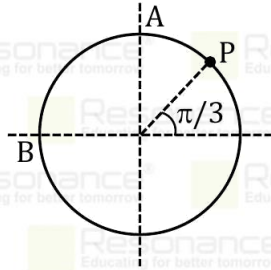
Resonance Eduventures Ltd.

Reg. Office & Corp. Office : CG Tower, A-46 & 52, IPIA, Near City Mall, Jhalawar Road, Kota (Raj.) - 324005

Ph. No.: +91-744-2777777, 2777700 | FAX No. : +91-022-39167222

To Know more : sms RESO at 56677 | Website : www.resonance.ac.in | E-mail : contact@resonance.ac.in | CIN : U80302RJ2007PLC024029

Toll Free : 1800 258 5555 | 7340010333 | facebook.com/ResonanceEdu | twitter.com/ResonanceEdu | www.youtube.com/resovatch | blog.resonance.ac.in



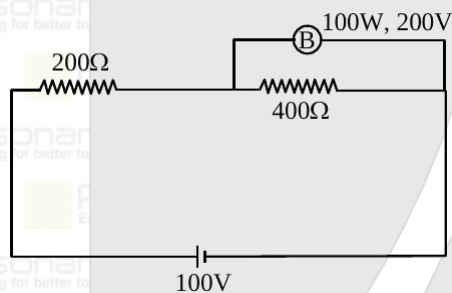
$V = 0$, when particle cross A .

$$\therefore t_1 = \frac{\pi}{6\omega} = \frac{\pi}{300}$$

$a = 0$, when particle cross B .

$$\therefore t_2 = \frac{2\pi}{3\omega} = \frac{\pi}{75}$$

13.



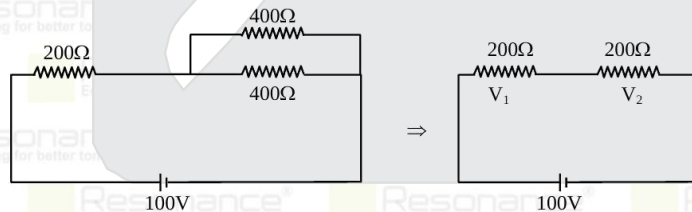
Find potential difference across bulb as shown in the figure.

Ans. (50)

Sol. For resistance of bulb

$$R = \frac{V^2}{P} = \frac{200 \times 200}{100} = 400\Omega$$

Now circuit will look like this



V_1 & V_2 will be same as resistances are same

$$V_1 = V_2 = 50 \text{ V}$$

$$V_{\text{bulb}} = V_2 = 50 \text{ V}$$

14.

A screw gauge has pitch of 0.1 mm and 100 division on its circular scale. When it's both jaws touches, fifth division of its circular scale is coincide with zero. When a sphere is placed between jaws, then reading of linear scale is 5 mm and 50th division of circular scale coincides with zero of main scale. Find diameter of the sphere.

- (1) 5.55 mm (2) 5.45 mm (3) 5.056 mm (4) 5.045 mm

Ans. (4)

Resonance Eduventures Ltd.

Reg. Office & Corp. Office : CG Tower, A-46 & 52, IPIA, Near City Mall, Jhalawar Road, Kota (Raj.) - 324005

Ph. No.: +91-744-2777777, 2777700 | FAX No. : +91-022-39167222

To Know more : sms RESO at 56677 | Website : www.resonance.ac.in | E-mail : contact@resonance.ac.in | CIN : U80302RJ2007PLC024029

Toll Free : 1800 258 5555 | 7340010333 | [facebook.com/ResonanceEdu](https://www.facebook.com/ResonanceEdu) | twitter.com/ResonanceEdu | www.youtube.com/resowatch | blog.resonance.ac.in

Sol. Least count : $\frac{0.1}{100} \text{ mm} = 0.001 \frac{\text{mm}}{\text{division}}$

Reading = MSD + (CSD) × LC – zero error = 5 mm + 50 × 0.001 – 5 × 0.001 = 5.045 mm

15. Work function for an object is 2.3 eV . If maximum kinetic energy of ejected electrons is 0.18 eV . Find wavelength λ of incident photon on object.

- (1) 200 nm (2) 500 nm (3) 250 nm (4) 300 nm

Ans. (2)

Sol. $KE_{\text{max}} = E_{\text{incident photon}} - \phi$

$2.3 = E - 0.18$

$E = 2.3 + 0.18 = 2.48 \text{ eV}$

$\Rightarrow \frac{1240 \text{ eV} \cdot \text{nm}}{\lambda(\text{ nm})}$

$\lambda = \frac{1240}{2.48} = 500 \text{ nm}$

16. An ideal gas of 5 mole has $C_p = 8 \text{ cal/mol} \cdot ^\circ\text{C}$. If its temperature changes from 10°C to 20°C , then calculate change in its internal energy (in cal).

Ans. (300)

Sol. $C_p - C_v = R \Rightarrow C_v = (C_p - R)$

$C_v = 6 \text{ cal/mol} \cdot ^\circ\text{C}$

$\Delta U = nC_v \Delta T$

$= 5 \times 6 \times 10 = 300 \text{ cal}$

17. Force on a charge $q = 10^{-9} \text{ C}$ in uniform electric and magnetic field is $\vec{F} = (2 \times 10^{-10} \hat{i} + 3 \times 10^{-10} \hat{j}) \text{ N}$. Find velocity (in m/s) of charge if value of electric field is $0.4 \hat{j} \text{ V/m}$ and magnetic field is $2 \times 10^{-3} \hat{k} \text{ T}$.

- (1) $\vec{V} = 50 \hat{i} + 100 \hat{j}$ (2) $\vec{V} = 100 \hat{i} + 100 \hat{j}$ (3) $\vec{V} = 50 \hat{i} + 50 \hat{j}$ (4) $\vec{V} = 50 \hat{i} + 10 \hat{j}$

Ans. (1)

Sol. $\vec{F} = q\vec{E} + q(\vec{V} \times \vec{B})$

$(2 \times 10^{-10} \hat{i} + 3 \times 10^{-10} \hat{j}) = 0.4 \times 10^{-9} \hat{j} + 10^{-9} \{v_x \hat{i} + v_y \hat{j} + v_z \hat{k}\} \times (2 \times 10^{-3} \hat{k})$

$(2 \times 10^{-10} \hat{i}) + (3 \times 10^{-10} \hat{j}) = 4 \times 10^{-10} \hat{j} - 2v_x \times 10^{-12} \hat{j} + 2v_y \times 10^{-12} \hat{i}$

On comparing

$3 \times 10^{-10} = 4 \times 10^{-10} - 2v_x \times 10^{-12}$

$2v_x \times 10^{-12} = 1 \times 10^{-10}$

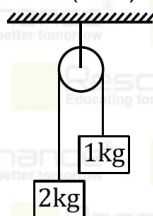
$v_x \Rightarrow \frac{10^2}{2} \Rightarrow 50$

$2 \times 10^{-10} = 2v_y \times 10^{-12}$

$v_y = \frac{200}{2} = 100$

$\vec{V} = 50 \hat{i} + 100 \hat{j}$

18. For given atwood machine. Find displacement (in m) of centre of mass after 2 sec of release.



Resonance Eduventures Ltd.

Reg. Office & Corp. Office : CG Tower, A-46 & 52, IPIA, Near City Mall, Jhalawar Road, Kota (Raj.) - 324005

Ph. No.: +91-744-2777777, 2777700 | FAX No. : +91-022-39167222

To Know more : sms RESO at 56677 | Website : www.resonance.ac.in | E-mail : contact@resonance.ac.in | CIN : U80302RJ2007PLC024029

Toll Free : 1800 258 5555 | 7340010333 | facebook.com/ResonanceEdu | twitter.com/ResonanceEdu | www.youtube.com/resowatch | blog.resonance.ac.in

- (1) $\frac{20}{9}$ (Downward) (2) $\frac{20}{9}$ (upward)
 (3) $\frac{10}{9}$ (Downward) (4) $\frac{10}{9}$ (upward)

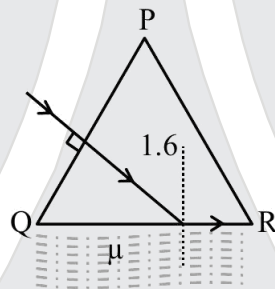
Ans. (1)

Sol. $a = \frac{(m_2 - m_1)}{m_1 + m_2} g = \frac{(2-1)}{3} \times 10 = \frac{10}{3} \text{ m/s}^2$
 $a_{cm} = \frac{(1)(10/3) - (2)(10/3)}{3} = \frac{-10}{9} \text{ m/s}^2 (\downarrow)$

$S_{cm} = u_{cm}t + \frac{1}{2}a_{cm}t^2$
 $= 0 + \frac{1}{2}\left(\frac{10}{9}\right)(4) = \frac{20}{9} \text{ m (downward)}$

$S_{COM} = \frac{20}{9} \text{ (Downward)}$

19. There is thin layer of refractive index μ below base of equilateral prism. The path of a ray is shown in figure. Find out μ .



- Ans. (1) 1.38 (2) 1.52 (3) 1.414 (4) 1.23

Sol. For surface QR

$i = 60^\circ$

$1.6 \sin 60^\circ = \mu \sin 90^\circ$

$\mu = 1.6 \times \frac{\sqrt{3}}{2} = 0.8 \times \sqrt{3} = 1.38$

20. If $G \rightarrow$ Gravitational constant and h is Plank's constant then dimension of G is :

- (1) $[M^{-2} L^+ T^{-1} h^+]$ (2) $[M^{-2} L^+ T^{-1} h^+]$
 (3) $[M^{-1} L^+ T^{-1} h^+]$ (4) $[M^{-2} L^+ T^{-1}]$

Ans. (2)

Sol. Energy = $\frac{hc}{\lambda} = \frac{GM_1M_2}{r}$
 $[ML^2 T^{-2}] = [h][T^{-1}] = [G][M^2 L^{-1}]$
 $[G] = [M^{-2} L^+ T^{-1} h^+]$

21. A small ball of mass 1 kg is released from height of 20 m on the sand. It penetrates 10 cm in sand and comes to rest. Find average force exerted by sand on ball. ($g = 10 \text{ m/s}^2$)

- (1) 1000 (2) 1980 (3) 2010 (4) 2020

Ans. (3)

Sol. $(W.D.)_g + (W.D.)_{sand} = \Delta K$
 $mg\left(\frac{10}{100} + 20\right) - F_{sand}\left(\frac{10}{100}\right) = 0$
 $F_{sand} = 2010$

Resonance Eduventures Ltd.

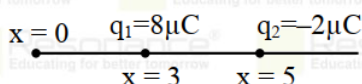
Reg. Office & Corp. Office : CG Tower, A-46 & 52, IPIA, Near City Mall, Jhalawar Road, Kota (Raj.) - 324005

Ph. No.: +91-744-2777777, 2777700 | FAX No. : +91-022-39167222

To Know more : sms RESO at 56677 | Website : www.resonance.ac.in | E-mail : contact@resonance.ac.in | CIN : U80302RJ2007PLC024029

Toll Free : 1800 258 5555 | 7340010333 | [facebook.com/ResonanceEdu](https://www.facebook.com/ResonanceEdu) | twitter.com/ResonanceEdu | www.youtube.com/resowatch | blog.resonance.ac.in

22. Find the ratio of electric flux passing through two spheres centred at origin having radius 4 m and 6 m respectively :



- (1) 2.36 (2) 1.33 (3) 5.72 (4) 6.83

Ans. (2)

Sol. For sphere with radius 4 m and center origin

$$\phi_1 = \frac{q_{en}}{\epsilon_0} = \frac{8\mu C}{\epsilon_0}$$

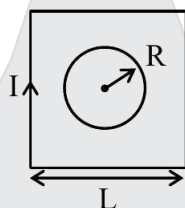
for sphere of radius 6 m

$$\phi_2 = \frac{q_{en}}{\epsilon_0} = \frac{(8 - 2)\mu C}{\epsilon_0} = \frac{6\mu C}{\epsilon_0}$$

$$\frac{\phi_1}{\phi_2} = \frac{8}{6} = \frac{4}{3} = 1.33$$

$$\frac{\phi_1}{\phi_2} = 1.33$$

23. Side of square is L and $R \ll L$.
Find mutual inductance of system shown in figure.



- (1) $\frac{\sqrt{2}\mu_0 R^2}{L}$ (2) $\frac{4\sqrt{2}\mu_0 R^2}{L}$ (3) $\frac{2\mu_0 R^2}{L}$ (4) $\frac{2\sqrt{2}\mu_0 R^2}{L}$

Ans. (4)

Sol. Magnetic field due to square

$$B = 4 \times \frac{\mu_0 I}{4\pi \frac{L}{2}} \{2\sin 45^\circ\}$$

$$= \frac{4\mu_0 I}{\pi L} \times \frac{1}{\sqrt{2}} = \frac{2\sqrt{2}\mu_0 I}{\pi L}$$

$$Q = B \times A_{\text{circle}}$$

$$Q = \frac{2\sqrt{2}\mu_0 I}{\pi L} \times \pi R^2$$

$$Q = \frac{2\sqrt{2}\mu_0 R^2}{L} I$$

$$\text{Inductance} = \frac{2\sqrt{2}\mu_0 R^2}{L}$$

24. Surface tension of soap bubble is 0.03 N/m. The work done in increasing the diameter of bubble from 2 cm to 6 cm is $\times 10^{-4}$ J. Find the value of α .

Ans. (1.92)

Sol. $W = \Delta U = 2 T [4\pi R_2^2 - 4\pi R_1^2]$

$$W = 2 \times 3 \times 10^{-2} \times 4\pi [9 \times 10^{-4} - 1 \times 10^{-4}]$$

$$W = 1.92\pi \times 10^{-4} \text{ J}$$

$$\alpha = 1.92$$

Resonance Eduventures Ltd.

Reg. Office & Corp. Office : CG Tower, A-46 & 52, IPIA, Near City Mall, Jhalawar Road, Kota (Raj.) - 324005

Ph. No.: +91-744-2777777, 2777700 | FAX No. : +91-022-39167222

To Know more : sms RESO at 56677 | Website : www.resonance.ac.in | E-mail : contact@resonance.ac.in | CIN : U80302RJ2007PLC024029

Toll Free : 1800 258 5555 | 7340010333 | facebook.com/ResonanceEdu | twitter.com/ResonanceEdu | www.youtube.com/resowatch | blog.resonance.ac.in