



JEE MAIN 2016

ONLINE EXAMINATION

DATE : 09-04-2016

SUBJECT : MATHEMATICS

TEST PAPER

WITH SOLUTIONS & ANSWER KEY

RESONANCE EDUVENTURES LTD.

CORPORATE OFFICE : CG TOWER, A-46 & 52, IPIA, NEAR CITY MALL, JHALAWAR ROAD, KOTA (RAJ.) - 324005

REG. OFFICE : J-2, JAWAHAR NAGAR, MAIN ROAD, KOTA (RAJ.)-324005 | PH. NO.: +91-744-3192222 | FAX NO. : +91-022-39167222

PH.NO. : +91-744-3012222, 6635555 | **TO KNOW MORE** : SMS RESO AT 56677

WEBSITE : WWW.RESONANCE.AC.IN | E-MAIL : CONTACT@RESONANCE.AC.IN | CIN : U80302RJ2007PLC024029

Toll Free : 1800 258 5555  08003 444 888  facebook.com/ResonanceEdu  twitter.com/ResonanceEdu  www.youtube.com/resowatch  blog.resonance.ac.in

THIS SOLUTION WAS DOWNLOAD FROM RESONANCE JEE Main 2016 SOLUTION PORTAL

JEE (Advanced)

Selections
(from 2002-2015)

23182

(YCCP: 14864 | DLP+eLP: 8318)

Selections @ 2015

4124

(YCCP: 2570 | DLP+eLP: 1554)

*Highest selections in JEE (Adv) 2015
in India from any single institute of Kota*

JEE (Main)

Selections
(from 2009-2015)

93915

(YCCP: 66288 | DLP+eLP: 27627)

Selections @ 2015

25542

(YCCP: 18816 | DLP+eLP: 6726)

*Highest selections in JEE (Main) 2015
in India from any single institute of Kota*

For Classes: XI, XII & XII+

Target: JEE (Main + Advanced) | JEE (Main) | Board/ IJSO/ NTSE

**Resonance National Entrance Test
(ResoNET)**

8th & 15th May, 2016

Toll Free: 1800 258 5555

1. If A and B are any two events such that $P(A) = 2/5$ and $P(A \cap B) = 3/20$, then the conditional probability, $P(A/(A' \cup B'))$, where A' denotes the complement of A, is equal to :

- (1) $\frac{8}{17}$ (2) $\frac{1}{4}$ (3) $\frac{5}{17}$ (4) $\frac{11}{20}$

Ans. (3)

Sol. $P(A) = \frac{2}{5}$

$$P(A \cap B) = \frac{3}{20}$$

$$P(A/(A' \cup B')) = ?$$

$$P(A/(A' \cup B')) = \frac{P(A \cap (A' \cup B'))}{P(A' \cup B')} = \frac{P((A \cap A') \cup (A \cap B))}{P(A \cup B')} = \frac{P(\phi \cup (A \cap B))}{1 - P(A \cap B)}$$

$$= \frac{P(A \cap B)}{1 - \frac{3}{20}} = \frac{P(A) - P(A \cap B)}{\frac{17}{20}} = \frac{\frac{2}{5} - \frac{3}{20}}{\frac{17}{20}} = \frac{\frac{5}{20}}{\frac{17}{20}} = \frac{5}{17}$$

2. For $x \in \mathbb{R}$, $x \neq 0$, $x \neq 1$, let $f_0(x) = \frac{1}{1-x}$ and $f_{n+1}(x) = f_0(f_n(x))$, $n = 0, 1, 2, \dots$. Then the value of

$$f_{100}(3) + f_1\left(\frac{2}{3}\right) + f_2\left(\frac{3}{2}\right)$$

is equal to :

- (1) $\frac{4}{3}$ (2) $\frac{1}{3}$ (3) $\frac{5}{3}$ (4) $\frac{8}{3}$

Ans. (3)

Sol. $f_0(x) = \frac{1}{1-x}$

$$f_1(x) = f_0(f_0(x)) = \frac{1}{1-f_0(x)} ; f_0(x) \neq 1$$

$$= \frac{1}{1-\frac{1}{1-x}} \quad x \neq 0$$

$$= \frac{1-x}{-x}$$

$$f_2(x) = f_0(f_1(x)) = \frac{1}{1-f_1(x)} ; f_1(x) \neq 1$$






RESONANCE EDUVENTURES LTD.

CORPORATE OFFICE : CG TOWER, A-46 & 52, IPIA, NEAR CITY MALL, JHALAWAR ROAD, KOTA (RAJ.) - 324005

REG. OFFICE : J-2, JAWAHAR NAGAR, MAIN ROAD, KOTA (RAJ.)-324005 | PH. NO.: +91-744-3192222 | FAX NO. : +91-022-39167222

PH. NO. : +91-744-3012222, 6635555 | TO KNOW MORE : SMS RESO AT 56677

WEBSITE : WWW.RESONANCE.AC.IN | E-MAIL : CONTACT@RESONANCE.AC.IN | CIN : U80302RJ2007PLC024029

Toll Free : 1800 258 5555  08003 444 888  facebook.com/ResonanceEdu  twitter.com/ResonanceEdu  www.youtube.com/resowatch  blog.resonance.ac.in

$$= \frac{1}{1 + \frac{1-x}{x}} = x$$

similarly $f_3(x) = f_0(x)$
 $f_4(x) = f_1(x)$

$$f_{100}(3) + f_1\left(\frac{2}{3}\right) + f_2\left(\frac{3}{2}\right) = f_1(3) + f_1\left(\frac{2}{3}\right) + \frac{3}{2}$$

$$= 1 - \frac{1}{3} + 1 - \frac{3}{2} + \frac{3}{2} = \frac{5}{3}$$

3. The distance of the point (1, -2, 4) from the plane passing through the point (1, 2, 2) and perpendicular to the planes $x - y + 2z = 3$ and $2x - 2y + z + 12 = 0$, is

- (1) $\frac{1}{\sqrt{2}}$ (2) 2 (3) $\sqrt{2}$ (4) $2\sqrt{2}$

Ans. (4)

Sol. Equation of plane \perp to the planes.
 $x - y + 2z = 3$ & $2x - 2y + z + 12 = 0$
and passes through (1, 2, 2) is

$$\begin{vmatrix} x-1 & y-2 & z-2 \\ 1 & -1 & 2 \\ 2 & -2 & 1 \end{vmatrix} = 0$$

$$3(x-1) + 3(y-2) = 0$$

$$x + y = 3 \quad \dots (1)$$

distance of plane $x + y - 3 = 0$ from (1, -2, 4) is

$$= \frac{|1-2-3|}{\sqrt{1+1}} = 2\sqrt{2}$$

4. If the equations $x^2 + bx - 1 = 0$ and $x^2 + x + b = 0$ have a common root different from -1, then |b| is equal to

- (1) $\sqrt{2}$ (2) 2 (3) $\sqrt{3}$ (4) 3

Ans. (3)

Sol. $x^2 + bx - 1 = 0$ & $x^2 + x + b = 0$ have common root α .

$$\Rightarrow \alpha^2 + b\alpha - 1 = 0$$

$$\alpha^2 + \alpha + b = 0$$

$$\Rightarrow \frac{\alpha^2}{b^2 + 1} = \frac{\alpha}{-(b+1)} = \frac{1}{(1-b)} \Rightarrow (b+1)^2 = (b^2 + 1)(1-b)$$

$$\Rightarrow b^2 + 2b + 1 = b^2 - b^3 + 1 - b \Rightarrow b^3 + 3b = 0$$

$$\Rightarrow b = 0 \text{ or } b^2 = -3$$

when $b = 0$ then common roots is (-1) hence $b = 0$ rejected.

$$\text{so } b^2 = -3 \Rightarrow b = \pm \sqrt{3}i \Rightarrow |b| = \sqrt{3}$$






RESONANCE EDUVENTURES LTD.

CORPORATE OFFICE : CG TOWER, A-46 & 52, IPIA, NEAR CITY MALL, JHALAWAR ROAD, KOTA (RAJ.) - 324005

REG. OFFICE : J-2, JAWAHAR NAGAR, MAIN ROAD, KOTA (RAJ.)-324005 | PH. NO.: +91-744-3192222 | FAX NO. : +91-022-39167222

PH.NO. : +91-744-3012222, 6635555 | TO KNOW MORE : SMS RESO AT 56677

WEBSITE : WWW.RESONANCE.AC.IN | E-MAIL : CONTACT@RESONANCE.AC.IN | [CIN : U80302RJ2007PLC024029](http://CIN:U80302RJ2007PLC024029)

Toll Free : 1800 258 5555  08003 444 888  facebook.com/ResonanceEdu  twitter.com/ResonanceEdu  www.youtube.com/resowatch  blog.resonance.ac.in

5. If $2 \int_0^1 \tan^{-1} x dx = \int_0^1 \cot^{-1}(1-x+x^2) dx$ then $\int_0^1 \tan^{-1}(1-x+x^2) dx$ is equal to :
- (1) $\log 2$ (2) $\frac{\pi}{2} + \log 2$ (3) $\log 4$ (4) $\frac{\pi}{2} - \log 4$

Ans. (1)

Sol. $2 \int_0^1 \tan^{-1} x dx = \int_0^1 \cot^{-1}(1-x+x^2) dx \dots(1)$

$$\int_0^1 \tan^{-1}(1-x+x^2) dx = \int_0^1 \left\{ \frac{\pi}{2} - \cot^{-1}(1-x+x^2) \right\} dx$$

$$= \frac{\pi x}{2} \Big|_0^1 - 2 \int_0^1 \tan^{-1} x dx = \frac{\pi}{2} - 2 \left(\frac{\pi}{4} - \frac{1}{2} \ln 2 \right) = \ln 2$$

6. If $P = \begin{bmatrix} \frac{\sqrt{3}}{2} & \frac{1}{2} \\ -\frac{1}{2} & \frac{\sqrt{3}}{2} \end{bmatrix}$, $A = \begin{bmatrix} 1 & 1 \\ 0 & 1 \end{bmatrix}$ and $Q = PAP^T$, then $P^T Q^{2015} P$ is

- (1) $\begin{bmatrix} 2015 & 1 \\ 0 & 2015 \end{bmatrix}$ (2) $\begin{bmatrix} 1 & 2015 \\ 0 & 1 \end{bmatrix}$ (3) $\begin{bmatrix} 0 & 2015 \\ 0 & 0 \end{bmatrix}$ (4) $\begin{bmatrix} 2015 & 0 \\ 1 & 2015 \end{bmatrix}$

Ans. (2)

Sol. $P P^T = \begin{bmatrix} \frac{\sqrt{3}}{2} & \frac{1}{2} \\ -\frac{1}{2} & \frac{\sqrt{3}}{2} \end{bmatrix} \begin{bmatrix} \frac{\sqrt{3}}{2} & -\frac{1}{2} \\ \frac{1}{2} & \frac{\sqrt{3}}{2} \end{bmatrix} = \begin{bmatrix} 1 & 0 \\ 0 & 1 \end{bmatrix} = P^T P$

New $P^T Q^{2015} P = P^T \underbrace{PAP^T \dots\dots PAP^T}_{2015 \text{ times}} P$

because $= A^{2015}$

Now $A^2 - 2A + I = 0$

$$\Rightarrow A^n = nA - (n-1)I \Rightarrow A^{2015} = 2015 \begin{bmatrix} 1 & 1 \\ 0 & 1 \end{bmatrix} - (2014) \begin{bmatrix} 1 & 0 \\ 0 & 1 \end{bmatrix} = \begin{bmatrix} 1 & 2015 \\ 0 & 1 \end{bmatrix}$$

7. If $\int \frac{dx}{\cos^3 x \sqrt{2 \sin 2x}} = (\tan x)^A + C(\tan x)^B + k$, where k is a constant of integration, then $A + B + C$ equals
- (1) $\frac{16}{5}$ (2) $\frac{21}{5}$ (3) $\frac{7}{10}$ (4) $\frac{27}{10}$

Ans. (1)

RESONANCE EDUVENTURES LTD.

CORPORATE OFFICE : CG TOWER, A-46 & 52, IPIA, NEAR CITY MALL, JHALAWAR ROAD, KOTA (RAJ.) - 324005

REG. OFFICE : J-2, JAWAHAR NAGAR, MAIN ROAD, KOTA (RAJ.)-324005 | PH. NO.: +91-744-3192222 | FAX NO. : +91-022-39167222

PH.NO. : +91-744-3012222, 6635555 | TO KNOW MORE : SMS RESO AT 56677

WEBSITE : WWW.RESONANCE.AC.IN | E-MAIL : CONTACT@RESONANCE.AC.IN | CIN : U80302RJ2007PLC024029

Toll Free : 1800 258 5555  08003 444 888  facebook.com/ResonanceEdu  twitter.com/ResonanceEdu  www.youtube.com/resowatch  blog.resonance.ac.in

Sol. $I = \int \frac{dx}{\cos^3 x \sin^{\frac{1}{2}} x \cos^{\frac{1}{2}} x} = \frac{1}{2} \int \frac{(\tan^2 x + 1) \sec^2 x}{(\tan x)^{\frac{1}{2}}} dx$

$\tan x = t$

$I = \frac{1}{2} \int t^{\frac{3}{2}} dt + \frac{1}{2} \int t^{-\frac{1}{2}} dt$

$= \frac{t^{\frac{5}{2}}}{\frac{5}{2}} + t^{1/2} + c = \frac{(\tan x)^{\frac{5}{2}}}{5} + (\tan x)^{1/2}$

$A = \frac{1}{2}, B = \frac{5}{2}, C = \frac{1}{5}$

$A + B + C = \frac{16}{5}$

8. The point (2, 1) is translated parallel to the line L : $x - y = 4$ by $2\sqrt{3}$ units. If the new point Q lies in the third quadrant, then the equation of the line passing through Q and perpendicular to L is :

(1) $2x + 2y = 1 - \sqrt{6}$

(2) $x = y = 3 - 3\sqrt{6}$

(3) $x + y = 2 - \sqrt{6}$

(4) $x + y = 3 - 2\sqrt{6}$

Ans. (4)

Sol. Slopes of $x - y = 4$

$\Rightarrow \tan \theta = 1 \Rightarrow \left(\sin \theta = \frac{1}{\sqrt{2}}, \cos \theta = \frac{1}{\sqrt{2}} \right)$

or $\left(\sin \theta = -\frac{1}{\sqrt{2}}, \cos \theta = -\frac{1}{\sqrt{2}} \right)$

Q is $\left(2 + 2\sqrt{3} \left(-\frac{1}{\sqrt{2}} \right), 1 + 2\sqrt{3} \left(-\frac{1}{\sqrt{2}} \right) \right)$

$(2 - \sqrt{6}, 1 - \sqrt{6})$

equation of required line is $x + y = 3 - 2\sqrt{6}$

9. If the function $f(x) = \begin{cases} -x, & x < 1 \\ a + \cos^{-1}(x+b), & 1 \leq x \leq 2 \end{cases}$ is differentiable at $x = 1$, then $\frac{a}{b}$ is equal to :

(1) $\frac{-\pi-2}{2}$

(2) $-1 - \cos^{-1}(2)$

(3) $\frac{\pi+2}{2}$

(4) $\frac{\pi-2}{2}$

Ans. (3)






RESONANCE EDUVENTURES LTD.

CORPORATE OFFICE : CG TOWER, A-46 & 52, IPIA, NEAR CITY MALL, JHALAWAR ROAD, KOTA (RAJ.) - 324005

REG. OFFICE : J-2, JAWAHAR NAGAR, MAIN ROAD, KOTA (RAJ.)-324005 | PH. NO.: +91-744-3192222 | FAX NO. : +91-022-39167222

PH.NO. : +91-744-3012222, 6635555 | TO KNOW MORE : SMS RESO AT 56677

WEBSITE : WWW.RESONANCE.AC.IN | E-MAIL : CONTACT@RESONANCE.AC.IN | CIN : U80302RJ2007PLC024029

Toll Free : 1800 258 5555  08003 444 888  facebook.com/ResonanceEdu  twitter.com/ResonanceEdu  www.youtube.com/resowatch  blog.resonance.ac.in

Sol. L.H.L. at $x = 1$ is -1
 R.H.L at $x = 1$ is $a + \cos^{-1}(1 + b)$
 $\Rightarrow -1 = a + \cos^{-1}(1 + b)$
 $\cos^{-1}(1 + b) = -1 - a \quad \dots(i)$
 now L.H.D. at $x = 1$ is -1

$$\text{R.H.D at } x = 1 \text{ is } \frac{-1}{\sqrt{1 - (1+b)^2}}$$

$$\Rightarrow (1 + b)^2 = 0 \Rightarrow b = -1$$

$$\text{Now } \cos^{-1}(1 - 1) = -1 - a$$

$$a = -1 - \frac{\pi}{2}$$

$$\frac{a}{b} = \frac{-(2 + \pi)}{2(-1)} = \frac{2 + \pi}{2}$$

10. The value of $\sum_{r=1}^{15} r^2 \left(\frac{{}^{15}C_r}{{}^{15}C_{r-1}} \right)$ is equal to :

- (1) 1085 (2) 560 (3) 680 (4) 1240

Ans. (3)

Sol. $\sum_{r=1}^{15} r^2 \left(\frac{{}^{15}C_r}{{}^{15}C_{r-1}} \right) = \sum_{r=1}^{15} r^2 \left(\frac{15-r+1}{r} \right) = \sum_{r=1}^{15} r(16-r) = 16 \left(\frac{15 \times 16}{2} \right) - \frac{15 \times 16 \times 31}{6} = \frac{15 \times 16}{6} (17) = 680.$

11. In a triangle ABC, right angled at the vertex A, if the position vectors of A, B and C are respectively $3\hat{i} + \hat{j} - \hat{k}$, $-\hat{i} + 3\hat{j} + p\hat{k}$ and $5\hat{i} + q\hat{j} - 4\hat{k}$, then the point (p, q) lies on a line

- (1) parallel to y-axis
 (2) making an acute angle with the positive direction of x-axis
 (3) parallel to x-axis
 (4) making an obtuse angle with the position direction of x-axis.

Ans. (2)

Sol. $\overline{AB} = -4\hat{i} + 2\hat{j} + (p + 1)\hat{k}$

$$\overline{AC} = 2\hat{i} + (q - 1)\hat{j} - 3\hat{k}$$

$$\overline{AB} \cdot \overline{AC} = 0 \Rightarrow -8 + 2(q - 1) - 3(p + 1) = 0 \Rightarrow -3p + 2q - 13 = 0$$

$$\Rightarrow (p, q) \text{ lies on line}$$

$$3x - 2y + 13 = 0$$

$$\text{slope} = \frac{3}{2}$$

RESONANCE EDUVENTURES LTD.

CORPORATE OFFICE : CG TOWER, A-46 & 52, IPIA, NEAR CITY MALL, JHALAWAR ROAD, KOTA (RAJ.) - 324005

REG. OFFICE : J-2, JAWAHAR NAGAR, MAIN ROAD, KOTA (RAJ.)-324005 | **PH. NO.:** +91-744-3192222 | **FAX NO. :** +91-022-39167222

PH.NO. : +91-744-3012222, 6635555 | **TO KNOW MORE :** SMS RESO AT 56677

WEBSITE : WWW.RESONANCE.AC.IN | **E-MAIL :** CONTACT@RESONANCE.AC.IN | **CIN :** U80302RJ2007PLC024029

Toll Free : 1800 258 5555  08003 444 888  facebook.com/ResonanceEdu  twitter.com/ResonanceEdu  www.youtube.com/resowatch  blog.resonance.ac.in

12. If $\lim_{x \rightarrow \infty} \left(1 + \frac{a}{x} - \frac{4}{x^2}\right)^{2x} = e^3$, then 'a' is equal to :

- (1) $\frac{2}{3}$ (2) $\frac{3}{2}$ (3) 2 (4) $\frac{1}{2}$

Ans. (2)

Sol. $L = \lim_{x \rightarrow \infty} \left(1 + \frac{a}{x} - \frac{4}{x^2}\right)^{2x}$ must be of the form 1^∞

$$L = e^{\lim_{x \rightarrow \infty} \left(\frac{a}{x} - \frac{4}{x^2}\right) 2x}$$

$$\Rightarrow L = e^{\lim_{x \rightarrow \infty} \frac{2(ax-4)}{x}}$$

$$= e^{2a} = e^3$$

$$a = \frac{3}{2}$$

13. The number of $x \in [0, 2\pi]$ for which $\left| \sqrt{2\sin^4 x + 18\cos^2 x} - \sqrt{2\cos^4 x + 18\sin^2 x} \right| = 1$ is

- (1) 6 (2) 4 (3) 8 (4) 2

Ans. (3)

Sol. $2\sin^4 x + 18\cos^2 x = 1 + 2\cos^4 x + 18\sin^2 x + 2\sqrt{2\cos^4 x + 18\sin^2 x}$

$$2(\sin^2 x - \cos^2 x) + 18(\cos^2 x - \sin^2 x) = 1 + 2\sqrt{2\cos^4 x + 18\sin^2 x}$$

$$\Rightarrow 16(\cos^2 x - \sin^2 x) = 1 + 2\sqrt{2\cos^4 x + 18\sin^2 x}$$

$$\Rightarrow 16\cos 2x - 1 = 2\sqrt{2\left(\frac{1+\cos 2x}{2}\right)^2 + 9(1-\cos 2x)}$$

$$\Rightarrow 256 \cos^2 2x + 1 - 32 \cos 2x = 4\left(\frac{1+2\cos 2x+\cos^2 2x}{2} + 9(1-\cos 2x)\right)$$

$$\Rightarrow 256 \cos^2 2x + 1 - 32 \cos 2x = 2(19 - 16\cos 2x + \cos^2 2x)$$

$$\Rightarrow 254 \cos^2 2x = 37$$

$$\Rightarrow \cos^2 2x = \frac{37}{254} \quad \Rightarrow \quad \cos 2x = \pm \sqrt{\frac{37}{254}} \in [-1, 1]$$

clearly 8 solutions






RESONANCE EDUVENTURES LTD.

CORPORATE OFFICE : CG TOWER, A-46 & 52, IPIA, NEAR CITY MALL, JHALAWAR ROAD, KOTA (RAJ.) - 324005

REG. OFFICE : J-2, JAWAHAR NAGAR, MAIN ROAD, KOTA (RAJ.)-324005 | PH. NO.: +91-744-3192222 | FAX NO. : +91-022-39167222

PH.NO. : +91-744-3012222, 6635555 | TO KNOW MORE : SMS RESO AT 56677

WEBSITE : WWW.RESONANCE.AC.IN | E-MAIL : CONTACT@RESONANCE.AC.IN | CIN : U80302RJ2007PLC024029

Toll Free : 1800 258 5555  08003 444 888  facebook.com/ResonanceEdu  twitter.com/ResonanceEdu  www.youtube.com/resowatch  blog.resonance.ac.in

14. If m and M are the minimum and the maximum values of $4 + \frac{1}{2} \sin^2 2x - 2 \cos^4 x$, $x \in \mathbb{R}$, then $M - m$ is equal to

- (1) $\frac{7}{4}$ (2) $\frac{15}{4}$ (3) $\frac{9}{4}$ (4) $\frac{1}{4}$

Ans. (3)

Sol. $4 + \frac{1}{2} \sin^2 2x - \frac{1}{2} (2 \cos^2 x)^2$
 $= 4 + \frac{1}{2} \sin^2 2x - \frac{1}{2} (1 + \cos 2x)^2 = -\cos^2 2x - \cos 2x + 4 = -[\cos^2 2x + \cos 2x - 4] = \frac{17}{4} - \left(\cos 2x + \frac{1}{2}\right)^2$

$M = \text{maximum value} = \frac{17}{4}$

$m = \text{minimum value} = 2$

$M - m = \frac{17}{4} - 2 = \frac{9}{4}$

15. If a variable line drawn through the intersection of the lines $\frac{x}{3} + \frac{y}{4} = 1$ and $\frac{x}{4} + \frac{y}{3} = 1$, meets the coordinate axes at A and B , ($A \neq B$), then the locus of the midpoint of AB is

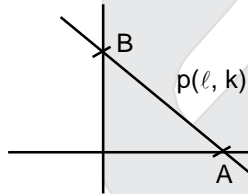
- (1) $7xy = 6(x + y)$ (2) $6xy = 7(x + y)$
 (3) $4(x + y)^2 - 28(x + y) + 49 = 0$ (4) $14(x + y)^2 - 97(x + y) + 168 = 0$

Ans. (1)

Sol. $4x + 3y = 12$ (1)

$3x + 4y = 12$ (2)

equation of lines passing through the intersection of the lines



$4x + 3y - 12 + \lambda(3x + 4y - 12) = 0$

$A = C \left(\frac{12(1+\lambda)}{4+3\lambda}, 0 \right)$

$B = \left(0, \frac{12(1+\lambda)}{3+4\lambda} \right)$

RESONANCE EDUVENTURES LTD.

CORPORATE OFFICE : CG TOWER, A-46 & 52, IPIA, NEAR CITY MALL, JHALAWAR ROAD, KOTA (RAJ.) - 324005

REG. OFFICE : J-2, JAWAHAR NAGAR, MAIN ROAD, KOTA (RAJ.)-324005 | PH. NO.: +91-744-3192222 | FAX NO. : +91-022-39167222

PH.NO. : +91-744-3012222, 6635555 | TO KNOW MORE : SMS RESO AT 56677

WEBSITE : WWW.RESONANCE.AC.IN | E-MAIL : CONTACT@RESONANCE.AC.IN | CIN : U80302RJ2007PLC024029

Toll Free : 1800 258 5555 08003 444 888 facebook.com/ResonanceEdu twitter.com/ResonanceEdu www.youtube.com/resowatch blog.resonance.ac.in

$$ln = \frac{6(1+\lambda)}{4+3\lambda} \quad \dots(3)$$

$$k = \frac{6(1+\lambda)}{3+4\lambda} \quad \dots (4)$$

from (3) & (4)

$$\lambda = \frac{3k-4h}{3h-4k} \quad \text{put in (1)}$$

$$7hk = 6(h+k)$$

hence locus is $7xy = 6(x+y)$

16. If $f(x)$ is a differentiable function in the interval $(0, \infty)$ such that $f(1) = 1$ and $\lim_{t \rightarrow x} \frac{t^2 f(x) - x^2 f(t)}{t-x} = 1$, for each

$x > 0$, then $f\left(\frac{3}{2}\right)$ is equal to :

(1) $\frac{13}{6}$

(2) $\frac{23}{18}$

(3) $\frac{25}{9}$

(4) $\frac{31}{18}$

Ans.
Sol.

Differentiate w.r.t. t

$$\lim_{t \rightarrow x} \frac{2t f(x) - x^2 f'(t)}{1} = 1$$

$$\Rightarrow 2x f(x) - x^2 f'(x) = 1$$

$$f'(x) = \frac{2x f(x) - 1}{x^2}$$

$$\frac{dy}{dx} = \frac{2y}{x} - \frac{1}{x^2}$$

$$\text{I.F.} = e^{-\int \frac{2}{x} dx}$$

$$= e^{-2 \ln x} = \frac{1}{x^2}$$

$$y \left(\frac{1}{x^2} \right) = \int -\frac{1}{x^4} dx$$

$$\frac{y}{x^2} = \frac{1}{3x^3} + c$$

$$\text{at } x = 1, y = 1$$

$$\Rightarrow c = \frac{2}{3}$$

$$f(x) = \frac{1}{3x} + \frac{2x^2}{3}$$

$$f\left(\frac{3}{2}\right) = \frac{31}{18}$$






RESONANCE EDUVENTURES LTD.

CORPORATE OFFICE : CG TOWER, A-46 & 52, IPIA, NEAR CITY MALL, JHALAWAR ROAD, KOTA (RAJ.) - 324005

REG. OFFICE : J-2, JAWAHAR NAGAR, MAIN ROAD, KOTA (RAJ.)-324005 | PH. NO.: +91-744-3192222 | FAX NO. : +91-022-39167222

PH. NO. : +91-744-3012222, 6635555 | TO KNOW MORE : SMS RESO AT 56677

WEBSITE : WWW.RESONANCE.AC.IN | E-MAIL : CONTACT@RESONANCE.AC.IN | CIN : U80302RJ2007PLC024029

Toll Free : 1800 258 5555  08003 444 888  facebook.com/ResonanceEdu  twitter.com/ResonanceEdu  www.youtube.com/resowatch  blog.resonance.ac.in

17. If the tangent at a point P, with parameter t, on the curve $x = 4t^2 + 3$, $y = 8t^3 - 1$, $t \in \mathbb{R}$, meets the curve again at a point Q, then the coordinates of Q are :

(1) $(t^2 + 3, -t^3 - 1)$ (2) $(t^2 + 3, t^3 - 1)$ (3) $(16t^2 + 3, -64t^3 - 1)$ (4) $(4t^2 + 3, -8t^3 - 1)$

Ans. (1)

Sol. $P(x = 4t^2 + 3, y = 8t^3 - 1)$

let $Q(4t_1^2 + 3, 8y_1^3 - 1)$

at P, $\frac{dy}{dx} = \frac{dy/dt}{dx/dt} = \frac{24t^2}{8t} = 3t$

\therefore tangent at P is $y - 8t^3 + 1 = 3t(x - 4t^2 - 3)$

Q will satisfy it

$\therefore 8t_1^3 - 8t^3 = 3t(4t_1^2 - 4t^2)$

$8(t_1 - t)(t_1^2 + t_1t + t^2) = 3t \cdot 4(t_1 - t)(t_1 + t)$

$2(t_1^2 + t_1t + t^2) = 3t(t_1 + t)$

$2t_1^2 + 2t_1t + 2t^2 = 3t_1t + 3t^2$

$2t_1^2 - t_1t - t^2 = 0$

$(t_1 - t)(2t_1 + t) = 0$

$t_1 = -\frac{t}{2}$

$\therefore Q(t^2 + 3, -t^3 - 1)$ Ans. (1)

18. If the tangent at a point on the ellipse $\frac{x^2}{27} + \frac{y^2}{3} = 1$ meets the coordinate axes at A and B, and O is the origin, then the minimum area (in sq. units) of the triangle OAB is :

(1) 9 (2) $\frac{9}{2}$ (3) $9\sqrt{3}$ (4) $3\sqrt{3}$

Ans. (1)

Sol. Let P $(3\sqrt{3} \cos\theta, \sqrt{3} \sin\theta)$

\therefore tangent is $\frac{x}{3\sqrt{3}} \cos\theta + \frac{y}{\sqrt{3}} \sin\theta = 1$

$\Rightarrow A(3\sqrt{3} \sec\theta, 0)$ $B(0, \sqrt{3} \operatorname{cosec}\theta)$

\therefore Area of $\Delta OAB = \frac{1}{2} OA \cdot OB$

$= \frac{1}{2} (3\sqrt{3} \sec\theta \cdot \sqrt{3} \operatorname{cosec}\theta)$

$= \frac{9}{2 \sin\theta \cos\theta} = \frac{9}{\sin 2\theta}$

\therefore minimum area of $\Delta OAB = \frac{9}{1} = 9$






RESONANCE EDUVENTURES LTD.

CORPORATE OFFICE : CG TOWER, A-46 & 52, IPIA, NEAR CITY MALL, JHALAWAR ROAD, KOTA (RAJ.) - 324005

REG. OFFICE : J-2, JAWAHAR NAGAR, MAIN ROAD, KOTA (RAJ.)-324005 | PH. NO.: +91-744-3192222 | FAX NO. : +91-022-39167222

PH.NO. : +91-744-3012222, 6635555 | TO KNOW MORE : SMS RESO AT 56677

WEBSITE : WWW.RESONANCE.AC.IN | E-MAIL : CONTACT@RESONANCE.AC.IN | [CIN : U80302RJ2007PLC024029](http://CIN:U80302RJ2007PLC024029)

Toll Free : 1800 258 5555  08003 444 888  facebook.com/ResonanceEdu  twitter.com/ResonanceEdu  www.youtube.com/resowatch  blog.resonance.ac.in

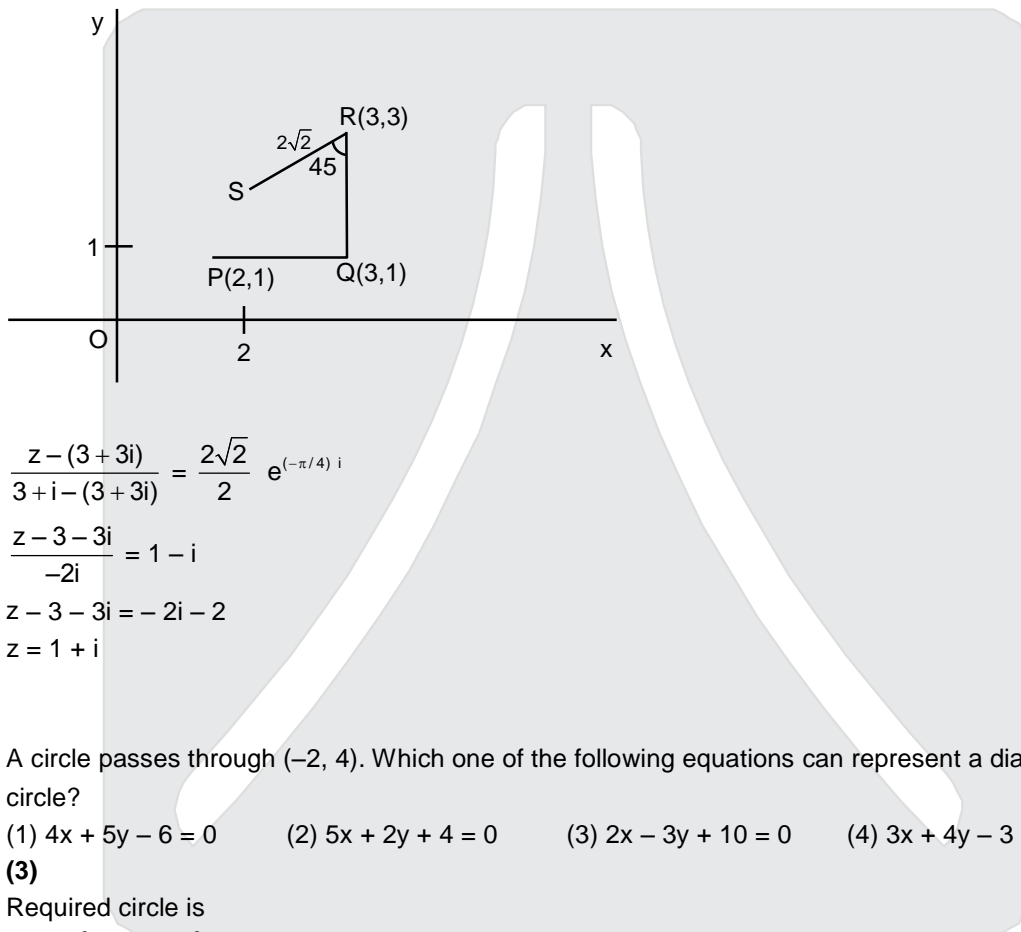
19. The point represented by $2+i$ in the Argand plane moves 1 unit eastwards, then 2 units northwards and finally from there $2\sqrt{2}$ units in the south-westwards direction. Then its new position in the Argand plane is at the point represented by :

(1) $2 + 2i$ (2) $-2 - 2i$ (3) $1 + i$ (4) $-1 - i$

Ans. (3)

Sol. Let $P(2 + i)$

By rotation theorem



$$\frac{z - (3 + 3i)}{3 + i - (3 + 3i)} = \frac{2\sqrt{2}}{2} e^{(-\pi/4) i}$$

$$\frac{z - 3 - 3i}{-2i} = 1 - i$$

$$z - 3 - 3i = -2i - 2$$

$$z = 1 + i$$

20. A circle passes through $(-2, 4)$. Which one of the following equations can represent a diameter of this circle?

(1) $4x + 5y - 6 = 0$ (2) $5x + 2y + 4 = 0$ (3) $2x - 3y + 10 = 0$ (4) $3x + 4y - 3 = 0$

Ans. (3)

Sol. Required circle is

$$(x - 0)^2 + (y - 2)^2 + \lambda(x) = 0$$

it passes $(-2, 4)$

$$\therefore 4 + 4 - 2\lambda = 0$$

$$\lambda = 4$$

$$\therefore \text{circle is } x^2 + y^2 - 4y + 4x + 4 = 0$$

centre $(-2, 2)$ which satisfy

$$2x - 3y + 10 = 0 \text{ Ans. 3}$$

RESONANCE EDUVENTURES LTD.

CORPORATE OFFICE : CG TOWER, A-46 & 52, IPIA, NEAR CITY MALL, JHALAWAR ROAD, KOTA (RAJ.) - 324005

REG. OFFICE : J-2, JAWAHAR NAGAR, MAIN ROAD, KOTA (RAJ.)-324005 | PH. NO.: +91-744-3192222 | FAX NO. : +91-022-39167222

PH.NO. : +91-744-3012222, 6635555 | TO KNOW MORE : SMS RESO AT 56677

WEBSITE : WWW.RESONANCE.AC.IN | E-MAIL : CONTACT@RESONANCE.AC.IN | [CIN : U80302RJ2007PLC024029](http://CIN:U80302RJ2007PLC024029)

Toll Free : 1800 258 5555 08003 444 888 facebook.com/ResonanceEdu twitter.com/ResonanceEdu www.youtube.com/resowatch blog.resonance.ac.in

21. The number of distinct real roots of the equation, $\begin{vmatrix} \cos x & \sin x & \sin x \\ \sin x & \cos x & \sin x \\ \sin x & \sin x & \cos x \end{vmatrix} = 0$ in the interval $\left[-\frac{\pi}{4}, \frac{\pi}{4}\right]$ is :
- (1) 4 (2) 1 (3) 2 (4) 3

Ans. (3)

Sol. $\begin{vmatrix} \cos x & \sin x & \sin x \\ \sin x & \cos x & \sin x \\ \sin x & \sin x & \cos x \end{vmatrix} = 0$

$$\Rightarrow \cos^3 x + \sin^3 x + \sin^3 x - 3\sin^2 x \cos x = 0$$

$$\Rightarrow (\cos x + \sin x + \sin x) (\cos^2 x + \sin^2 x + \sin^2 x - \cos x \sin x - \cos x \sin x - \sin^2 x) = 0$$

$$\Rightarrow \cos x = -2\sin x \quad \text{or} \quad \cos x = \sin x$$

$$\tan x = -\frac{1}{2} \quad \tan = 1 \Rightarrow x = \pi/4$$

$$x = -\tan^{-1} \frac{1}{2} \quad \therefore \text{two solutions}$$

22. The shortest distance between the lines $\frac{x}{2} = \frac{y}{2} = \frac{z}{1}$ and $\frac{x+2}{-1} = \frac{y-4}{8} = \frac{z-5}{4}$ lies in the interval :
- (1) (2, 3] (2) [0, 1) (3) (3, 4] (4) [1, 2)

Ans. (1)

Sol. $\frac{x}{2} = \frac{y}{2} = \frac{z}{1}$ and $\frac{x+2}{-1} = \frac{y-4}{8} = \frac{z-5}{4}$

shortest distance

$$= (\vec{a}_2 - \vec{a}_1) \cdot (\vec{b}_1 \times \vec{b}_2)$$

$$\text{here } \vec{b}_1 - \vec{b}_2 = (2\vec{i} + 2\vec{j} + \vec{k}) \times (-\vec{i} + 8\vec{j} + 4\vec{k})$$

$$= -9\vec{j} + 18\vec{k}$$

$$(\vec{b}_1 \times \vec{b}_2) = \frac{-\vec{j} + 2\vec{k}}{\sqrt{5}}$$

$$\vec{a}_2 - \vec{a}_1 = -2\vec{i} + 4\vec{j} + 5\vec{k}$$

$$\therefore \text{S.D. } (-2\vec{i} + 4\vec{j} + 6\vec{k}) \cdot \frac{(-\vec{j} + 2\vec{k})}{\sqrt{5}} = \frac{6}{\sqrt{5}} \text{ which lies in } (2, 3]$$

RESONANCE EDUVENTURES LTD.

CORPORATE OFFICE : CG TOWER, A-46 & 52, IPIA, NEAR CITY MALL, JHALAWAR ROAD, KOTA (RAJ.) - 324005

REG. OFFICE : J-2, JAWAHAR NAGAR, MAIN ROAD, KOTA (RAJ.)-324005 | PH. NO.: +91-744-3192222 | FAX NO. : +91-022-39167222

PH. NO. : +91-744-3012222, 6635555 | TO KNOW MORE : SMS RESO AT 56677

WEBSITE : WWW.RESONANCE.AC.IN | E-MAIL : CONTACT@RESONANCE.AC.IN | CIN : U80302RJ2007PLC024029

Toll Free : 1800 258 5555  08003 444 888  facebook.com/ResonanceEdu  twitter.com/ResonanceEdu  www.youtube.com/resowatch  blog.resonance.ac.in

23. If the four letter words (need not be meaningful) are to be formed using the letters from the word "MEDITERRANEAN" such that the first letter is R and the fourth letter is E, then the total number of all such words is :

- (1) $\frac{11!}{(2!)^3}$ (2) 59 (3) 110 (4) 56

Ans. (1)

Sol. There are 1M, 3E, 1D, 1I, 1T, 2R, 2A, 2N

R--E-----

rest of 11 letters can be arranged in $\frac{11!}{(2!)^3}$

24. Let a and b respectively be the semi-transverse and semi-conjugate axes of a hyperbola whose eccentricity satisfies the equation $9e^2 - 18e + 5 = 0$. If S(5, 0) is a focus and $5x = 9$ is the corresponding directrix of hyperbola, then $a^2 - b^2$ is equal to

- (1) -7 (2) -5 (3) 5 (4) 7

Ans. (1)

Sol. $9e^2 - 18e + 5 = 0$

$$\Rightarrow e = \frac{5}{3}$$

$$\therefore 1 + \frac{b^2}{a^2} = e^2 = \frac{25}{9} \dots\dots\dots (i)$$

Also distance between foci and directrix is

$$= \left(ae - \frac{a}{e} \right) = 5 - \frac{9}{5}$$

$$\Rightarrow a \left(\frac{5}{3} - \frac{3}{5} \right) = \frac{16}{5} \Rightarrow a = 3$$

from (i)

$$1 + \frac{b^2}{9} = e^2 = \frac{25}{9} \Rightarrow b^2 = 16$$

$$\therefore a^2 - b^2 = 9 - 16 = -7$$

25. Consider the following two statements :

P : If 7 is an odd number, then 7 is divisible by 2.

Q : If 7 is a prime number, then 7 is an odd number.

If V_1 is the truth value of contrapositive of P and V_2 is the truth value of contrapositive of Q, then the ordered pair (V_1, V_2) equals :

- (1) (F, T) (2) (T, F) (3) (F, F) (4) (T, T)

Ans. (1)






RESONANCE EDUVENTURES LTD.

CORPORATE OFFICE : CG TOWER, A-46 & 52, IPIA, NEAR CITY MALL, JHALAWAR ROAD, KOTA (RAJ.) - 324005

REG. OFFICE : J-2, JAWAHAR NAGAR, MAIN ROAD, KOTA (RAJ.)-324005 | **PH. NO.:** +91-744-3192222 | **FAX NO.:** +91-022-39167222

PH.NO.: +91-744-3012222, 6635555 | **TO KNOW MORE :** SMS RESO AT 56677

WEBSITE : WWW.RESONANCE.AC.IN | **E-MAIL :** CONTACT@RESONANCE.AC.IN | **CIN :** U80302RJ2007PLC024029

Toll Free : 1800 258 5555  08003 444 888  facebook.com/ResonanceEdu  twitter.com/ResonanceEdu  www.youtube.com/resowatch  blog.resonance.ac.in

Sol. Statement P is False
Statement Q is True.
 $V_1 \equiv F$
 $V_2 \equiv T$
Ans. 1

26. The minimum distance of a point on the curve $y = x^2 - 4$ from the origin is :

- (1) $\frac{\sqrt{15}}{2}$ (2) $\frac{\sqrt{19}}{2}$ (3) $\sqrt{\frac{15}{2}}$ (4) $\sqrt{\frac{19}{2}}$

Ans. (1)

Sol. Let point at minimum distance from O is

$$(h, h^2 - 4)$$

$$\therefore OP^2 = h^2 + (h^2 - 4)^2$$

$$\frac{d(OP^2)}{dh} = 2h + 2(h^2 - 4)2h = 0$$

$$\Rightarrow h = \pm \sqrt{\frac{7}{2}}, 0$$

$$\left(\frac{d^2(OP^2)}{dh^2} \right)_{h=\pm\sqrt{\frac{7}{2}}} > 0$$

$$\therefore OP \text{ is min at } h = \pm \sqrt{\frac{7}{2}}$$

$$OP_{\min} = \sqrt{\frac{7}{2} + \left(\frac{7}{2} - 4\right)^2} = \frac{\sqrt{15}}{2}$$

27. Let x, y, z be positive real numbers such that $x + y + z = 12$ and $x^3y^4z^5 = (0.1)(600)^3$. Then $x^3 + y^3 + z^3$ is equal to

- (1) 270 (2) 258 (3) 216 (4) 342

Ans. (3)

Sol.

$$x + y + z = 12$$

$$x^3y^4z^5 = (0.1)(600)^3$$

$$\frac{3\left(\frac{x}{3}\right) + 4\left(\frac{y}{4}\right) + 5\left(\frac{z}{5}\right)}{12} \geq \left\{ \left(\frac{x}{3}\right)^3 \left(\frac{y}{4}\right)^4 \left(\frac{z}{5}\right)^5 \right\}^{1/12}$$

$$1 \geq \frac{x^3y^4z^5}{(60)^3(4 \times 25)}$$

$$x^3y^4z^5 \leq (0.1)(600)^3$$

$$\text{But } x^3y^4z^5 = (10.1)(600)^3$$

Clearly AM = GM

$$\text{Hence } \frac{x}{3} = \frac{y}{4} = \frac{z}{5} \Rightarrow x = 3, y = 4, z = 5$$

$$\Rightarrow x^3 + y^3 + z^3 = 27 + 64 + 125 = 216$$

RESONANCE EDUVENTURES LTD.

CORPORATE OFFICE : CG TOWER, A-46 & 52, IPIA, NEAR CITY MALL, JHALAWAR ROAD, KOTA (RAJ.) - 324005

REG. OFFICE : J-2, JAWAHAR NAGAR, MAIN ROAD, KOTA (RAJ.)-324005 | PH. NO.: +91-744-3192222 | FAX NO. : +91-022-39167222

PH.NO. : +91-744-3012222, 6635555 | TO KNOW MORE : SMS RESO AT 56677

WEBSITE : WWW.RESONANCE.AC.IN | E-MAIL : CONTACT@RESONANCE.AC.IN | CIN : U80302RJ2007PLC024029

Toll Free : 1800 258 5555  08003 444 888  facebook.com/ResonanceEdu  twitter.com/ResonanceEdu  www.youtube.com/resowatch  blog.resonance.ac.in

- 28.** If the mean deviation of the numbers 1, 1 + d,, 1 + 100d from their mean is 255, then a value of d is :
 (1) 10 (2) 20.2 (3) 5.05 (4) 10.1

Ans. (4)

Sol. Mean is $\frac{101 + \frac{100 \times 101}{2}}{101} = 1 + 50d$

sum of deviation about mean is

$$50d + 49d + \dots\dots\dots d + 0 + d + \dots\dots + 50d = 50 \cdot 51d$$

$$\text{Mean deviation} = \frac{50 \times 51d}{101} = 255$$

$$d = \frac{255 \times 101}{2550} = 10.1$$

- 29.** For $x \in \mathbb{R}$, $x \neq -1$, if $(1+x)^{2016} + x(1+x)^{2015} + x^2(1+x)^{2014} + \dots\dots\dots + x^{2016} = \sum_{i=0}^{2016} a_i x^i$, then a_{17} is equal to :

- (1) $\frac{2016!}{16!}$ (2) $\frac{2017!}{2000!}$ (3) $\frac{2017!}{17! \cdot 2000!}$ (4) $\frac{2016!}{17! \cdot 1999!}$

Ans. (3)

Sol. $\sum_{i=0}^{2016} C_i \cdot x^i = (1+x)^{2016} + x(1+x)^{2015} + x^2(1+x)^{2014} + \dots\dots\dots + x^{2016}$

$$= \frac{(1+x)^{2016} \left(1 - \left(\frac{x}{1+x} \right)^{2017} \right)}{1 - \frac{x}{1+x}}$$

$$= \frac{(1+x)^{2016} \cdot x^{2017}}{1 - \frac{x}{1+x}} = \frac{(1+x)^{2017} - x^{2017}}{1+x}$$

$$\therefore a_{17} = {}^{2017}C_{17} = \frac{2017!}{17! \cdot 2000!}$$






RESONANCE EDUVENTURES LTD.

CORPORATE OFFICE : CG TOWER, A-46 & 52, IPIA, NEAR CITY MALL, JHALAWAR ROAD, KOTA (RAJ.) - 324005

REG. OFFICE : J-2, JAWAHAR NAGAR, MAIN ROAD, KOTA (RAJ.)-324005 | **PH. NO.:** +91-744-3192222 | **FAX NO.:** +91-022-39167222

PH.NO.: +91-744-3012222, 6635555 | **TO KNOW MORE :** SMS RESO AT 56677

WEBSITE : WWW.RESONANCE.AC.IN | **E-MAIL :** CONTACT@RESONANCE.AC.IN | **CIN :** U80302RJ2007PLC024029

Toll Free : 1800 258 5555  08003 444 888  facebook.com/ResonanceEdu  twitter.com/ResonanceEdu  www.youtube.com/resowatch  blog.resonance.ac.in

30. The area (in sq. units) of the region described by $A = \{(x, y) \mid y \geq x^2 - 5x + 4, x + y \geq 1, y \leq 0\}$ is :

(1) $\frac{7}{2}$

(2) $\frac{13}{6}$

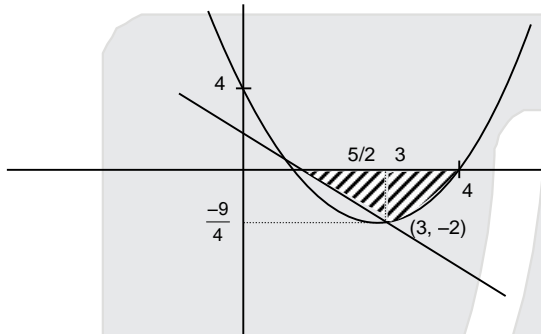
(3) $\frac{17}{6}$

(4*) $\frac{19}{6}$

Ans. (4)

Sol. $A = \{(x, y) \mid y \geq x^2 - 5x + 4, x + y \geq 1, y \leq 0\}$

Here $y \geq x^2 - 5x + 4, x + y \geq 1, y \leq 0$



$$\text{Required area} = \frac{1}{2} \cdot 2 + \int_3^4 (5x - x^2 - 4) dx$$

$$= 2 + \left[\frac{5x^2}{2} - \frac{x^3}{3} - 4x \right]_3^4$$

$$= 2 + \frac{5}{2} (16 - 9) - \frac{1}{3} (64 - 27) - 4 (4 - 3)$$

$$= 2 + \frac{35}{2} - \frac{37}{3} - 4 = \frac{19}{6}$$






RESONANCE EDUVENTURES LTD.

CORPORATE OFFICE : CG TOWER, A-46 & 52, IPIA, NEAR CITY MALL, JHALAWAR ROAD, KOTA (RAJ.) - 324005

REG. OFFICE : J-2, JAWAHAR NAGAR, MAIN ROAD, KOTA (RAJ.)-324005 | PH. NO.: +91-744-3192222 | FAX NO. : +91-022-39167222

PH.NO. : +91-744-3012222, 6635555 | TO KNOW MORE : SMS RESO AT 56677

WEBSITE : WWW.RESONANCE.AC.IN | E-MAIL : CONTACT@RESONANCE.AC.IN | [CIN : U80302RJ2007PLC024029](http://CIN:U80302RJ2007PLC024029)

Toll Free : 1800 258 5555  08003 444 888  facebook.com/ResonanceEdu  twitter.com/ResonanceEdu  www.youtube.com/resowatch  blog.resonance.ac.in

Announces

VIVEK

A COMPACT COURSE (CC) of 5 WEEKS*

Short-term Classroom Contact Program (SCCP)

Target: JEE (Advanced) 2016

Compact
with Impact...



| Target | Duration | Commencement Date/(Day) | End Date/(Day) |
|------------------------|-----------|-------------------------|-----------------------|
| JEE (Advanced) 2016 | 05 Weeks* | 07.04.2016 (Thursday) | 14.05.2016 (Saturday) |