

P1-12-2-9

403189

CODE

9

PAPER 1

Time: 3 Hours

Maximum Marks: 210

Please read the instructions carefully. You are allotted 5 minutes specifically for this purpose.

INSTRUCTIONS :

A. General

1. This booklet is your Question Paper. Do not break the seals of this booklet before being instructed to do so by the invigilators.
2. The question paper CODE is printed on the right hand top corner of this page and on the back page (Page No. 28) of this booklet.
3. Blank spaces and blank pages are provided in this booklet for your rough work. No additional sheets will be provided for rough work.
4. Blank papers, clipboards, log tables, slide rules, calculators, cameras, cellular phones, pagers, and electronic gadgets are NOT allowed inside the examination hall.
5. Answers to the questions and personal details are to be filled on a two-part carbon-less paper, which is provided separately. You should not separate these parts. The invigilator will separate them at the end of examination. The upper sheet is a machine-gradable Objective Response Sheet (ORS) which will be taken back by the invigilator. You will be allowed to take away the bottom sheet at the end of the examination.
6. Using a black ball point pen, darken the bubbles on the upper original sheet. Apply sufficient pressure so that the impression is created on the bottom sheet.
7. DO NOT TAMPER WITH/MUTILATE THE ORS OR THE BOOKLET.
8. On breaking the seals of the booklet check that it contains 28 pages and all the 60 questions and corresponding answer choices are legible. Read carefully the instructions printed at the beginning of each section.

B. Filling the Right Part of the ORS

9. The ORS has CODES printed on its left and right parts.
10. Check that the same CODE is printed on the ORS and on this booklet. IF IT IS NOT THEN ASK FOR A CHANGE OF THE BOOKLET. Sign at the place provided on the ORS affirming that you have verified that all the codes are same.
11. Write your Name, Registration Number and the name of examination centre and sign with pen in the boxes provided on the right part of the ORS. Do not write any of this information anywhere else. Darken the appropriate bubble UNDER each digit of your Registration Number in such a way that the impression is created on the bottom sheet. Also darken the paper CODE given on the right side of ORS (R4).

C. Question Paper Format

The question paper consists of 3 parts (Physics, Chemistry and Mathematics). Each part consists of three sections.

12. Section I contains 10 multiple choice questions. Each question has four choices (A), (B), (C) and (D) out of which ONLY ONE is correct.
13. Section II contains 5 multiple choice questions. Each question has four choices (A), (B), (C) and (D) out of which ONE or MORE are correct.
14. Section III contains 5 questions. The answer to each question is a single digit integer, ranging from 0 to 9 (both inclusive).

D. Marking Scheme

15. For each question in Section I, you will be awarded 3 marks if you darken the bubble corresponding to the correct answer ONLY and zero marks if no bubbles are darkened. In all other cases, minus one (-1) mark will be awarded in this section.
16. For each question in Section II, you will be awarded 4 marks if you darken ALL the bubble(s) corresponding to the correct answer(s) ONLY. In all other cases zero (0) marks will be awarded. No negative marks will be awarded for incorrect answers in this section.
17. For each question in Section III, you will be awarded 4 marks if you darken the bubble corresponding to the correct answer ONLY. In all other cases zero (0) marks will be awarded. No negative marks will be awarded for incorrect answers in this section.

Write your Name, Registration Number and sign in the space provided on the back page of this booklet.

DO NOT BREAK THE SEALS WITHOUT BEING INSTRUCTED TO DO SO BY THE INVIGILATOR

P1

E

9

20 30 60

Study



	Subject	Section		Page No.
Part I	Physics	I	Single Correct Answer Type	88160F
		II	Multiple Correct Answer(s) Type	9 – 11
		III	Integer Answer Type	12 – 13
Part II	Chemistry	I	Single Correct Answer Type	14 – 16
		II	Multiple Correct Answer(s) Type	17 – 18
		III	Integer Answer Type	19 – 20
Part III	Mathematics	I	Single Correct Answer Type	21 – 23
		II	Multiple Correct Answer(s) Type	24 – 25
		III	Integer Answer Type	26

Space for Rough Work

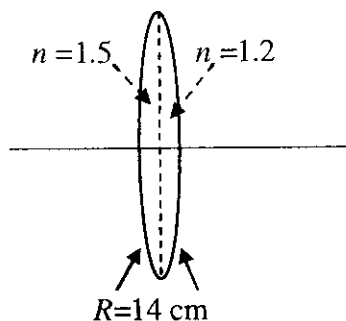


PART I : PHYSICS

SECTION I : Single Correct Answer Type

This section contains 10 multiple choice questions. Each question has four choices (A), (B), (C) and (D) out of which **ONLY ONE** is correct.

1. A bi-convex lens is formed with two thin plano-convex lenses as shown in the figure. Refractive index n of the first lens is 1.5 and that of the second lens is 1.2. Both the curved surfaces are of the same radius of curvature $R = 14$ cm. For this bi-convex lens, for an object distance of 40 cm, the image distance will be

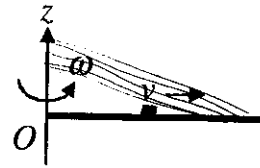


- (A) -280.0 cm. (B) 40.0 cm. (C) 21.5 cm. (D) 13.3 cm.

Space for Rough Work

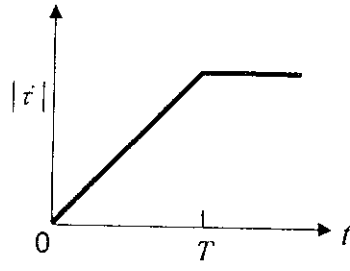


2. A thin uniform rod, pivoted at O , is rotating in the horizontal plane with constant angular speed ω , as shown in the figure. At time $t = 0$, a small insect starts from O and moves with constant speed v with respect to the rod towards the other end. It reaches the end of the rod at $t = T$ and stops. The angular speed of the system remains ω throughout. The magnitude of the torque ($|\vec{\tau}|$) on the system about O , as a function of time is best represented by which plot ?

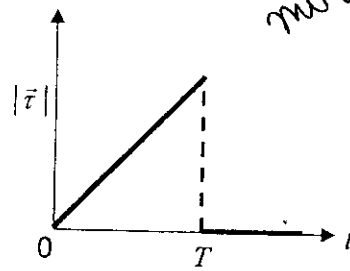


~~Handwritten diagram with axes and a note: $\tau = m v r \omega$~~

(A)

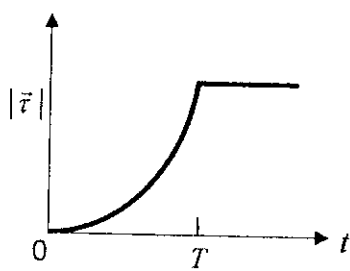


(B)

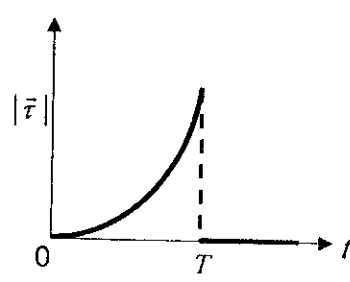


$\frac{v}{r} 2l\omega$

~~(C)~~



(D)



Space for Rough Work

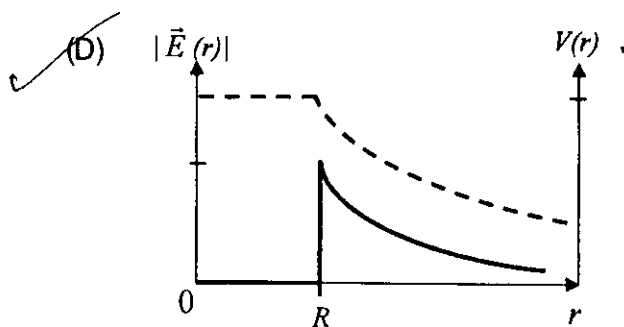
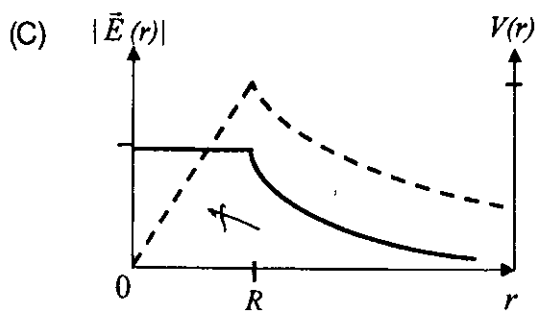
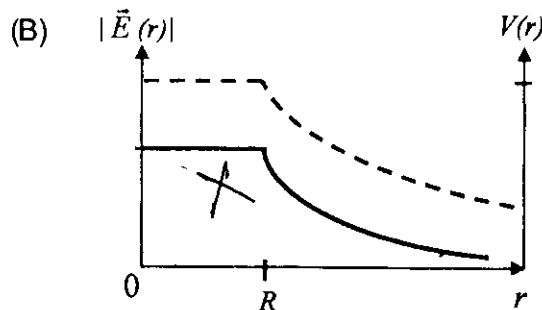
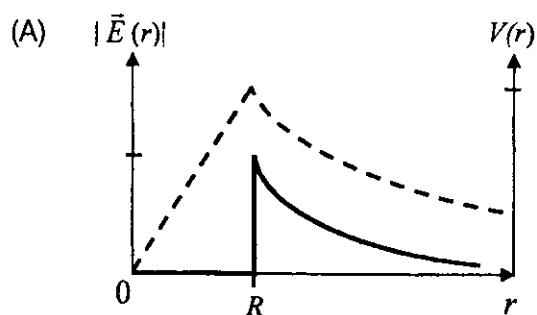
~~Handwritten scribble~~



3. Three very large plates of same area are kept parallel and close to each other. They are considered as ideal black surfaces and have very high thermal conductivity. The first and third plates are maintained at temperatures $2T$ and $3T$ respectively. The temperature of the middle (i.e. second) plate under steady state condition is

- (A) $\left(\frac{65}{2}\right)^{\frac{1}{4}} T$ (B) $\left(\frac{97}{4}\right)^{\frac{1}{4}} T$ (C) $\left(\frac{97}{2}\right)^{\frac{1}{4}} T$ (D) $(97)^{\frac{1}{4}} T$

4. Consider a thin spherical shell of radius R with its centre at the origin, carrying uniform positive surface charge density. The variation of the magnitude of the electric field $|\vec{E}(r)|$ and the electric potential $V(r)$ with the distance r from the centre, is best represented by which graph ?



Space for Rough Work

SATP

$2T \leftarrow \rightarrow 3T$
 $(2T)^4 = (3T)^4$
 $2^4 T^4 = 3^4 T^4$
 $16 T^4 = 81 T^4$
 $\frac{16}{81} T = T$

$\frac{2^4 \times 2^4 T^4}{2^4 T^4} = \frac{16}{1} T = 16 T$

$\frac{(16)^{\frac{1}{4}} T}{(81)^{\frac{1}{4}} T} = \frac{2}{3} T$

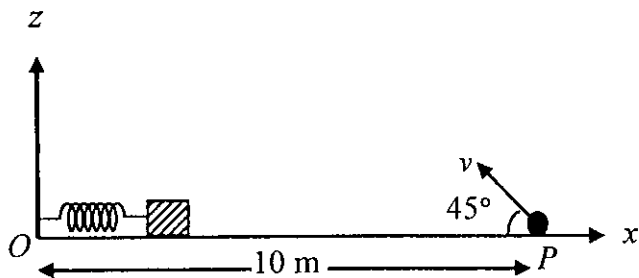


5. In the determination of Young's modulus $\left(Y = \frac{4MLg}{\pi d^2} \right)$ by using Searle's method, a wire of length $L = 2$ m and diameter $d = 0.5$ mm is used. For a load $M = 2.5$ kg, an extension $l = 0.25$ mm in the length of the wire is observed. Quantities d and l are measured using a screw gauge and a micrometer, respectively. They have the same pitch of 0.5 mm. The number of divisions on their circular scale is 100. The contributions to the maximum probable error of the Y measurement
- (A) due to the errors in the measurements of d and l are the same.
 - (B) due to the error in the measurement of d is twice that due to the error in the measurement of l .
 - (C) due to the error in the measurement of l is twice that due to the error in the measurement of d .
 - (D) due to the error in the measurement of d is four times that due to the error in the measurement of l .

Space for Rough Work



6. A small block is connected to one end of a massless spring of un-stretched length 4.9 m. The other end of the spring (see the figure) is fixed. The system lies on a horizontal frictionless surface. The block is stretched by 0.2 m and released from rest at $t = 0$. It then executes simple harmonic motion with angular frequency $\omega = \frac{\pi}{3}$ rad/s. Simultaneously at $t = 0$, a small pebble is projected with speed v from point P at an angle of 45° as shown in the figure. Point P is at a horizontal distance of 10 m from O . If the pebble hits the block at $t = 1$ s, the value of v is (take $g = 10 \text{ m/s}^2$)



- (A) $\sqrt{50}$ m/s (B) $\sqrt{51}$ m/s (C) $\sqrt{52}$ m/s (D) $\sqrt{53}$ m/s

7. Young's double slit experiment is carried out by using green, red and blue light, one color at a time. The fringe widths recorded are β_G , β_R and β_B , respectively. Then,

- (A) $\beta_G > \beta_B > \beta_R$ (B) $\beta_B > \beta_G > \beta_R$ (C) $\beta_R > \beta_B > \beta_G$ (D) $\beta_R > \beta_G > \beta_B$

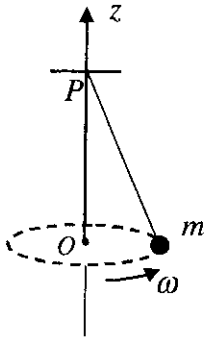
Space for Rough Work

Handwritten notes for Question 7:

- $\frac{\Delta x}{d}$
- $\Delta x \propto d$ (boxed)
- $\Delta x \propto \lambda$
- VIBGYOR
- $\beta_B > \beta_R$



8. A small mass m is attached to a massless string whose other end is fixed at P as shown in the figure. The mass is undergoing circular motion in the x - y plane with centre at O and constant angular speed ω . If the angular momentum of the system, calculated about O and P are denoted by \vec{L}_O and \vec{L}_P respectively, then



- (A) \vec{L}_O and \vec{L}_P **do not** vary with time.
 (B) \vec{L}_O varies with time while \vec{L}_P remains constant.
 (C) \vec{L}_O remains constant while \vec{L}_P varies with time.
 (D) \vec{L}_O and \vec{L}_P both vary with time.

$\frac{v_{rms\ He}}{v_{rms\ Ar}} = \sqrt{\frac{40}{4}} = 2$
 $M = 4\text{ amu}$
 $M = 40$

9. A mixture of 2 moles of helium gas (atomic mass = 4 amu) and 1 mole of argon gas (atomic mass = 40 amu) is kept at 300 K in a container. The ratio of the rms speeds

$$\left(\frac{v_{rms}(\text{helium})}{v_{rms}(\text{argon})} \right) \text{ is}$$

- (A) 0.32 (B) 0.45 (C) 2.24 (D) 3.16

10. Two large vertical and parallel metal plates having a separation of 1 cm are connected to a DC voltage source of potential difference X . A proton is released at rest midway between the two plates. It is found to move at 45° to the vertical JUST after release. Then X is nearly

- (A) 1×10^{-5} V (B) 1×10^{-7} V (C) 1×10^{-9} V (D) 1×10^{-10} V

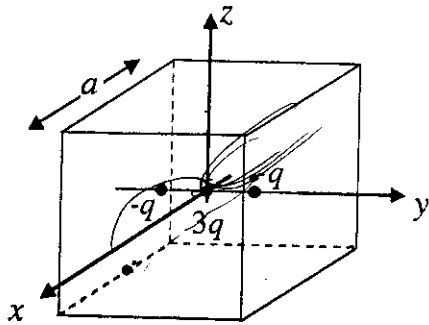
Space for Rough Work



SECTION II : Multiple Correct Answer(s) Type

This section contains 5 multiple choice questions. Each question has four choices (A), (B), (C) and (D) out of which ONE or MORE are correct.

11. A cubical region of side a has its centre at the origin. It encloses three fixed point charges, $-q$ at $(0, -a/4, 0)$, $+3q$ at $(0, 0, 0)$ and $-q$ at $(0, +a/4, 0)$. Choose the correct option(s).



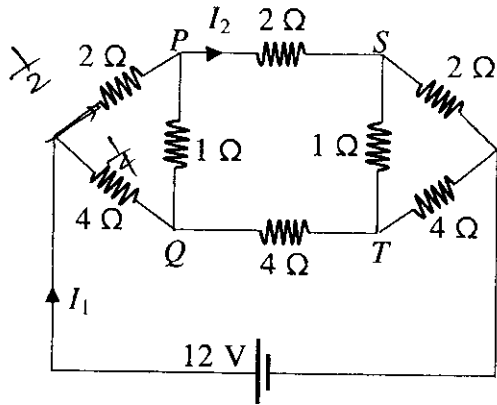
$$\frac{q}{\omega} \oint \vec{E} \cdot d\vec{s} = \frac{q}{\omega}$$

- (A) The net electric flux crossing the plane $x = +a/2$ is equal to the net electric flux crossing the plane $x = -a/2$.
- (B) The net electric flux crossing the plane $y = +a/2$ is more than the net electric flux crossing the plane $y = -a/2$.
- (C) The net electric flux crossing the entire region is $\frac{q}{\epsilon_0}$.
- (D) The net electric flux crossing the plane $z = +a/2$ is equal to the net electric flux crossing the plane $x = +a/2$.

Space for Rough Work



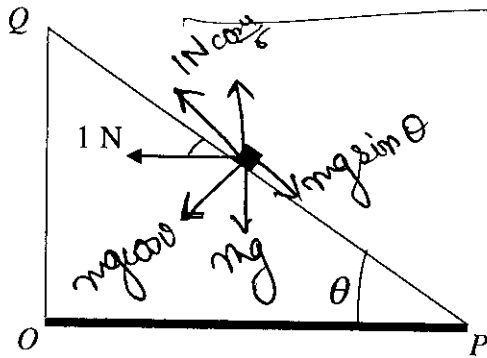
12. For the resistance network shown in the figure, choose the correct option(s).



$V = IR$
 $I = \frac{1}{R}$
 $I_1 : I_2 \quad \frac{1}{2} : \frac{1}{4}$

- (A) The current through PQ is zero.
- (B) $I_1 = 3A$.
- (C) The potential at S is less than that at Q.
- (D) $I_2 = 2A$.

13. A small block of mass of 0.1 kg lies on a fixed inclined plane PQ which makes an angle θ with the horizontal. A horizontal force of 1 N acts on the block through its center of mass as shown in the figure. The block remains stationary if (take $g = 10 \text{ m/s}^2$)



- (A) $\theta = 45^\circ$.
- (B) $\theta > 45^\circ$ and a frictional force acts on the block towards P.
- (C) $\theta > 45^\circ$ and a frictional force acts on the block towards Q.
- (D) $\theta < 45^\circ$ and a frictional force acts on the block towards Q.

Space for Rough Work

$mg \sin \theta$
 $mg \cos \theta = ma$
 $mg \sin \theta - \mu mg \cos \theta = \frac{1}{\sqrt{2}} mg$
 $\frac{mg}{\sqrt{2}} - \frac{mg}{\sqrt{2}} = \frac{1}{\sqrt{2}} mg$
 $\frac{\sqrt{3} + 1}{2} mg \sin \theta + \frac{mg \sqrt{3}}{2} = \frac{mg}{\sqrt{2}}$
 $\frac{\sqrt{3} + 1}{2} \sin \theta + \frac{\sqrt{3}}{2} = \frac{1}{\sqrt{2}}$
 $\frac{\sqrt{3} + 1}{2} \sin \theta = \frac{1}{\sqrt{2}} - \frac{\sqrt{3}}{2}$
 $\sin \theta = \frac{\sqrt{3} + 1}{2} \left(\frac{1}{\sqrt{2}} - \frac{\sqrt{3}}{2} \right)$
 $\sin \theta = \frac{\sqrt{3} + 1}{2} \left(\frac{1 - \sqrt{6}}{2\sqrt{2}} \right)$
 $\sin \theta = \frac{(\sqrt{3} + 1)(1 - \sqrt{6})}{4\sqrt{2}}$
 $\sin \theta = \frac{\sqrt{3} - \sqrt{18} + 1 - \sqrt{6}}{4\sqrt{2}}$
 $\sin \theta = \frac{\sqrt{3} - 3 + 1 - \sqrt{6}}{4\sqrt{2}}$
 $\sin \theta = \frac{\sqrt{3} - 2 - \sqrt{6}}{4\sqrt{2}}$
 $\sin \theta = \frac{\sqrt{3} - 2 - \sqrt{6}}{4\sqrt{2}}$
 $\sin \theta = \frac{\sqrt{3} - 2 - \sqrt{6}}{4\sqrt{2}}$
 $\sin \theta = \frac{\sqrt{3} - 2 - \sqrt{6}}{4\sqrt{2}}$

14. Consider the motion of a positive point charge in a region where there are simultaneous uniform electric and magnetic fields $\vec{E} = E_0 \hat{j}$ and $\vec{B} = B_0 \hat{j}$. At time $t = 0$, this charge has velocity \vec{v} in the x - y plane, making an angle θ with the x -axis. Which of the following option(s) is(are) correct for time $t > 0$?
- (A) If $\theta = 0^\circ$, the charge moves in a circular path in the x - z plane.
 - (B) If $\theta = 0^\circ$, the charge undergoes helical motion with constant pitch along the y -axis.
 - (C) If $\theta = 10^\circ$, the charge undergoes helical motion with its pitch increasing with time, along the y -axis.
 - (D) If $\theta = 90^\circ$, the charge undergoes linear but accelerated motion along the y -axis.
15. A person blows into open-end of a long pipe. As a result, a high-pressure pulse of air travels down the pipe. When this pulse reaches the other end of the pipe,
- (A) a high-pressure pulse starts traveling up the pipe, if the other end of the pipe is open.
 - (B) a low-pressure pulse starts traveling up the pipe, if the other end of the pipe is open.
 - (C) a low-pressure pulse starts traveling up the pipe, if the other end of the pipe is closed.
 - (D) a high-pressure pulse starts traveling up the pipe, if the other end of the pipe is closed.

Space for Rough Work

Handwritten notes and equations:

$$r = B_0 v$$

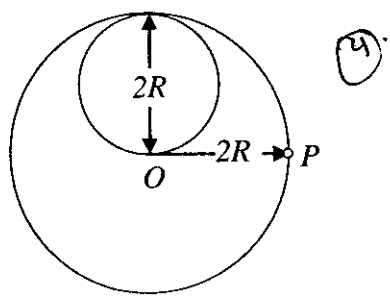
$$B_0 v = \frac{\mu_0 I}{r}$$

$$r B_0 v = \mu_0 I$$

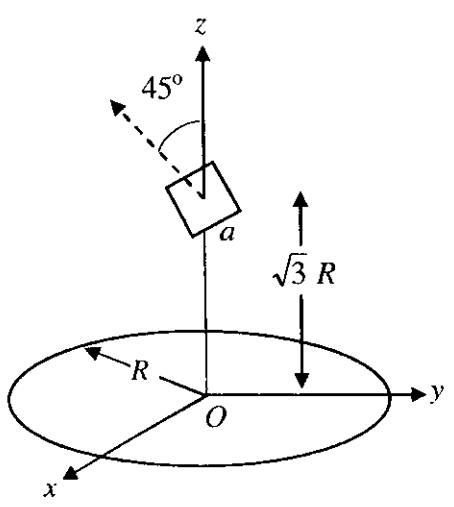
$$r = \frac{\mu_0 I}{B_0 v}$$



18. A lamina is made by removing a small disc of diameter $2R$ from a bigger disc of uniform mass density and radius $2R$, as shown in the figure. The moment of inertia of this lamina about axes passing through O and P is I_O and I_P , respectively. Both these axes are perpendicular to the plane of the lamina. The ratio $\frac{I_P}{I_O}$ to the nearest integer is



19. A circular wire loop of radius R is placed in the x - y plane centered at the origin O . A square loop of side a ($a \ll R$) having two turns is placed with its center at $z = \sqrt{3} R$ along the axis of the circular wire loop, as shown in figure. The plane of the square loop makes an angle of 45° with respect to the z -axis. If the mutual inductance between the loops is given by $\frac{\mu_0 a^2}{2^{p/2} R}$, then the value of p is



$Q = 120 e$

20. A proton is fired from very far away towards a nucleus with charge $Q = 120 e$, where e is the electronic charge. It makes a closest approach of 10 fm to the nucleus. The de Broglie wavelength (in units of fm) of the proton at its start is: (take the proton mass, $m_p = (5/3) \times 10^{-27} \text{ kg}$; $h/e = 4.2 \times 10^{-15} \text{ J.s/C}$; $\frac{1}{4\pi\epsilon_0} = 9 \times 10^9 \text{ m/F}$; $1 \text{ fm} = 10^{-15} \text{ m}$)

Space for Rough Work



PART II : CHEMISTRY

SECTION I : Single Correct Answer Type

This section contains 10 multiple choice questions. Each question has four choices (A), (B), (C) and (D) out of which **ONLY ONE** is correct.

21. As per IUPAC nomenclature, the name of the complex $[\text{Co}(\text{H}_2\text{O})_4(\text{NH}_3)_2]\text{Cl}_3$ is

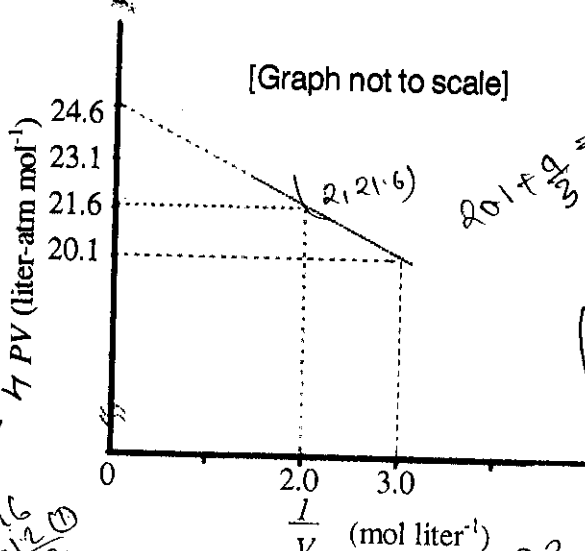
- (A) Tetraaquadiammincobalt (III) chloride
- (B) Tetraaquadiammincobalt (III) chloride
- (C) Diaminetetraaquacobalt (III) chloride
- (D) Diamminetetraaquacobalt (III) chloride

+3

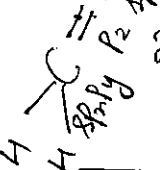

22. In allene (C_3H_4), the type(s) of hybridisation of the carbon atoms is (are)

- (A) sp and sp^3
- (B) sp and sp^2
- (C) only sp^2
- (D) sp^2 and sp^3

23. For one mole of a van der Waals gas when $b = 0$ and $T = 300 \text{ K}$, the PV vs. $1/V$ plot is shown below. The value of the van der Waals constant a ($\text{atm.liter}^2 \text{ mol}^{-2}$) is



sp^3



$20.1 + \frac{a}{3} = 21.6$
 $\frac{a}{3} = 1.5$
 $a = 4.5$

$(P + \frac{a}{V^2})(V - nb) = nRT$
 $(P + \frac{a}{V^2}) = nRT$
 $(P + \frac{a}{V^2}) = 300R$

$\text{C} = \text{C} = \text{C}$
 sp^2 sp^2 sp^2

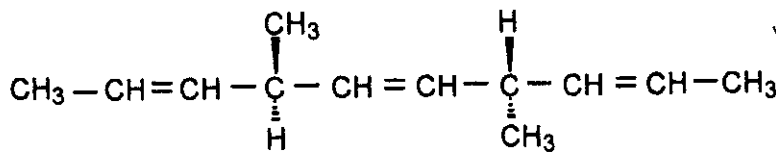
Space for Rough Work

$(21.6 + \frac{a}{2}) = 300R$
 $\frac{a}{2} = 300R - 21.6$
 $\frac{a}{2} = \frac{300}{12} - 21.6$
 $\frac{a}{2} = 25 - 21.6$
 $\frac{a}{2} = 3.4$
 $a = 6.8$

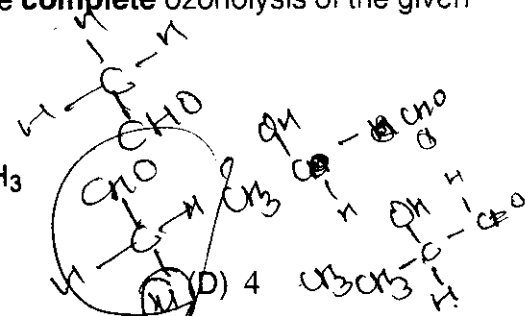
$(P + \frac{a}{V^2}) = 300R$
 $(\frac{20.1}{3} + \frac{a}{9}) = 300R$
 $\frac{20.1}{3} + \frac{a}{9} = 300R$
 $6.7 + \frac{a}{9} = 300R$
 $\frac{a}{9} = 300R - 6.7$
 $\frac{a}{9} = 293.3$
 $a = 2639.7$



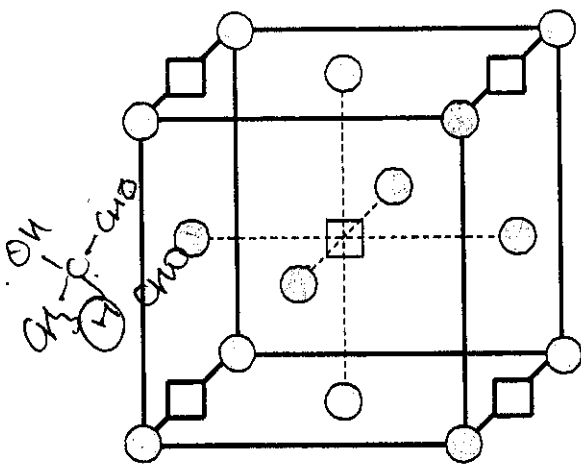
24. The number of optically active products obtained from the **complete** ozonolysis of the given compound is



- (A) 0 (B) 1 (C) 2 (D) 4

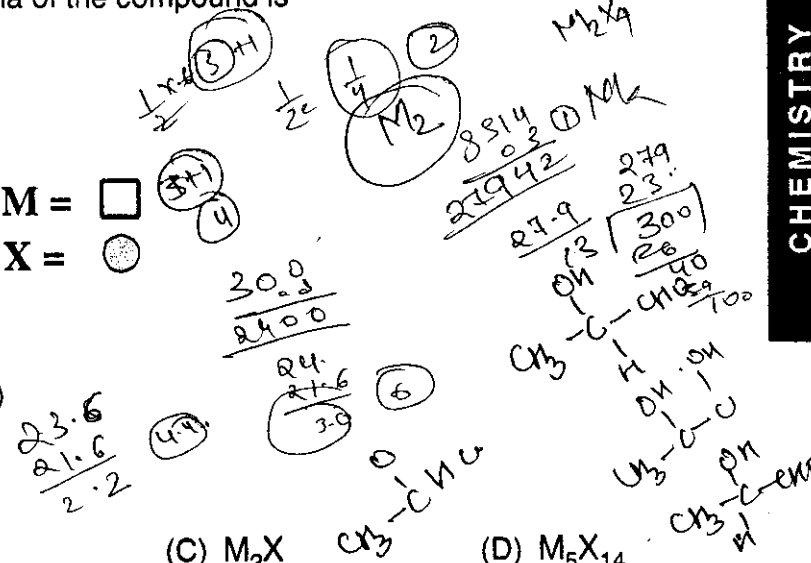


25. A compound M_pX_q has cubic close packing (ccp) arrangement of X. Its unit cell structure is shown below. The empirical formula of the compound is

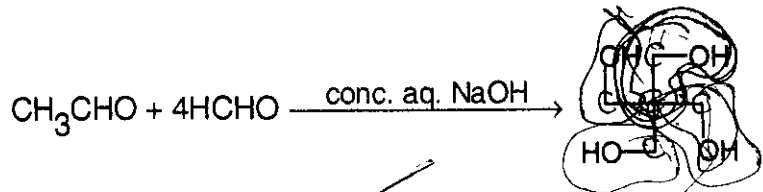


M =
 X =

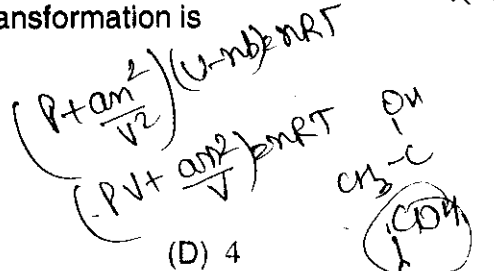
- (A) MX (B) MX_2 (C) M_2X (D) M_5X_{14}



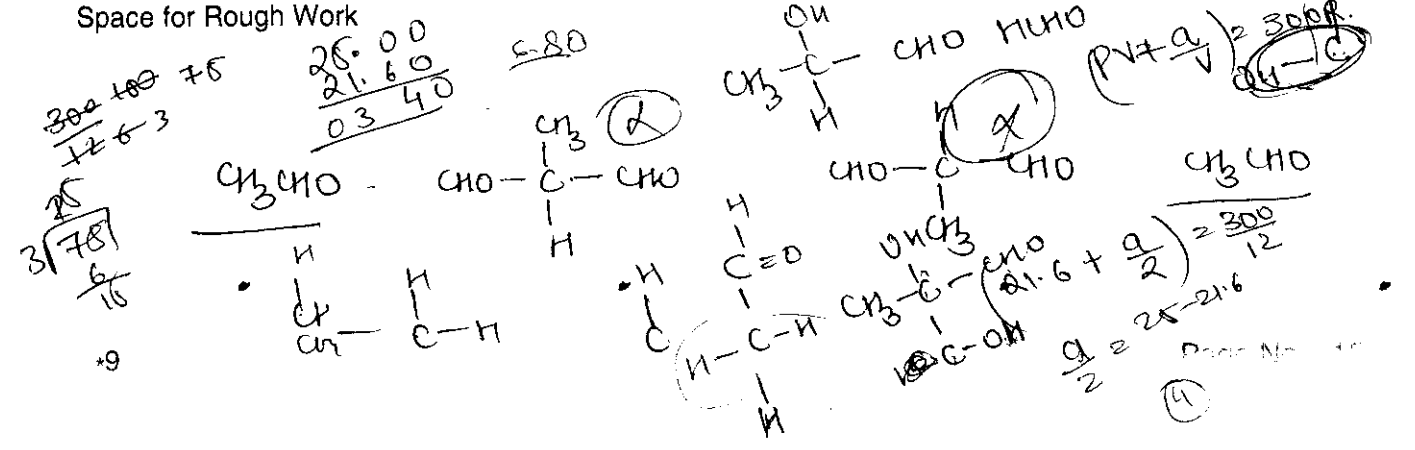
26. The number of aldol reaction(s) that occurs in the given transformation is



- (A) 1 (B) 2 (C) 3 (D) 4



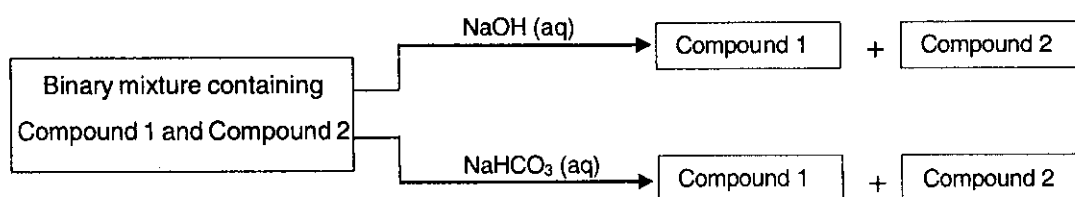
Space for Rough Work



SECTION II : Multiple Correct Answer(s) Type

This section contains **5 multiple choice questions**. Each question has four choices (A), (B), (C) and (D) out of which **ONE or MORE** are correct.

31. Identify the binary mixture(s) that can be separated into individual compounds, by differential extraction, as shown in the given scheme.

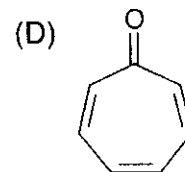
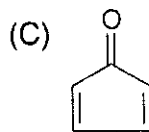
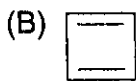
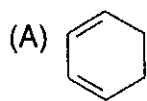


- (A) C_6H_5OH and C_6H_5COOH (B) C_6H_5COOH and $C_6H_5CH_2OH$
 (C) $C_6H_5CH_2OH$ and C_6H_5OH (D) $C_6H_5CH_2OH$ and $C_6H_5CH_2COOH$

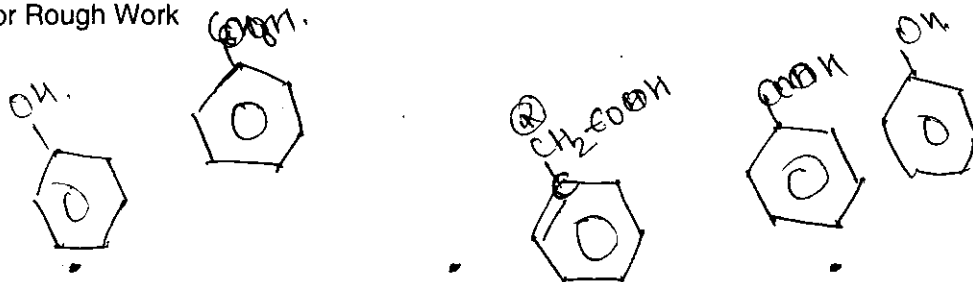
32. Choose the correct reason(s) for the stability of the **lyophobic** colloidal particles.

- (A) Preferential adsorption of ions on their surface from the solution
 (B) Preferential adsorption of solvent on their surface from the solution
 (C) Attraction between different particles having opposite charges on their surface
 (D) Potential difference between the fixed layer and the diffused layer of opposite charges around the colloidal particles

33. Which of the following molecules, in pure form, is (are) **unstable** at room temperature ?



Space for Rough Work



CHEMISTRY

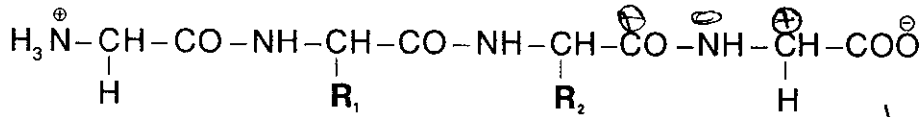


Handwritten scribbles and numbers at the top left.

SECTION III : Integer Answer Type

This section contains 5 questions. The answer to each question is a single digit integer, ranging from 0 to 9 (both inclusive).

36. The substituents R₁ and R₂ for nine peptides are listed in the table given below. How many of these peptides are positively charged at pH = 7.0 ?



Handwritten notes: Na, Mg, Fe, Al, Si, P

Peptide	R ₁	R ₂
I	H	H
II	H	CH ₃
III	CH ₂ COOH	H
IV	CH ₂ CONH ₂	(CH ₂) ₄ NH ₂
V	CH ₂ CONH ₂	CH ₂ CONH ₂
VI	(CH ₂) ₄ NH ₂	(CH ₂) ₄ NH ₂
VII	CH ₂ COOH	CH ₂ CONH ₂
VIII	CH ₂ OH	(CH ₂) ₄ NH ₂
IX	(CH ₂) ₄ NH ₂	CH ₃

Handwritten calculations and notes:

26

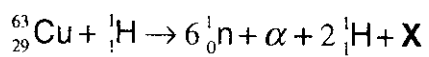
4s² 3d⁶

8

Li BBGNOF Ne

21 + 18 = 39

37. The periodic table consists of 18 groups. An isotope of copper, on bombardment with protons, undergoes a nuclear reaction yielding element X as shown below. To which group, element X belongs in the periodic table ?



Handwritten notes:

6

6 0 n 4 2 H 2

Space for Rough Work

Handwritten calculations:

52

26

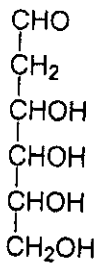
64

30

64 - 12 = 52

30 - 4 = 26

38. When the following aldohexose exists in its D-configuration, the total number of stereoisomers in its pyranose form is



Handwritten calculations for Q38:

- $\log_2 \left(\frac{m}{n}\right) \times 2^x$
- $0.9 - 2x$
- $\frac{0.30}{0.60} = \frac{1}{2}$
- $\frac{0.30}{0.90}$
- $\frac{1}{2} = \frac{\log(8/9)}{\log(10/9)}$
- $\log 8$
- $\log(2^9) = \log 8$
- $\log(m/n) = (\log 2 + \log 9) - \log 10$
- $3 \times 0.30 - \{ \log(6/11) \}$
- $0.90 - (\log 6)$

39. 29.2% (w/w) HCl stock solution has a density of 1.25 g mL^{-1} . The molecular weight of HCl is 36.5 g mol^{-1} . The volume (mL) of stock solution required to prepare a 200 mL solution of 0.4 M HCl is

Handwritten calculations for Q39:

- $\frac{0.30}{0.41}$
- $\frac{1230}{100}$
- 0.90
- 0.84
- 6.38
- 15

40. An organic compound undergoes first-order decomposition. The time taken for its decomposition to 1/8 and 1/10 of its initial concentration are $t_{1/8}$ and $t_{1/10}$ respectively.

What is the value of $\frac{[t_{1/8}]}{[t_{1/10}]} \times 10$? (take $\log_{10} 2 = 0.3$)

Handwritten calculations for Q40:

- 0.54
- 0.6

Space for Rough Work

Handwritten rough work for Q39 and Q40:

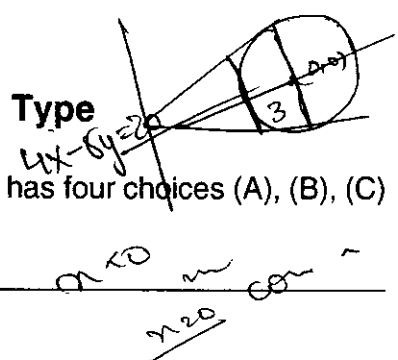
- $\frac{\text{weight of solute}}{\text{weight of sol}} = 29.2\%$
- $29.2 = w \times \frac{36.5}{8}$
- $d = \frac{m}{V}$
- $29.2 = 1.25 \times V$
- $V = \frac{29.2}{1.25}$
- $d = 1.25 \text{ g/mL}$
- $M = 36.5 \text{ g/mol}$
- $\frac{C_0 - C}{C} = \frac{C_0 - \frac{C_0}{8}}{\frac{C_0}{8}}$
- $\frac{7C_0}{8} = 200 \text{ mL of } 0.4 \text{ M}$
- $Mol = \frac{n}{36.5}$
- $0.4 \text{ M} = \frac{n}{36.5 \times 200}$
- $n = 2920$
- $\frac{730}{730} = \frac{2 \times 10}{63}$
- $\frac{730}{2920} = \frac{1}{4}$
- $\log \left[\frac{8}{9} \right]$
- $K = \frac{2.303}{t_{1/8}} \log \left[\frac{C_0}{7C_0/8} \right]$
- $k_{1/8} = \frac{2.303}{t_{1/8}} \log \left[\frac{8}{7} \right]$
- $k_{1/10} = \frac{2.303}{t_{1/10}} \log \left[\frac{10}{9} \right]$
- $\frac{k_{1/8}}{k_{1/10}} = \log \left[\frac{8-10}{7-9} \right]$
- $\Rightarrow \frac{72-70}{63}$



PART III : MATHEMATICS

SECTION I : Single Correct Answer Type

This section contains 10 multiple choice questions. Each question has four choices (A), (B), (C) and (D) out of which **ONLY ONE** is correct.



41. The locus of the mid-point of the chord of contact of tangents drawn from points lying on the straight line $4x - 5y = 20$ to the circle $x^2 + y^2 = 9$ is
- (A) $20(x^2 + y^2) - 36x + 45y = 0$ (B) $20(x^2 + y^2) + 36x - 45y = 0$
 (C) $36(x^2 + y^2) - 20x + 45y = 0$ (D) $36(x^2 + y^2) + 20x - 45y = 0$

42. The total number of ways in which 5 balls of different colours can be distributed among 3 persons so that each person gets at least one ball is
- (A) 75 (B) 150 (C) 210 (D) 243

43. Let $f(x) = \begin{cases} x^2 \left| \cos \frac{\pi}{x} \right|, & x \neq 0 \\ 0, & x = 0 \end{cases}, x \in \mathbb{R},$

then f is

- (A) differentiable both at $x = 0$ and at $x = 2$
 (B) differentiable at $x = 0$ but not differentiable at $x = 2$
 (C) not differentiable at $x = 0$ but differentiable at $x = 2$
 (D) differentiable neither at $x = 0$ nor at $x = 2$

44. The function $f: [0, 3] \rightarrow [1, 29]$, defined by $f(x) = 2x^3 - 15x^2 + 36x + 1$, is
- (A) one-one and onto. (B) onto but not one-one.
 (C) one-one but not onto. (D) neither one-one nor onto.

Space for Rough Work

Handwritten rough work for question 44:

$2x^3 - 30x + 36$
 $6x^2 - 30x + 6 = 0$
 $x^2 - 5x + 1 = 0$
 $x^2 - 3x - 2x + 6 = 0$
 $x(x-3) - 2(x-3) = 0$
 $(x-3)(x-2) = 0$
 $x = 2, x = 3$

$\log \left[\frac{8}{7} \right]$
 $\log \left[\frac{10}{9} \right]$

$\log 8 - \log 7$
 $\log 10 - \log 9$

$2 \times 27 - 15 \times 9 + 36 \times 3 + 1$
 $54 - 135 + 108 + 1$
 108
 72
 163

$\frac{163}{72}$ Page No. : 21

MATHEMATICS



SECTION II : Multiple Correct Answer(s) Type

This section contains 5 multiple choice questions. Each question has four choices (A), (B), (C) and (D) out of which ONE or MORE are correct.

51. Let $\theta, \varphi \in [0, 2\pi]$ be such that

2 cos theta (1 - sin phi) = sin^2 theta (tan theta/2 + cot theta/2) cos phi - 1,

tan(2pi - theta) > 0 and -1 < sin theta < -sqrt(3)/2.

Then phi cannot satisfy

- (A) 0 < phi < pi/2 (B) pi/2 < phi < 4pi/3 (C) 4pi/3 < phi < 3pi/2 (D) 3pi/2 < phi < 2pi

52. Let S be the area of the region enclosed by y = e^-x^2, y = 0, x = 0, and x = 1. Then

- (A) S >= 1/e (B) S >= 1 - 1/e (C) S <= 1/4 (1 + 1/sqrt(e)) (D) S <= 1/sqrt(2) + 1/sqrt(e) (1 - 1/sqrt(2))

Space for Rough Work

Handwritten rough work including a graph of y = e^-x^2 from x=0 to x=1, various calculations, and notes like 'S = 1 - 1/e' and 'S = 1/e - 1'.

53. A ship is fitted with three engines E_1, E_2 and E_3 . The engines function independently of each other with respective probabilities $\frac{1}{2}, \frac{1}{4}$ and $\frac{1}{4}$. For the ship to be operational at least two of its engines must function. Let X denote the event that the ship is operational and let X_1, X_2 and X_3 denote respectively the events that the engines E_1, E_2 and E_3 are functioning. Which of the following is (are) true ?

- (A) $P[X_1^c | X] = \frac{3}{16}$
- (B) $P[\text{Exactly two engines of the ship are functioning} | X] = \frac{7}{8}$
- (C) $P[X | X_2] = \frac{5}{16}$
- (D) $P[X | X_1] = \frac{7}{16}$

54. Tangents are drawn to the hyperbola $\frac{x^2}{9} - \frac{y^2}{4} = 1$, parallel to the straight line $2x - y = 1$. The points of contact of the tangents on the hyperbola are

- (A) $(\frac{9}{2\sqrt{2}}, \frac{1}{\sqrt{2}})$
- (B) $(-\frac{9}{2\sqrt{2}}, -\frac{1}{\sqrt{2}})$
- (C) $(3\sqrt{3}, -2\sqrt{2})$
- (D) $(-3\sqrt{3}, 2\sqrt{2})$

55. If $y(x)$ satisfies the differential equation $y' - y \tan x = 2x \sec x$ and $y(0) = 0$, then

- (A) $y(\frac{\pi}{4}) = \frac{\pi^2}{8\sqrt{2}}$
- (B) $y'(\frac{\pi}{4}) = \frac{\pi^2}{18}$
- (C) $y(\frac{\pi}{3}) = \frac{\pi^2}{9}$
- (D) $y'(\frac{\pi}{3}) = \frac{4\pi}{3} + \frac{2\pi^2}{3\sqrt{3}}$

Space for Rough Work

$2 \sin \theta \cos \phi - 1 = 2 \cos \theta (1 - \sin \phi)$

$2 \sin \theta \cos \phi + 2 \cos \theta \sin \phi = 2 \cos \theta + 1$

$2 \sin \theta \cos \phi + \cos \theta \sin \phi = \frac{2 \cos \theta + 1}{2}$

$\sin(\theta + \phi) = \frac{2 \cos \theta + 1}{2}$

$\sin \phi = 1$

$\phi + \theta = \frac{\pi}{2}$

$\phi + \theta = \frac{\pi}{3}$

$\theta = \frac{\pi}{6}$

$\phi = \frac{\pi}{3}$

$\sin(\theta + \phi) = \frac{2 \cos \theta + 1}{2}$

$\sin(\frac{\pi}{2}) = \frac{2 \cos(\frac{\pi}{6}) + 1}{2}$

$1 = \frac{2(\frac{\sqrt{3}}{2}) + 1}{2}$

$1 = \frac{\sqrt{3} + 1}{2}$

$2 = \sqrt{3} + 1$

$1 = \sqrt{3}$

$\frac{1}{\sqrt{3}} = 1$

$\frac{1}{\sqrt{3}} = \frac{1}{\sqrt{3}}$

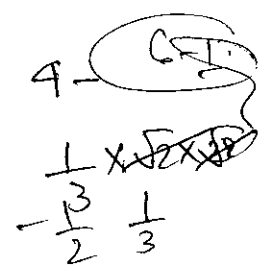


SECTION III : Integer Answer Type

This section contains 5 questions. The answer to each question is a single digit integer, ranging from 0 to 9 (both inclusive).

56. Let $f: \mathbb{R} \rightarrow \mathbb{R}$ be defined as $f(x) = |x| + |x^2 - 1|$. The total number of points at which f attains either a local maximum or a local minimum is 3

57. The value of $6 + \log_{\frac{3}{2}} \left(\frac{1}{3\sqrt{2}} \sqrt{4 - \frac{1}{3\sqrt{2}} \sqrt{4 - \frac{1}{3\sqrt{2}} \sqrt{4 - \frac{1}{3\sqrt{2}} \dots}}} \right)$ is



58. Let $p(x)$ be a real polynomial of least degree which has a local maximum at $x = 1$ and a local minimum at $x = 3$. If $p(1) = 6$ and $p(3) = 2$, then $p'(0)$ is 4

59. If \vec{a}, \vec{b} and \vec{c} are unit vectors satisfying $|\vec{a} - \vec{b}|^2 + |\vec{b} - \vec{c}|^2 + |\vec{c} - \vec{a}|^2 = 9$, then $|2\vec{a} + 5\vec{b} + 5\vec{c}|$ is 4

60. Let S be the focus of the parabola $y^2 = 8x$ and let PQ be the common chord of the circle $x^2 + y^2 - 2x - 4y = 0$ and the given parabola. The area of the triangle PQS is

Space for Rough Work

$p(1) = 6$

$a^2 + b^2 + (-2ab \cos \theta) + \dots$

$-2 \cos \theta \{ \times 3 \} = 9c$

$\cos \theta = -1$

$\cos \theta = \frac{1}{2}$

$\frac{2}{n} = 1$
 $n = \pm 1$

$n = +1$
 $n = -1$
 $n = 0$

$6 + \frac{1}{2} \log_3 \left(\frac{1}{3\sqrt{2}} \right)$

$4a^2 + 8b^2 + 20c^2 - 2ab \cos \theta - 2ca$

$\frac{p(3) - p(1)}{3-1} = \frac{2-6}{2} = -2$

4