



ENGLISH - HINDI

13-15

Code

Roll No.

रोल नम्बर

Booklet Number

पुस्तिका संख्या

152553

**SCHOLASTIC APTITUDE TEST**  
(For Students of Class X)

Time: 90 Minutes

Max. Marks: 100

**INSTRUCTIONS TO CANDIDATES**

Read the following instructions carefully before you open the question booklet.

1. Answers are to be given on a separate answer sheet.
2. There are 100 questions in this test. All are compulsory. The question numbers 1 to 40 belong to Sciences, 41 to 60 pertain to Mathematics and 61 to 100 are on Social Science subjects.
3. Please follow the instructions given on the answer sheet for marking the answers.
4. Write your seven-digit Roll Number as allotted to you in the admission card very clearly on the test-booklet and darken the appropriate circles on the answer sheet as per instructions given.
5. Write down and darken Booklet Number in the appropriate circles on the answer sheet as per instructions given.
6. Since the time allotted for this question paper is very limited and all questions carry equal marks, you should make the best use of it by not spending too much time on any one question.
7. Rough work can be done anywhere in the booklet but not on the answer sheet/loose paper.
8. Every correct answer will be awarded one mark.
9. **THERE WILL BE A DEDUCTION OF 1/3 MARKS FOR EVERY WRONG ANSWER AND NO MARKS WILL BE DEDUCTED FOR UNATTEMPTED QUESTIONS.**
10. Please return only the answer sheet to the invigilator after the test.
11. English version of the question paper will be considered as final in case of any dispute arising out of variation in translation.  
Please turn over the page and start answering immediately after you are asked to do so.

**शैक्षिक अभिक्रमता परीक्षा**

(कक्षा X के विद्यार्थियों के लिए)

समय: 90 मिनट

अधिकतम अंक: 100

**परीक्षार्थियों के लिए अनुदेश**

प्रश्न पुस्तिका खोलने से पहले, निम्न अनुदेशों को ध्यान से पढ़िए।

1. उक्त एक अलग उत्तर-पत्रक में देने है।
2. इस परीक्षा में 100 प्रश्न हैं। सभी प्रश्न अनिवार्य हैं। प्रश्न 1 से 40 विज्ञान, 41 से 60 गणित और 61 से 100 सामाजिक विज्ञान के विषयों पर आता है।
3. कृपया उत्तर चिह्नित करने के लिए उत्तर-पत्रक पर दिए गए अनुदेशों का अनुपालन कीजिए।
4. कृपया अपना सात-अंकीय रोल नंबर, जैसा कि आपने प्रवेश पत्र पर लिखा गया है, अनुदेशानुसार प्रश्न-पुस्तिका और उत्तर-पत्रक पर बहुत स्पष्ट रूप से लिखिए और दिए गए उपयुक्त चोखे को धारण कीजिए।
5. कृपया उत्तर-पत्रक में उपयुक्त खाने में निर्देशानुसार पुस्तिका संख्या लिखिए।
6. क्योंकि इस प्रश्न पत्र के लिए निर्धारित समय बहुत सीमित है, इसलिए इसका अधिकतम उपयोग कीजिए और किसी प्रश्न पर बहुत समय न लगाएँ।
7. एक कार्य पुस्तिका में नहीं भी किया जा सकता है, किन्तु उत्तर-पत्रक/अलग कागज पर नहीं।
8. प्रत्येक सही उत्तर का एक अंक प्रदान किया जाएगा।
9. प्रत्येक गलत उत्तर के लिए 1/3 अंक काटा जाएगा और किसी प्रश्न का उत्तर न देने पर उसके लिए कोई अंक नहीं काटा जाएगा।
10. कृपया परीक्षा के पश्चात केवल उत्तर-पत्रक ही परीक्षक को वापस कर दीजिए।
11. अनुसूचित विवरण में अंतर से उठे किसी भी विवाद की स्थिति में, प्रश्न पत्र के अंग्रेजी विवरण को निर्णायक माना जाएगा।  
कृपया पृष्ठ फलटिए और अपना कार्य तुरंत आरम्भ कीजिए।

NCERT 2016

The copyright of the contents of this booklet rests with the NCERT and no part of it should be used by anybody in any manner whatsoever without the prior permission of the NCERT. The items are prepared with best expertise. In case of any dispute the opinion of the experts appointed by NCERT will be final.

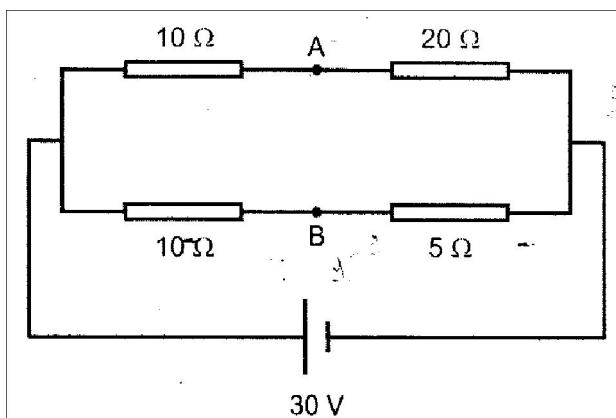
S/11NER/16-Sat-Hindi-1A

## NTSE STAGE\_II SCHOLASTIC APTITUDE TEST (SAT)-2016

- Suppose a mutant of a photosynthetic alga has dysfunctional mitochondria. It would affect its ability to perform  
(1) glycolysis (2) anaerobic respiration (3) aerobic respiration (4) photosynthesis
- Cow has a special stomach as compared to that of a lion in order to :  
(1) absorb food in better manner (2) digest cellulose present in the food  
(3) assimilate food in a better way (4) absorb large amount of water
- When touched, the leaflets of Touch-me-not plant are closed. Closing of leaflets starts from the point of contact to the leaflets away. The leaflets are closed due to :  
(1) change in turgor pressure (2) specialized proteins  
(3) growth hormone retardation (4) capillary action
- Pancreas is composed of :  
(1) Only exocrine cells (2) Only endocrine cell  
(3) Both endocrine and exocrine cells (4) Nephrons
- The human embryo gets nutrition from the mother blood with the help of a special organ called :  
(1) Zygote (2) Ovary (3) Oviduct (4) Placenta
- Hormones produced in one part of the organism reach the distantly located target via :  
(1) muscles (2) bone (3) cartilage (4) blood
- Which of the following are characteristic feature of cells of meristematic tissue ?  
(1) Actively dividing cells with dense cytoplasm thick cell wall and prominent nuclei  
(2) Actively dividing cells with dense cytoplasm, thin cell wall and no vacuoles  
(3) Actively dividing cells with little cytoplasm, thin cell wall and prominent nuclei  
(4) Actively dividing cells with thin cytoplasm, thin cell wall and no vacuoles.
- Which one of the following animals is different from other in not having the paired gill pouches ?  
(1) Whale (2) Water snake (3) Star fish (4) Sea horse
- In the symbiotic relationship between a bacterium and a root of legume the :  
(1) bacteria provide  $N_2$  and the plant roots provide Carbon  
(2) roots provide  $NH_4$  and bacteria provide Carbon  
(3) bacteria provide  $NH_4$  and the roots provide Carbon  
(4) bacteria provide  $N_2$  and the roots provide  $NH_4$
- Which of the following is an result of biological magnification :  
(1) Top level predators may be harmed by toxic chemicals in environment.  
(2) Increase in carbon dioxide  
(3) The green-house effect will be most significance at the poles  
(4) Energy is lost at each tropic level of a food chain
- Which one of the following signifies *ex situ* conservation ?  
(1) National parks and Biosphere habitats  
(2) Wild animal in their natural habitats  
(3) Inhabitants of natural ecosystems  
(4) Conservation methods practiced in Zoo and Botanical garden
- What is the main reason for increase in temperature in a glass house:  
(1) Sunlight is completely absorbed by plants in the glass house  
(2) Radiation fails to escape from the glass house completely  
(3) Plant do not utilize sunlight in a glass house  
(4) Plants produce heat inside the glass house

13. Match the items in column-I with those in column-II, and select the correct choice:
- | <b>Column-I</b>            | <b>Column-II</b>            |
|----------------------------|-----------------------------|
| A. Small pox               | I. Bacteria                 |
| B. Cholera                 | II. Virus                   |
| C. Malaria                 | III. Deficiency of minerals |
| D. Anaemia                 | IV. Female mosquito         |
| (1) A-IV, B-II, C-III, D-I | (2) A-II, B-I, C-IV, D-III  |
| (3) A-IV, B-III, C-II, D-I | (4) A-III, B-IV, C-I, D-II  |
14. In the experiment conducted by Mendel, RRyy (round green) and rrYY (wrinkled, yellow) seeds of pea plant were used. In the F<sub>2</sub> generation 240 progeny were produced, out of which 15 progeny had specific characteristics. What were the characteristics ?
- (1) round and green      (2) round and yellow      (3) wrinkle and yellow      (4) wrinkle and green
15. Total number of neutrons in five moles of water molecules is :
- (1)  $3.011 \times 10^{24}$       (2)  $2.409 \times 10^{25}$       (3)  $3.111 \times 10^{25}$       (4)  $2.711 \times 10^{25}$
16. The metal used to recover copper from an aqueous solution of copper sulphate is :
- (1) Na      (2) Ag      (3) Hg      (4) Fe
17. Four substance were thoroughly mixed with water separately to obtain mixtures A, B, C and D. Some of their properties give below :
- I. Path of a beam of light passing through it was visible in A, B and D but invisible in C.  
 II. On leaving undisturbed, the particles of the substance settle down in A but not in B, C and D.  
 III. The solute particles are visible to naked eye in A but invisible in B, C and D.
- Which of the following is correct about A, B, C and D ?
- (1) A, B and D are colloids. C is a solution  
 (2) A is a suspension. B and D are colloids. C is a solution  
 (3) A is a colloid. B, C and D are solutions.  
 (4) A is a suspension B, C and D are colloids
18. **Assertion (A)** : Aluminium foil cannot be used in  $\alpha$ -particle scattering experiment.  
**Reason (R)** : Aluminium is highly malleable metal.
- (1) Both A and R are correct. R is the correct reason for A.  
 (2) Both A and R are correct but R is not the correct reason for A.  
 (3) A is correct and R is incorrect.  
 (4) A is incorrect and R is correct.
19. Magnesium ribbon is rubbed with sand paper before making it to burn. The reason of rubbing the ribbon is to :
- (1) remove moisture condensed over the surface of ribbon.  
 (2) generate heat due to exothermic reaction  
 (3) remove magnesium oxide formed over the surface of magnesium.  
 (4) mix silicon from sand paper (silicon dioxide) with magnesium for lowering ignition temperature of the ribbon.
20. The reaction that differs from the rest of the reactions given is :
- (1) formation of calcium oxide from limestone  
 (2) formation of aluminium from aluminium oxide  
 (3) formation of sodium carbonate from sodium hydrogen carbonate  
 (4) formation of mercury from mercuric oxide
21. An element X reacts with dilute H<sub>2</sub>SO<sub>4</sub> as well as with NaOH to produce salt and H<sub>2</sub>(g). Hence, it may be concluded that :
- I. X is an electropositive element.  
 II. oxide of X is basic in nature.  
 III. oxide of X is acidic in nature.  
 IV. X is an electronegative element.
- (1) I, II, III      (2) IV, I, II      (3) III, IV, I      (4) II, III, IV

22. An element X has electronic configuration 2, 8, 1 and another element Y has electronic configuration 2, 8, 7. They form a compound Z. The property that is not exhibited by Z is  
 (1) It has high melting point.  
 (2) It is a good conductor of electricity in its pure solid state.  
 (3) It breaks into pieces when beaten with hammer.  
 (4) It is soluble in water
23. The compound containing both ionic and covalent bond is  
 (1)  $\text{AlBr}_3$  (2)  $\text{CaO}$  (3)  $\text{MgCl}_2$  (4)  $\text{NH}_4\text{Cl}$
24. The element that cannot be used as a reducing agent is  
 (1) carbon (2) aluminium (3) sulphur (4) sodium
25. Somebody wanted to calculate the number of moles of oxygen atoms comprising of  $9.033 \times 10^{23}$  number of its atoms. The person further thought to calculate its mass and to find the number of moles of hydrogen atoms required to combine completely with this amount of oxygen to form water. The number of moles of oxygen atoms, their mass (in grams) and the number of moles of hydrogen atoms are  
 (1) 1.5, 3 and 24 respectively (2) 15, 18 and 3 respectively  
 (3) 0.15, 27, 3 respectively (4) 1.5, 24 and 3 respectively
26. The molecular formula of carboxylic acid that differs from the rest is  
 (1)  $\text{C}_{13}\text{H}_{26}\text{O}_2$  (2)  $\text{C}_2\text{H}_4\text{O}_2$  (3)  $\text{C}_9\text{H}_{18}\text{O}_2$  (4)  $\text{C}_7\text{H}_{12}\text{O}_2$
27. Foam of soap always appears white as  
 (1) it contains large hydrocarbon chains.  
 (2) it absorbs red portion of the visible light  
 (3) it reflects light of all wavelengths.  
 (4) it has one hydrophobic end, which is insoluble in water.
28. In a neon gas discharge tube, every second  $4.8 \times 10^{18}$   $\text{Ne}^+$  ions move towards the right through a cross-section of the tube, while 'n' electrons move to the left in the same time. If the current in the tube is 1.12 amperes towards the right, n is equal to (given  $e = 1.6 \times 10^{-19}$  coulomb)  
 (1)  $1.8 \times 10^{18}$  (2)  $2.2 \times 10^{18}$  (3)  $2.4 \times 10^{19}$  (4)  $2.8 \times 10^{19}$
29. Four situations are given below-  
 I. An infinitely long wire carrying current  
 II. A rectangular loop carrying current  
 III. A solenoid of finite length carrying current  
 IV. A circular loop carrying current.  
 In which of the above cases will the magnetic field produced be like that of a bar magnet?  
 (1) I (2) I and III (3) Only III (4) Only IV
30. In the circuit diagram shown below,  $V_A$  and  $V_B$  are the potentials at points A and B respectively. Then,  $V_A - V_B$  is



- (1) -10V (2) -20V (3) 0V (4) 10V

31. Assertion (A) : Motion of a charged particle under the action of a magnetic field alone is always with constant speed.  
Reason (R) : The magnetic force does not have any component either along or opposite to the direction of motion of the charged particle  
(1) Both Assertion and Reason are true and the reason is the correct explanation of the assertion.  
(2) Both Assertion and Reason are true, but the reason is not the correct explanation of the assertion.  
(3) Assertion is a true statement, but Reason is false.  
(4) Both Assertion and Reason are false statements.
32. When a charged particle passes through an electric field, which among the following properties change?  
I. mass  
II. charge  
III. velocity  
IV. momentum  
(1) II & III                      (2) Only III                      (3) III & IV                      (4) I, III, & IV
33. A ray of light in air is incident on an equilateral glass prism at an angle  $\theta_i$  to the normal. After refraction, the light travelled parallel to the base of prism and emerged in air at an angle  $\theta_e$  to the normal. If the angle between the incident and the emergent rays is  $60^\circ$ , then the refractive index of glass with respect to air is  
(1) 1.33                      (2) 1.5                      (3) 1.73                      (4) 1.66
34. You are standing on the shore of a lake. You spot a fish swimming below the lake surface. You want to kill the fish first by throwing a spear and next, by pointing a high-power laser torch. How should you aim the spear and torch, respectively, from the options given below?  
I. above the apparent position of the fish  
II. below the apparent position of the fish  
III. directly at the apparent position of the fish  
(1) SPEAR : II ; LASER : III  
(2) SPEAR : I ; LASER : II  
(3) SPEAR : II ; LASER : II  
(4) SPEAR : III ; LASER : III
35. A beam of light coming from a rarer medium is partially reflected from the surface to a denser medium and partially refracted into the denser medium. If the reflected and the refracted rays are perpendicular to each other and the ratio of the refractive indices of denser and rarer medium is  $\sqrt{3}$ , the angle of refraction will be -  
(1)  $60^\circ$                       (2)  $30^\circ$                       (3)  $45^\circ$                       (4)  $41.5^\circ$
36. A person can see clearly only the objects situated in the range 50 cm to 300cm. He went to an Optometrist who prescribed him a lens of certain power to increase the maximum distance of his vision to infinity, i.e., it corrected the near-sightedness. However, upon using the prescribed lens the person discovered that the near point of his vision has shifted from 50 cm to a distance "d". What is the value of d ?  
(1) 60 cm                      (2) 100 cm                      (3) 40 cm                      (4) 500 cm
37. A ball of mass m is thrown from a height h with a speed v. For what initial direction of the ball will its speed on hitting the ground be maximum?  
(1) horizontally                      (2) vertically downwards  
(3) at an angle of  $45^\circ$  from the vertical in the downward direction  
(4) speed does not depend on the direction in which the ball is thrown
38. A beaker is filled with two non-mixing liquids. The lower liquid has density twice that of the upper one. A cylinder of height h floats with one-fourth of its height submerged in the lower liquid and half of its height submerged in the upper liquid. Another beaker is filled with the denser of the two liquids alone. If the same cylinder is kept in the second beaker, the height of the submerged position would be.  
(1) h                      (2)  $\frac{3h}{4}$                       (3)  $\frac{h}{2}$                       (4)  $\frac{h}{4}$

39. A spring-loaded toy sits at rest on horizontal frictionless surface. When the spring releases, the toy breaks into three equal-mass pieces A, B and C, which slide along the surface. Piece A moves off in the negative x-direction, while piece B moves off in the negative y-direction. Which of the three pieces is moving the fastest?  
 (1) A (2) B  
 (3) C (4) They move with identical speeds
40. A truck and a car of masses  $m_1$  and  $m_2$  respectively are moving with equal kinetic energies. Equal stopping forces are applied and they come to a halt after travelling further distances  $x_1$  and  $x_2$  respectively.  
 (1)  $x_1 = x_2$  (2)  $\frac{x_1}{x_2} = \frac{m_1}{m_2}$  (3)  $\frac{x_1}{x_2} = \sqrt{\frac{m_1}{m_2}}$  (4)  $\frac{x_1}{x_2} = \sqrt{\frac{m_2}{m_1}}$
41. On dividing a natural number by 13, the remainder is 3 and on dividing the same number by 21, the remainder is 11. If the number lies between 500 and 600, then the remainder on dividing the number by 19 is :  
 (1) 4 (2) 6 (3) 9 (4) 13
42. Expressing  $0.\overline{34} + 0.\overline{34}$  as a single decimal, we get  
 (1)  $0.\overline{6788}$  (2)  $0.\overline{689}$  (3)  $0.\overline{6878}$  (4)  $0.\overline{687}$
43. If the value of a quadratic polynomial  $p(x)$  is 0 only at  $x = -1$  and  $p(-2) = 2$ , then the value of  $p(2)$  is  
 (1) 18 (2) 9 (3) 6 (4) 3
44. The graphs of the equations  $x - y = 2$  and  $kx + y = 3$ , where  $k$  is a constant, intersect at the point  $(x, y)$  in the first quadrant, if and only if  $k$  is  
 (1) equal to  $-1$  (2) greater than  $-1$  (3) less than  $3/2$  (4) lying between  $-1$  and  $3/2$
45. If  $\alpha$  and  $\beta$  are the roots of the quadratic equation  $x^2 - 6x - 2 = 0$  and if  $a_n = \alpha^n - \beta^n$ , then the value of  $\frac{a_{10} - 2a_8}{2a_9}$   
 (1) 6.0 (2) 5.2 (3) 5.0 (4) 3.0
46. If  $S_1, S_2, S_3, \dots, S_r$  are the sum of first  $n$  terms of  $r$  arithmetic progression whose first terms are 1, 2, 3, ..... and whose common differences are 1, 3, 5, ..... respectively, then the value of  $S_1 + S_2 + S_3 + \dots + S_r$  is  
 (1)  $\frac{(nr - 1)(nr + 1)}{2}$  (2)  $\frac{(nr + 1)nr}{2}$   
 (3)  $\frac{(nr - 1)nr}{2}$  (4)  $\frac{n(nr + 1)}{2}$
47. A person walks towards a tower. Initially when he starts, angle of elevation of the top of tower is  $30^\circ$ . On travelling 20 metres towards the tower, the angle changes to  $60^\circ$ . How much more has he to travel to reach the tower ?  
 (1)  $10\sqrt{3}$  metres (2) 10 metres (3) 20 metres (4)  $\frac{10}{\sqrt{3}}$  metres

48. If  $\operatorname{cosec} x - \sin x = a$  and  $\operatorname{sec} x - \cos x = b$ , then :

(1)  $(a^2b)^{\frac{2}{3}} + (ab^2)^{\frac{2}{3}} = 1$

(2)  $(ab^2)^{\frac{2}{3}} + (a^2b^2)^{\frac{2}{3}} = 1$

(3)  $a^2 + b^2 = 1$

(4)  $b^2 - a^2 = 1$

49. A calf is tied a rope of length 12m at a corner of a rectangular field of the dimensions 35m × 25m. If the length of the rope is increased to 23 m, then the additional grassy area in which the calf can graze is :

(Take  $\pi = \frac{22}{7}$ )

(1) 280.0 m<sup>2</sup>

(2) 300.0 m<sup>2</sup>

(3) 302.5m<sup>2</sup>

(4) 312.5 m<sup>2</sup>

50. If Anish is moving along the boundary of a triangular field of sides 35 m, 53m and 66m and your are moving along the boundary of a circular field whose area is double the area of the triangular field, then

the radius of the circular field is (Take  $\pi = \frac{22}{7}$ ) :

(1)  $14\sqrt{3}$  m

(2)  $3\sqrt{14}$  m

(3)  $28\sqrt{3}$  m

(4)  $7\sqrt{3}$  m

51. A circular metallic sheet is divided into two parts in such a way that each part can be folded in to a cone. If the ratio of their curved surface areas is 1 :2, the the ratio of their volumes is :

(1) 1 : 8

(2) 1 :  $\sqrt{16}$

(3) 1 :  $\sqrt{10}$

(4) 2 : 3

52. A solid metallic block of volume one cubic metre is melted and recast into the form of a rectangular bar of length 9 metres having a square base. If the weight of the block is 90 kg and biggest cube is cut off from the bar, then the weight of the cube is :

(1)  $6\frac{1}{3}$  kg

(2)  $5\frac{2}{3}$  kg

(3)  $4\frac{2}{3}$  kg

(4)  $3\frac{1}{3}$  kg

53. Two circles with centres P and R touch each other externally at O. A line passing through O cuts the circles at T and S respectively. Then,

(1) PT and RS are of equal length

(2) PT and RS are perpendicular to each other

(3) PT and RS are intersecting

(4) PT and RS are parallel

54. If in a triangle ABC, D is the mid-point of side BC,  $\angle ADB = 45^\circ$  and  $\angle ACD = 30^\circ$  then  $\angle BAD$  and  $\angle ABC$  are respectively equal to :

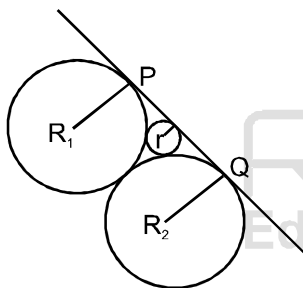
(1)  $15^\circ, 105^\circ$

(2)  $30^\circ, 105^\circ$

(3)  $30^\circ, 100^\circ$

(4)  $60^\circ, 100^\circ$

55. Three circles with radii  $R_1, R_2$  and  $r$  touch each other externally as shown in the adjoining figure. If PQ is their common tangent and  $R_1 > R_2$ , then which of the following relations is correct ?



(1)  $R_1 - R_2 = r$

(2)  $R_1 + R_2 = 2r$

(3)  $\frac{1}{R_1} + \frac{1}{R_2} = \frac{1}{r}$

(4)  $\frac{1}{\sqrt{R_1}} + \frac{1}{\sqrt{R_2}} = \frac{1}{\sqrt{r}}$

56. ABC is a triangle in which AB = 4 cm, BC = 5 cm and AC = 6 cm. A circle is drawn to touch side BC at P, side AB extended at Q and side AC extended at R. Then, AQ equals :

(1) 7.0 cm

(2) 7.5 cm

(3) 6.5 cm

(4) 15.0 cm

57. The centre of the circle passing through the points (6, -6), (3, -7) and (3, 3) is  
 (1) (3, 2)                      (2) (-3, -2)                      (3) (3, -2)                      (4) (-3, 2)
58. If the line segment joining (2, 3) and (-1, 2) is divided internally in the ratio 3: 4 by the graph of the equation  $x + 2y = k$ , the value of  $k$  is  
 (1)  $\frac{5}{7}$                       (2)  $\frac{31}{7}$                       (3)  $\frac{36}{7}$                       (4)  $\frac{41}{7}$
59. The mean of three positive numbers is 10 more than the smallest of the numbers and 15 less than the largest of the three. If the median of the three numbers is 5, then the mean of squares of the numbers is  
 (1)  $108\frac{2}{3}$                       (2)  $116\frac{2}{3}$                       (3)  $208\frac{1}{3}$                       (4)  $216\frac{2}{3}$

60. Three dice are thrown simultaneously. The probability of getting a total of at least 5 of the numbers appearing on their tops is :  
 (1)  $\frac{5}{54}$                       (2)  $\frac{7}{54}$                       (3)  $\frac{49}{54}$                       (4)  $\frac{53}{54}$

61. Match the following

A.	Livre	I.	A tax levied by the Church
B.	Manor	ii.	An estate of Lord's lands and his mansion
C.	Tithe	III.	Tax to be paid directly to the state
D.	Taille	IV.	Unit of currency

- (1) A-III, B-II, C-IV, D-I      (2) A-II, B-IV, C-I, D-III      (3) A-IV, B-II, C-III, D-I      (4) A-IV, B-I, C-II, D-III

62. Assertion (A) : After the 1905 revolution in Russia, Duma or the first elected consultative parliament came into existence.  
 Reason (R) : The power of Tsar was curbed by it  
 (1) Both A and R are true and R is the correct explanation of A  
 (2) Both A and R are true but R is not the correct explanation of A  
 (3) A is true and R is false  
 (4) A is false and R is true

63. Arrange in correct chronological order  
 I. Dawes Plan  
 II. Crashing of the Wall Street Exchange  
 III. Birth of Weimar Republic  
 IV. Creation of Gestapo (Secret State Police)

- (1) I, II, III, IV                      (2) III, II, I, IV  
 (3) IV, II, III, I                      (4) III, I, II, IV

64. **Assertion (A):** Cricket as a game has, a long and strong rural connection.  
**Reason (R):** The time limit of a match and vagueness about the size of Cricket ground is a result of the rhythms of village life.  
 (1) Both A and R are true and R is the correct explanation of A  
 (2) Both A and R are true but R is not the correct explanation of A  
 (3) A is true and R is false  
 (4) A is false and R is true



65. **Assertion (A):** In the 17th and 18th Century merchants from the towns in Europe started financing peasants and artisans in the country side for production for them.  
**Reason (R):** In the urban centres powerful crafts and trade guilds with monopoly rights restricted the entry of new people into the trade.  
 (1) Both A and R are True and R is correct explanation of A  
 (2) Both A and R are True but R is not correct explanation of A  
 (3) A is True and R is False  
 (4) A is False and R is True

66. **Assertion (A):** Colonial Forest Act changed the lives of villagers across the country  
**Reason (R):** Now the villagers could comfortably make use of the forest resources for everyday needs  
 (1) Both A and R are true and R is the correct explanation of A  
 (2) Both A and R are true but R is not the correct explanation of A  
 (3) A is true and R is false  
 (4) A is false and R is true

67. Arrange the following events of nineteenth century Europe in ascending order.  
 I. Unification of Germany  
 II. Beginning of Greek struggle for independence  
 III. Unification of Italy  
 IV. Vienna Peace Settlements  
 (1) III, I, II, IV                      (2) IV, II, III, I                      (3) I, III, IV, II                      (4) IV, II, I, III

68. Arrange the following events in descending order with regard to Nationalist Movement in Indo-China.  
 I. Creation of Indo-China union,  
 II. Formation of Communist Party in Vietnam  
 III. Paris Peace Treaty  
 IV. Declaration of independence by Ho Chi Minh  
 (1) III, IV, II, I                      (2) III, IV, I, 11                      (3) I, II, III, IV                      (4) I, II, IV, III

69. Find out the correct statements with regard to Rowlatt Act.  
 I. The Rowlatt Act was passed in 1919  
 II. The Act was passed by Imperial Legislative Council  
 III. The Act allowed detention of Political prisoners without trial for three years  
 IV. Protests against the Act led to Jallianwalla Bagh massacre in April 1920.  
 (1) Only II and III are correct                      (2) Only I and III are correct  
 (3) Only III and IV are correct                      (4) Only I and II are correct

70. **Assertion (A):** Population growth from the late eighteenth century, increased the demand for food grains in Britain  
**Reason (R):** 'Corn Laws' introduced by the government helped in -reducing the food prices.  
 (1) Both A and R are True and R is correct explanation of A  
 (2) Both A and R are True but R is not correct explanation of A  
 (3) A is True R is False  
 (4) A is False R is True

71. Match the following

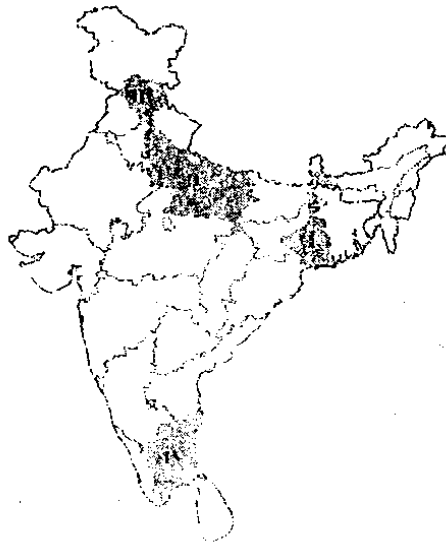
A.	Galley	I.	Old name of Tokyo
B.	Edo	II.	Contained six sheets of text and wood cut illustrations
C.	Vellum	III.	Metal Frame in which types are laid and the text composed
D.	Diamond Sutra	IV.	A parchment made from skin of animals

(1) A-III, B-I, C-II, D-IV  
 (3) A-I, B-III, C-IV, D-II

(2) A-I, B-III, C-II, D-IV  
 (4) A-III, B-I, C-IV, D-II

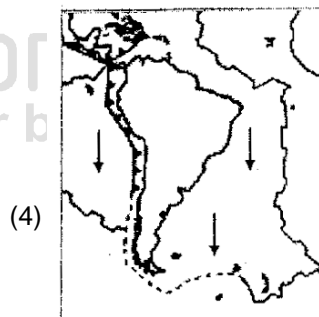
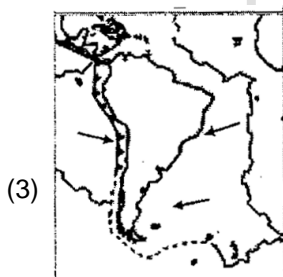
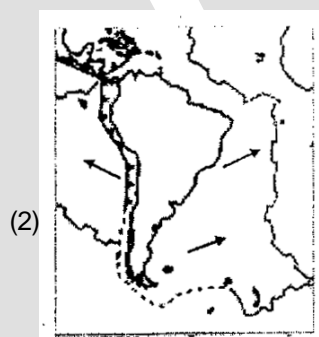
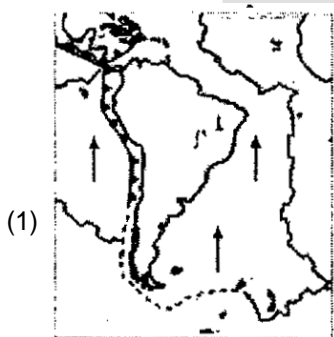
- 72.** Given below are statements regarding the course of development of Socialism in Europe. Arrange them in chronological sequence.
- I. Socialists took over the government in Russia through the October Revolution.  
II. Socialists and trade unionists formed a labour party in Britain and Socialist party in France.  
III. The Russian Social Democratic Worker's Party was founded by Socialists who respected Marx's ideas.  
IV. Socialists could not succeed in forming a government in Europe and governments continued to be run by conservatives, liberals and radicals.  
V. Second International was formed to coordinate the efforts of socialists throughout Europe.
- (1) V, III, II, IV, I (2) I, II, III, IV, V  
(3) V, II, III, I, IV (4) IV, V, III, I, II
- 73.** Hitler's ideology related to the geopolitical concept of Lebensraum, or living space implied:
- (1) There was no equality between people, but only a racial hierarchy  
(2) Only those species survived on earth that could adapt themselves to changing climatic conditions.  
(3) New territories had to be acquired for settlement to increase the area of the mother country.  
(4) An exclusive racial community of pure Germans to be created by physically eliminating all those who were seen as undesirable.
- 74.** During the mid-eighteenth century  
**Assertion (A):** Indian spinners and weavers were left without work and important centers of textile declined  
**Reason (R):** Large number of people began boycotting British cloth and started adopting khadi.
- (1) Both A and R are true and R is the correct explanation of A.  
(2) Both A and R are true but R is not the correct explanation of A.  
(3) A is true and R is false  
(4) A is false and R is true
- 75.** **Assertion (A):** Mahatma Gandhi called off the Civil Disobedience Movement and entered into a Pact with Irwin in 1931.  
**Reason (R):** Industrial workers in Sholapur attacked structures that symbolized British rule.
- (1) Both A and R are true and R is the correct explanation of A.  
(2) Both A and R are true but R is not the correct explanation of A.  
(3) A is true and R is false  
(4) A is false and R is true
- 76.** **Assertion (A):** The latitudinal extent influences the duration of day and night, as one moves from south to north of India.  
**Reason (R):** From Gujarat to Arunachal Pradesh there is a time lag of two hours.
- (1) Both A and R are true and R explains A  
(2) Both A and R are true but R does not explain A  
(3) A is true and R is false  
(4) A is false and R is true
- 77.** **Assertion (A):** Kharif crops are grown, with the onset of monsoon in different parts of India and harvested September-October.  
**Reason (R):** Availability of precipitation due to the western temperate cyclones helps in growing of these crops.
- (1) Both A and R are true and R explains A  
(2) Both A and R are true but R does not explain A  
(3) A is true and R is false  
(4) A is false and R is true

78. Arrange the shaded states shown on the map of India in descending order of population density and select the right code.



- (1) II, I, IV, III      (2) I, II, III, IV      (3) I, II, IV, III      (4) I, IV, II, III

79. Which one of the following figure is showing the correct direction of movement of the South America plate?



80. Based on the data (elevation and latitude) provided below which of the following tourist center is most probably indicated?  
 Elevation: 3500 meters -  
 Latitude: 34°N  
 (1) Shillong (2) Mussoorie (3) Kodaikanal (4) Leh

81. Keeping in mind the location of the following sanctuaries/ national parks of India, arrange them' from south to north:  
 (1) Periyar, (2) Dachiga.m, (3) gariska, (4) Kanha

82. Match list I (Revolution) with list II (Area) and select the correct answer using the codes given below :

List 1 (Revolution)		List II (Area)	
A.	Blue	I.	Dairy development
B.	Green	II.	Fisheries development
C.	White	III.	Food production
D.	Yellow	IV.	Silk production

- (1) A-II,B-III,C-IV,D-I (2) A-III,IV,C-II,D-I (3) A-IV, B-II,C-I,D-III (4) A-II,B-III,C-I,D-IV

83. Assertion (A) : The availability of water resources varies over space and time in India  
 Reason (R) : Water availability is governed by variations in seasonal annual precipitation although water scarcity is aggravated by over-exploitation and unequal access to water among different social groups.  
 (1) Both A and R are true and R explains A (2) Both A and R are true but R does not explain A  
 (3) A is true and R is false (4) A is false and R is true

84. Match list I (Type of Resources) with list II (Basis of Classification ) and select the codes given below :

List I (Type of Resources)		List II (Basis of Classification)	
A.	Biotic and abiotic	I.	Status of development
B.	Renewable and non-renewable	II.	Origin
C.	Individual, community, national and international	III.	Ownership
D.	Potential, developed, stock and reserves	IV.	Exhaustibility

- (1) A-II, B-I, C-III,D-IV (2) A-II,B-III,C-IV, D-I (3) A-II,B-IV, C-III,D-I (4) A-IV, B-II, C-III,D-I

85. Which one of the following is the correct order of rivers from north to south ?  
 (1) Ravi, Chenab, Jhelum, Indus (2) Indus, Jhelum, Chenab, Ravi  
 (3) Jhelum, Indus, Ravi, Chenab (4) Chenab, Ravi, Indus, Jhelum

86. Match list I (national Highways of India) with list II (Description) and select the codes given below :

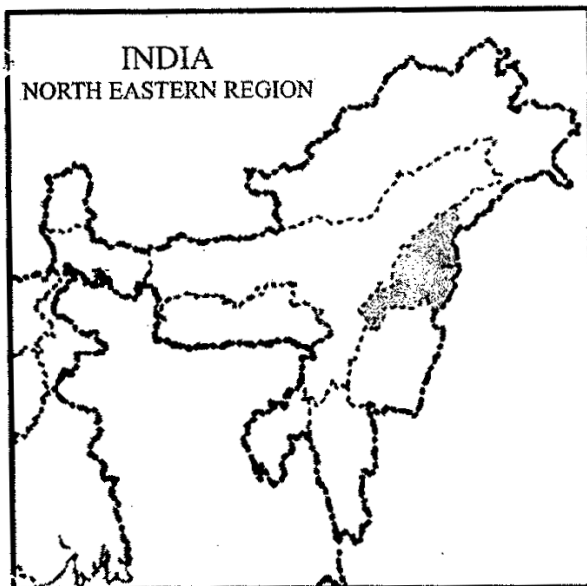
List I (National Highways of India)		List II (Description)	
A.	National Highway Number 1	I.	Covers most of Rajasthan
B.	National Highway Number 15	II.	Known as Sher Shah Suri Marg
C.	National Highway Number 7	III.	Connects Delhi and Mumbai
D.	National Highway Number 8	IV.	Is the longest National Highway

(1) A-IV, B-III, C-I, D-II      (2) A-I, B-II, C-IV, D-III      (3) A-II, B-I, C-IV, D-III      (4) A-I, B-III, C-II, D-IV

87. Which of the following statement is not true to the context of Mawsynram ?

- (1) It is considered as the wettest place on the earth
- (2) It possesses caves with stalagmites and stalactites
- (3) It is located Very close to Cherrapunji
- (4) It is located very close to the Myanmar border

88. Which one of the following facts about the shaded state shown below is incorrect ?



- (1) Terrace cultivation is widespread in the hill areas
- (2) The state is a major producer of uranium
- (3) Population density is well below the national average
- (4) More than 80 per cent of the area has forest as the land cover

89. The Tropic of Cancer passes through which of the following plateau ?  
 (1) Only Malwa (2) Only Chotanagpur  
 (3) Only Meghalaya (4) Both Malwa and Chotanagpur
90. Assertion (A) : The Coriolis force is responsible for deflecting winds towards the right in the northern hemisphere and towards the left in the southern hemisphere.  
 Reason (R) : The pressure and wind system of any area depend on the latitude and altitude of the place.  
 (1) Both A and R are true and R explains A  
 (2) Both A and R are true but R does not explain A  
 (3) A is true and R is false  
 (4) A is false and R is true
91. Which of the following arguments against prescribing educational qualification for elected representatives are true?  
 I. Educational qualification will deprive illiterate citizens of the right to contest elections.  
 II. Relevant qualification for being elected representatives is not education but ability to address people's problems.  
 III. Educated elected representatives keep distance from the common people.  
 IV. It is easier for the educated elected representatives to use power for personal gains.  
 V. It should be left to the voters to decide how much importance is to be given to educational qualification of a candidate.  
 (1) I, II and IV only (2) I, III and V only (3) I, IV and V only (4) I, II and V only
92. Which of the following terms were inserted in the Preamble to the Indian Constitution by the 42nd Amendment Act, 1976 ?  
 I. Integrity  
 II. Secular  
 III Socialist  
 IV. Unity  
 (1) I, III and IV (2) II and III (3) I, II and III (4) I, II and IV
93. Which of the following international institutions has a more democratic way of decision-making on matters of global importance ?  
 (1) General Assembly of the United Nations  
 (2) International Monetary Fund  
 (3) Security Council of the United Nations  
 (4) World Bank
94. Which of the following factors have contributed to changes in the caste system?  
 I. Economic development  
 II. Language  
 III. Education  
 IV. Elections  
 V. Region  
 (1) I, III, and IV (2) II, IV and V (3) II, III and IV (4) I, III and V

Resonance  
 Educating for better tomorrow

95. Match List I with List II and select the answer using the codes given below.

List I		List II	
A.	Supervises the overall functioning of all the political institutions in the country	I.	The Supreme Court
B.	Distributes and redistributes work to the ministers	II.	The President
C.	Ministers may have different views but have to own up every decision	III.	The Prime Minister
D.	Determines the constitutionality of any contentious action	IV.	The Cabinet

- (1) A-IV, B-III, C-II, D-I    (2) A-II, B-III, C-IV, D-I    (3) A-II, B-IV, C-III, D-I    (4) A-III, B-IV, C-I, D-II

96. Calculate the female literacy rate from the given data.

Gender	Total Persons	Literate Persons
Males	1200	1050
Females	580	340
Total	1780	1390

- (1) 32.5                      (2) 19.1                      (3) 58.6                      (4) 28.3

97. Which of these activities contributes to India's national income?

- I. Cooking at home  
 II. A teacher teaching his children at home  
 III. A doctor prescribing medicines in a clinic  
 IV. Cooking in a restaurant

- (1) I and II                      (2) II and III                      (3) III and IV                      (4) I and IV

98. In an imaginary economy the monetary value of contributions of primary sector, public sector, secondary sector and service sector are Rs.100, Rs.25, Rs. 28 and Rs. 77 respectively. The gross domestic product of the economy is

- (1) Rs. 100                      (2) Rs. 205                      (3) Rs. 153                      (4) Rs. 230

Resonance  
Educating for better tomorrow

99. Four families in a village, which has only a ration shop. have access to foodgrains as shown in the table. Identify\_ the families that lack food security.

Family	Food requirement in kg	Food grain price / kg	Money available to each family for buying food grains	Possessing Ration card
A	50	10	600	Yes
B	30	10	330	No
C	20	10	180	Yes
D	40	10	400	Yes

- (1) A and B                      (2) B and C                      (3) C and D                      (4) D and A

100. Robinson Crusoe goes to sea with a net for fishing. Classify the factors of production and choose the - appropriate option given below.

Item		Classification	
A.	Knowledge of fishing	I.	Physical Capital
B.	Net	II.	Labour
C.	Sea	III.	Human Capital
D.	Swimming	IV.	Land

- (1) A-III,B-IV,C-II,D-I                      (2) A-IV,B-III,C-I,D-II                      (3) A-III,B-I,C-IV,D-II                      (4) A-II,B-I,C-III,D-IV

Resonance  
Educating for better tomorrow